




Counting in 2s


Count in 2s on the first two grids. Colour the numbers you land on. Write all the numbers from 1–20 in order on the blank grid. Count in 2s and colour the numbers you land on.

1	2	3	4	5	6	7	8	9	10
11	12	13	14	15	16	17	18	19	20



1	2	3	4	5
6	7	8	9	10
11	12	13	14	15
16	17	18	19	20





I can count on in 2s

