

# Adding and subtracting

Add the missing numbers in questions 1–6. Write a number sentence to find the amount of money left after each train ticket is bought in questions 7–12.

1.  $224 + 29 = \square$

2.  $342 + 19 = \square$


3.  $148 + 29 = \square$

4.  $563 + 21 = \square$


5.  $236 + 19 = \square$


6.  $472 + 21 = \square$





7.  £346  
 ticket: £19  
 $£346 - £19 =$


---

8.  £542  
 ticket: £19  
 \_\_\_\_\_

9.  £638  
 ticket: £19  
 \_\_\_\_\_

10.  £456  
 ticket: £21  
 \_\_\_\_\_

11.  £164  
 ticket: £21  
 \_\_\_\_\_

12.  £288  
 ticket: £21  
 \_\_\_\_\_



I can add and subtract 2-digit and 3-digit numbers

