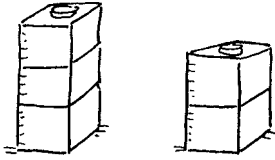


Near doubles

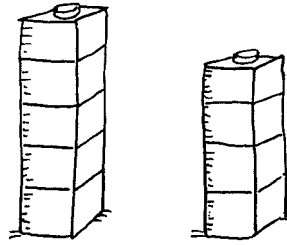
Can you make some near doubles with cubes?

1.



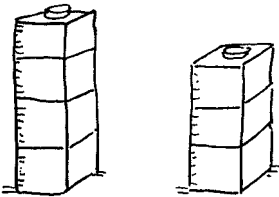
$$3 + 2 = \square$$

2.




$$5 + 4 = \square$$

3.



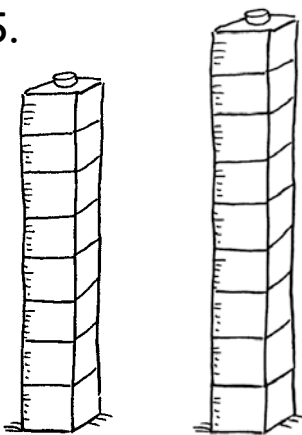
$$4 + 3 = \square$$

4.



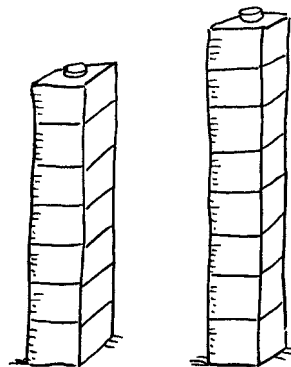
$$6 + 5 = \square$$

5.



$$8 + 9 = \square$$

6.



$$7 + 8 = \square$$



I can add two numbers using near doubles

