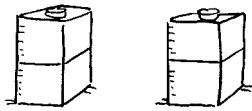


Towers

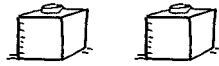
Write double the number.

1.



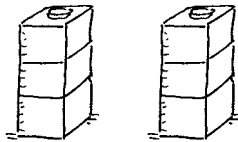
$$2 + 2 = \square$$

2.



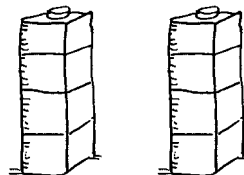
$$1 + 1 = \square$$

3.



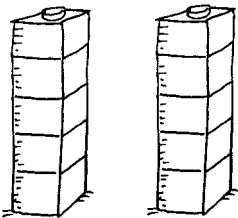
$$3 + 3 = \square$$

4.



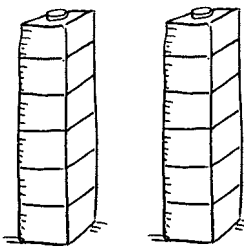
$$4 + 4 = \square$$

5.



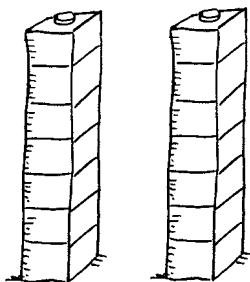
$$5 + 5 = \square$$

6.



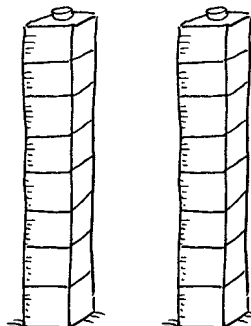
$$6 + 6 = \square$$

7.



$$7 + 7 = \square$$

8.



$$8 + 8 = \square$$



I can use doubles to add numbers

