



Adding machines

Complete the tables for these adding machines.



1.

In	23	29	38	17	46	19
Out	27					




2.

In	37	26	18	45	59	46
Out						



3.

In	13	37	24	48	66	79
Out						



I can say how many more by adding numbers

