

# Adding and taking away

Complete these subtractions. Make up three of your own, and write them in the raindrops.

1.  $3 + 5 = 8$                        $8 - 5 = \square$



2.  $2 + 4 = 6$                        $6 - 4 = \square$





3.  $5 + 2 = 7$                        $7 - 2 = \square$





4.  $4 + 5 = 9$                        $9 - 5 = \square$





5.  $6 + 3 = 9$                        $9 - 3 = \square$

6.  $3 + 3 = 6$                        -  =  $\square$



7.  $3 + 6 = 9$                        -  =  $\square$

8.  $6 + 2 = 8$                        -  =  $\square$



I can use the links between related additions and subtractions

