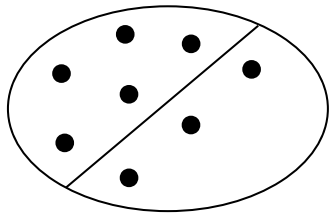
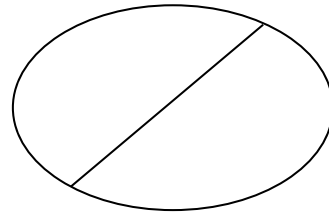


Pairs to make

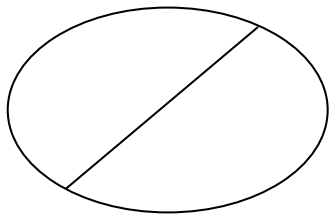
Draw two groups of items and find the total.



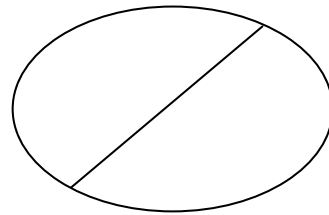
$$\boxed{5} + \boxed{3} = \boxed{8}$$



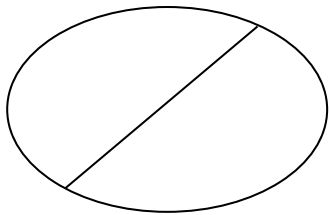
$$\boxed{} + \boxed{} = \boxed{}$$



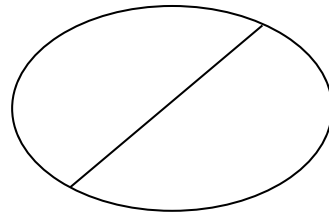
$$\boxed{} + \boxed{} = \boxed{}$$



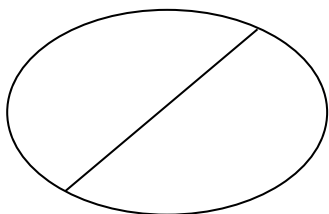
$$\boxed{} + \boxed{} = \boxed{}$$



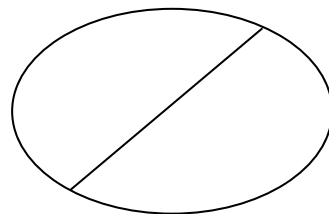
$$\boxed{} + \boxed{} = \boxed{}$$



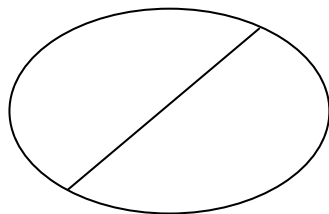
$$\boxed{} + \boxed{} = \boxed{}$$



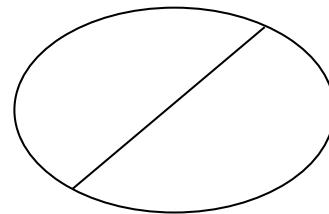
$$\boxed{} + \boxed{} = \boxed{}$$



$$\boxed{} + \boxed{} = \boxed{}$$



$$\boxed{} + \boxed{} = \boxed{}$$



$$\boxed{} + \boxed{} = \boxed{}$$



I can count the total of two groups

