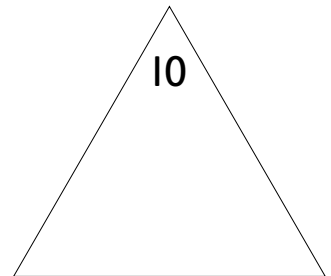
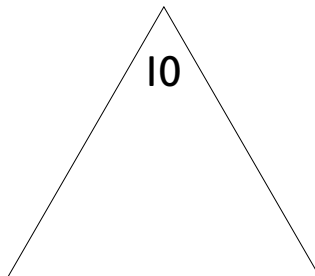
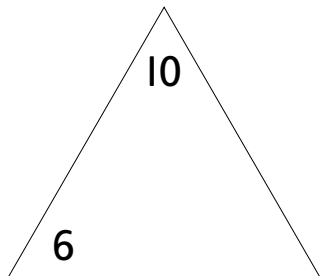
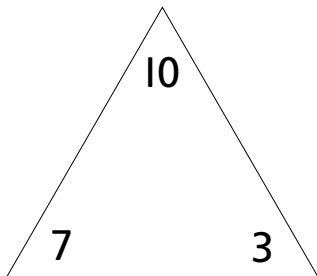


# Trio tricks

Use the numbers inside the triangles to make addition and subtraction sentences, then make up some of your own.



$7 + 3 = 10$

\_\_\_\_\_

\_\_\_\_\_

\_\_\_\_\_

$3 + 7 = 10$

\_\_\_\_\_

\_\_\_\_\_

\_\_\_\_\_

$10 - 3 = 7$

\_\_\_\_\_

\_\_\_\_\_

\_\_\_\_\_

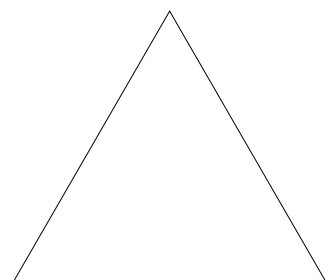
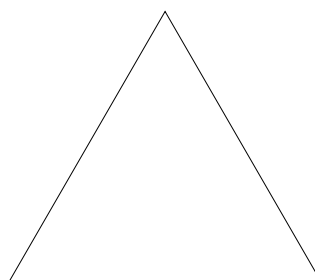
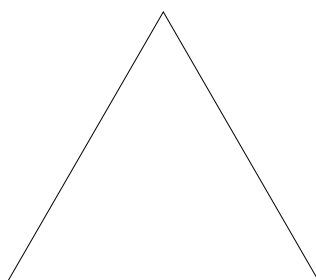
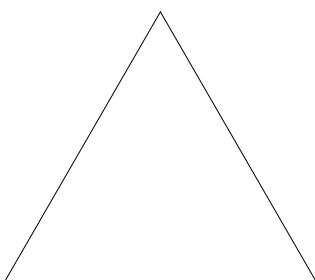
$10 - 7 = 3$

\_\_\_\_\_

\_\_\_\_\_

\_\_\_\_\_

Make some of your own.



\_\_\_\_\_

\_\_\_\_\_

\_\_\_\_\_

\_\_\_\_\_

\_\_\_\_\_

\_\_\_\_\_

\_\_\_\_\_

\_\_\_\_\_

\_\_\_\_\_

\_\_\_\_\_

\_\_\_\_\_

\_\_\_\_\_

\_\_\_\_\_

\_\_\_\_\_

\_\_\_\_\_

\_\_\_\_\_



I can use the links between related additions and subtractions

