
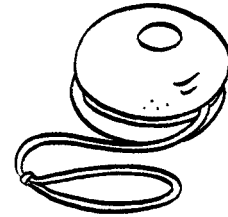


Half price


These toys are all in a half-price sale. Write their new prices.




1. 34p $\frac{1}{2}$ → 17p



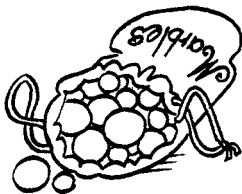
2. 56p $\frac{1}{2}$ →




3. 72p $\frac{1}{2}$ →




4. 28p $\frac{1}{2}$ →




5. 42p $\frac{1}{2}$ →



6. 96p $\frac{1}{2}$ →



7. £1.26 $\frac{1}{2}$ →



8. £2.58 $\frac{1}{2}$ →



I can work out half price

