







# Matching fractions

Some fractions have a matching partner. Write the pairs.  
Which ones have no partner?



\_\_\_\_\_

\_\_\_\_\_

\_\_\_\_\_

\_\_\_\_\_

\_\_\_\_\_

\_\_\_\_\_ has no partner



I can work out which fractions are equal

