
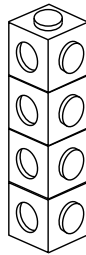


# Halves to quarters


Use cubes to make each starting number. Find a half and then a quarter. Complete the table.



8 cubes



4 cubes  
 $\frac{1}{2}$  of 8 = 4



2 cubes  
 $\frac{1}{2}$  of 4 = 2  
 $\frac{1}{4}$  of 8 = 2

Number of cubes	Half	Quarter
8	4	2
12		
16		
20		
24		
28		
32		



I can find halves and quarters of a number of objects

