



# Which shop?

Sam wants to buy three items online. Work out the price, including delivery, that he would pay at each of these online stores.

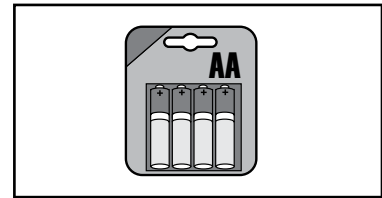
## 1. Hilldales



£199



£74



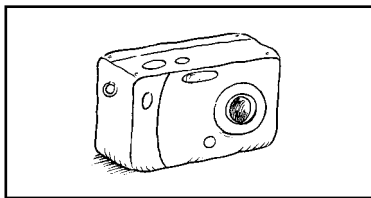
£4.99

Cost of all 3 items = .....


Delivery **£4.75**

Total cost = .....

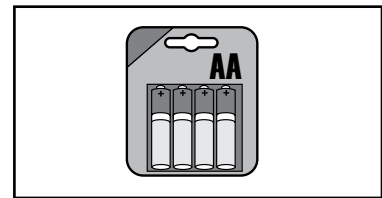
## 2. Hanleys



£195



£78



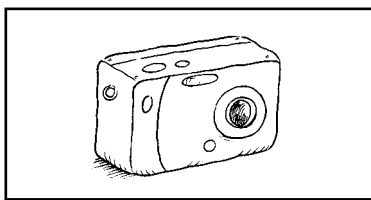
£6.99

Cost of all 3 items = .....


Delivery **£5.49**

Total cost = .....

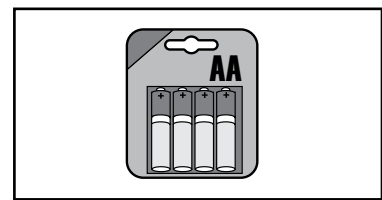
## 3. Murrys



£207



£66



£7.25

Cost of all 3 items = .....

Delivery **free**

Total cost = .....

4. Plan how he can buy the three items more cheaply by buying from more than one shop. Don't forget delivery charges. Write your answer on the back of this sheet.



I can work out costs and decide which is cheaper

