

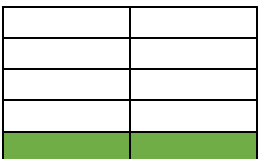




Date issued: 19.5.20

Class <u>P3</u> Numeracy and Maths		
Task 1	Task 2	Task 3
<p>to recognise tenths</p> <p>What does this diagram show?</p>  <p>It shows 3 tenths (3 out of 10 equal parts). We write the number like this $\frac{3}{10}$</p> <p>Write the fractions:</p> <p>1.</p>  <p>2.</p>  <p>3.</p>	<p>L.I. to develop and apply numeracy skills</p> <p>Log on to Sumdog to practise your skills and help the P3 classes to do well in the West Lothian competition.</p> <p>It is open until 8pm on Thursday. Good luck!</p>	<p>L.I. to use the draw a picture strategy</p> <p>*When using this strategy, draw a picture/s to help to solve the problem*</p> <p>Have a go at the problem below.</p> <p>Farm Fun:</p> <p>In a barn there are some hens and some cows.</p> <p>There are 4 heads and 12 legs altogether. How many hens and how many cows are there in the barn?</p>



Show the fractions:

4. four tenths

5. 8 tenths

6. $\frac{6}{10}$

**Challenge- Draw a rectangle.
Colour one tenth green, colour
four tenths yellow, colour two
tenths blue. How many are left?**

