

Writing fractions

Fill in the number of shaded parts and the fractions shaded. Then make up some of your own.

1.


I whole shape divided into 4 equal parts.
There are 4 quarters.

Number of shaded parts: 1

Fraction shaded:

1

4



2.

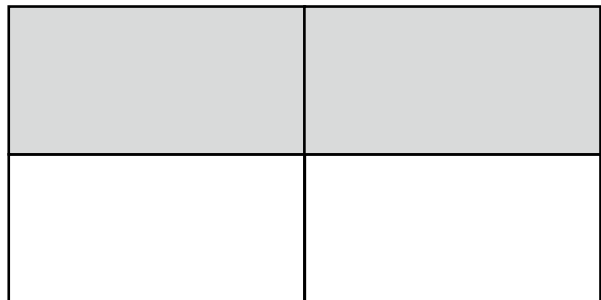
I whole shape divided into 4 equal parts.
There are 4 quarters.

Number of shaded parts: _____

Fraction shaded:

--

--



3.


I whole shape divided into 4 equal parts.
There are 4 quarters.

Number of shaded parts: _____

Fraction shaded:

--

--



I can make the link between pictures of quarters and the way I write the fractions

