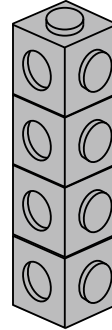
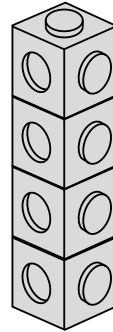
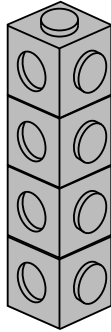
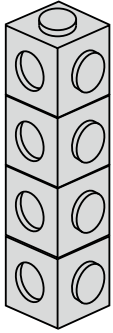


# Quarters

Use cubes to make each starting number. Find a quarter, two quarters, a half and three quarters. Complete the table. What do you notice?



$$\frac{1}{4} \text{ of } 16 = 4$$

$$\frac{2}{4} \text{ of } 16 = 8$$

$$\frac{3}{4} \text{ of } 16 = 12$$

Number of cubes	$\frac{1}{4}$	$\frac{2}{4}$	$\frac{1}{2}$	$\frac{3}{4}$
8				
12				
16	4	8	8	12
20				
24				
28				
32				

---



---



---



I can find halves and quarters of a number of objects

