

# Shade the Fraction – Wholes / Halves / Quarters

Name: \_\_\_\_\_

Date: \_\_\_\_\_




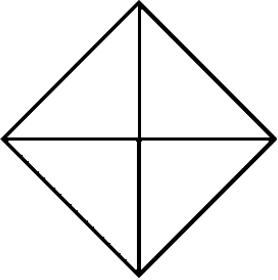
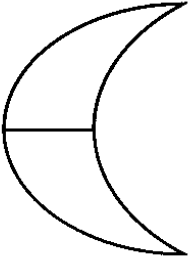
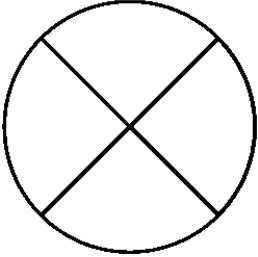

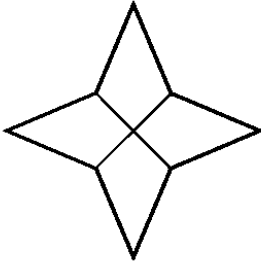
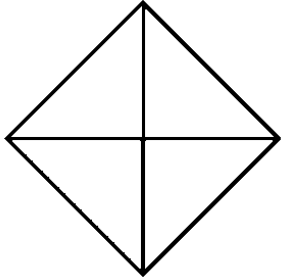
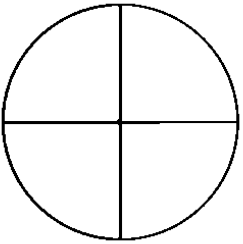
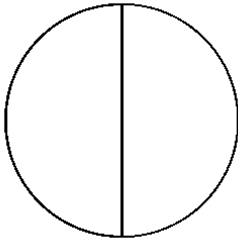

$\frac{1}{4}$  = one quarter

$\frac{1}{2}$  = one half

$\frac{2}{4}$  = two quarters

$\frac{3}{4}$  = three quarters

- Shade the given fraction for each shape.

|  |  |  |
|--|--|--|
| <br>$\frac{1}{2}$   | <br>1               | <br>$\frac{3}{4}$   |
| <br>$\frac{1}{4}$  | <br>$\frac{1}{2}$  | <br>$\frac{3}{4}$  |
| <br>$\frac{1}{4}$ | <br>$\frac{2}{4}$ | <br>$\frac{1}{4}$ |
| <br>$\frac{3}{4}$ | <br>$\frac{1}{2}$ | <br>$\frac{2}{4}$ |

- Do you notice anything about the  $\frac{2}{4}$  shapes?

LO: To identify wholes, halves and quarters of shapes.

