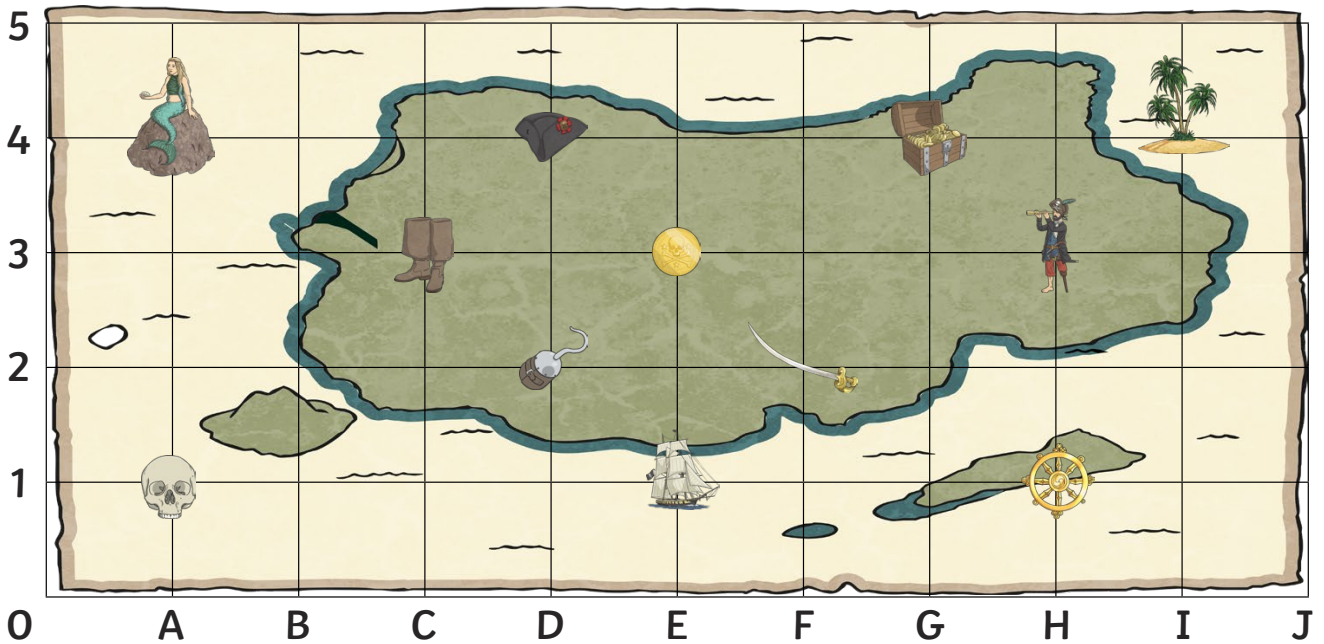




# Pirate Map Coordinates

I can read, write and plot coordinates in the first quadrant.



What is at these coordinates on the pirate map?

(I,4) = \_\_\_\_\_


(A,1) = \_\_\_\_\_


(E,3) = \_\_\_\_\_


(F,2) = \_\_\_\_\_


(G,4) = \_\_\_\_\_

Write the coordinate of these places on the pirate map:

 = (      ,      )

 = (      ,      )

 = (      ,      )

 = (      ,      )

 = (      ,      )

Plot these coordinates on the grid using a cross.

**(B,1)**

**(C,4)**

**(E,2)**

**(I,1)**

**(G,3)**