
































Class P1 Numeracy												
Numeracy Task 1	Numeracy Task 2	Numeracy Task 3										
<p>Aim: To understand mathematical vocabulary in a word problem and to calculate addition sums.</p> <div style="border: 2px solid yellow; padding: 10px; margin: 10px 0;"> <p>If you had 14 squares of chocolate and 5 chocolate fingers, how many do you have in total?</p>  </div> <p>Extra challenge: Can you draw and write your own addition word problem?</p>	<p>Aim: To recognise coins up to £2.</p> <p>You will need a selection of coins.</p> <p>Can you draw and colour all the coins up to £2?</p> <p>Extra challenge: Can you sort them into size order? Can you sort them into value order?</p>	<p>Aim:</p> <p>Can you make a doubles sum by laying out loose parts onto a piece of paper/table/carpet? (pasta, rice, leaves, sticks)</p> <p style="text-align: center;">DOUBLES</p> <table border="1" style="width: 100%; text-align: center;"> <tbody> <tr> <td> $1+1=2$</td> <td> $6+6=12$</td> </tr> <tr> <td> $2+2=4$</td> <td> $7+7=14$</td> </tr> <tr> <td> $3+3=6$</td> <td> $8+8=16$</td> </tr> <tr> <td> $4+4=8$</td> <td> $9+9=18$</td> </tr> <tr> <td> $5+5=10$</td> <td> $10+10=20$</td> </tr> </tbody> </table> <p>Extra challenge: Can you challenge yourself to try bigger numbers?</p> <p>Can you spot any doubles around your house?</p>	 $1+1=2$	 $6+6=12$	 $2+2=4$	 $7+7=14$	 $3+3=6$	 $8+8=16$	 $4+4=8$	 $9+9=18$	 $5+5=10$	 $10+10=20$
 $1+1=2$	 $6+6=12$											
 $2+2=4$	 $7+7=14$											
 $3+3=6$	 $8+8=16$											
 $4+4=8$	 $9+9=18$											
 $5+5=10$	 $10+10=20$											

--	--	--	--