


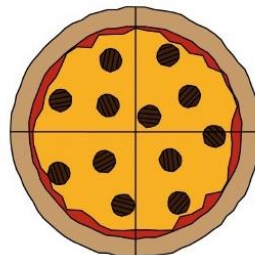
Pizza Fractions



1. 2 slices

The fraction is $\frac{1}{2}$

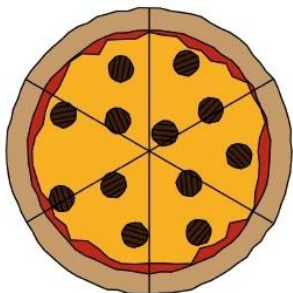
We call them halves



4. _____ slices

The fraction is _____

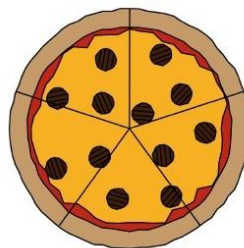
We call them _____



2. _____ slices

The fraction is _____

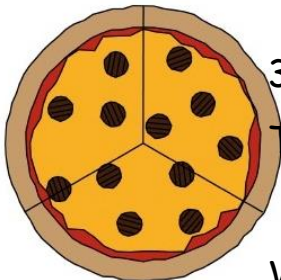
We call them _____



5. _____ slices

The fraction is _____

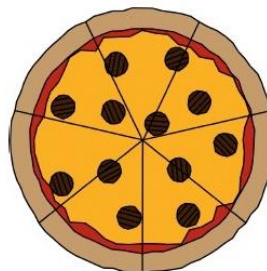
We call them _____



3. _____ slices

The fraction is _____

We call them _____



6. _____ slices

The fraction is _____

We call them _____

WORD BANK

halves

thirds

fifths

quarters

sixths

sevenths


Pizza Fractions

Miss Hall is feeling hungry and has stolen some of your pizza! What fraction of pizza do you need back so you can eat it all!




I need a ___ back.

$$+ \quad = 1$$




I need a ___ back.

$$+ \quad = 1$$



I need a ___ back.

$$+ \quad = 1$$



I need a ___ back.

$$+ \quad = 1$$

Now I've stolen...

2/8 of your pizza, how much do you need back to make a whole?

6/12 of your pizza, how much do you need back to make a whole?

REMEMBER !



$$\frac{1}{2}$$

How many pieces we have or need.

$$2$$

How many pieces its divided into.