

Convert pounds and pence

1 a) Circle £1



b) Circle £1



c) Circle £1

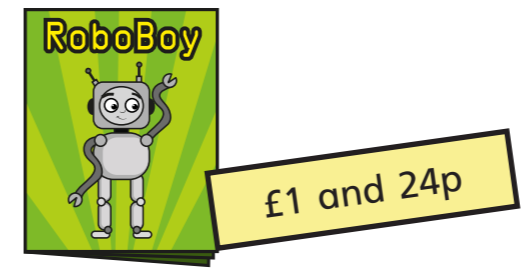


d) Circle £10

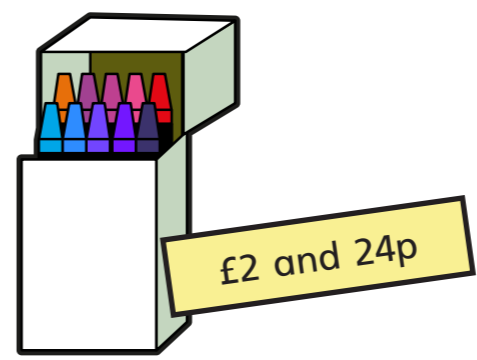


2 How many 1p coins do you need to make £1?

3 Write the price of each item in pence.



p



p



p

4 Write each amount in pounds and pence.

a) 274p = £ and p b) 592p = £ and p

374p = £ and p 591p = £ and p

474p = £ and p 590p = £ and p

c) $111\text{p} = \text{£} \square$ and \square p

d) $405\text{p} = \text{£} \square$ and \square p

5 Annie has some coins.



a) How much money does Annie have? $\text{£} \square$ and \square p

b) What is 10p more? $\text{£} \square$ and \square p

What is 10p less? $\text{£} \square$ and \square p

c) What is 100p more? $\text{£} \square$ and \square p

What is 100p less? $\text{£} \square$ and \square p


6 What amount is represented in each box?



$\text{£} \square$ and \square p




$\text{£} \square$ and \square p



$\text{£} \square$ and \square p



7 Eva empties out her money box.



How much money was in her money box? $\text{£} \square$ and \square p

How did you count the coins? Compare with a partner.

8 a) What is the fewest number of coins you can use to represent 315p?

b) Use 6 coins to make an amount that is more than £3, but less than £4. Draw your answer.



Compare answers with a partner.