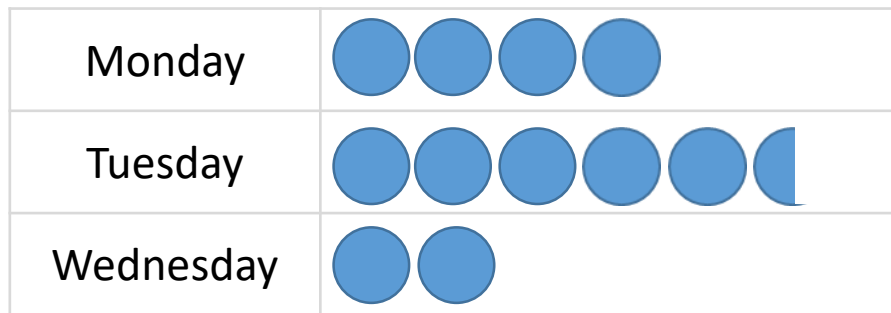


- 1 The pictogram shows the number of children who walk to school each day.






 = 2 children

There are 20 children in the class.

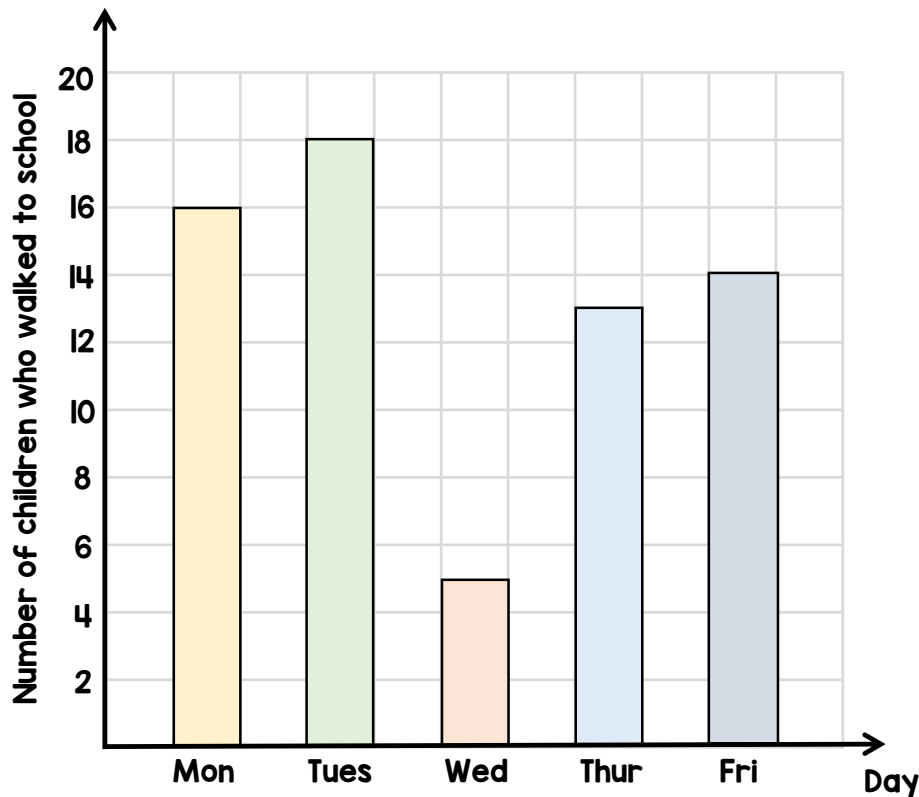
How many children did not walk to school on Tuesday?

- 2 These pairs of numbers all have the same total.



Work out the missing numbers?

- 1 There are 25 children in a class. The bar chart shows the number of children in the class who walk to school each day.



- (a) What percentage of the class walked to school on Thursday?
(b) One of the days it rained. Which day do you think it was? Explain to your friend.

- 2 Order the following numbers. Start with the smallest.

3.1

$\frac{18}{5}$

$3\frac{1}{4}$