

Wednesday 25th March 2020

Numeracy Activities

10.45-11.30am

11.30-12.30 – Mrs Benzeval

- Complete 1 Sum dog task online to get you using your mental maths strategies.

This week we are going to focus on Fractions.

To identify a fraction of an

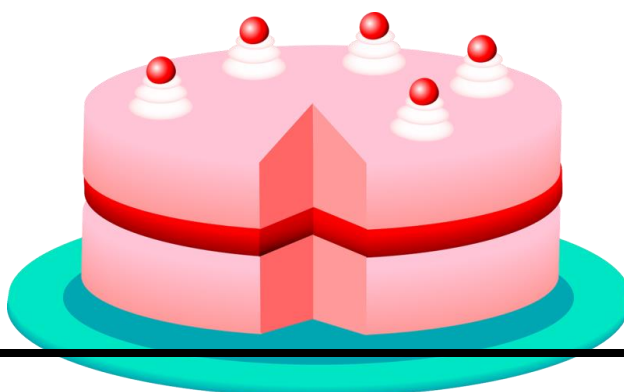
Starter: How do you feel about splitting a shape into equal parts?

Warm Up Task

Play the Kahoot quiz to revise what we have explored so far within Fractions. Follow the link and press play!

<https://create.kahoot.it/share/fractions-of-a-shape/3bd79b44-f247-4254-b10b-e46dccc65f4c>


Question 5 is tricky!



Check in task : Copy and complete in your blue numeracy jotter.

1.

Odd One Out



$$\frac{1}{2}$$




One half

Which is the odd one out?
Explain your answer.

2.


Rosie says the shaded part of the shape does not show a half because there are four parts, not two equal parts.



Do you agree? Explain why.

3.

Dora is asked to shade half of her shape.
This is what she shades.



Is she correct? Explain why.

ICT Task

Play Pizza Party on Primary Games

<https://www.primarygames.com/fractions/start.htm>