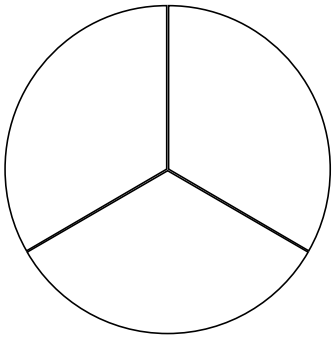
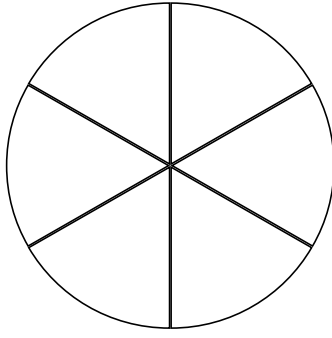


Colour in the circles to represent each fraction and then put each fraction in order from smallest to largest.

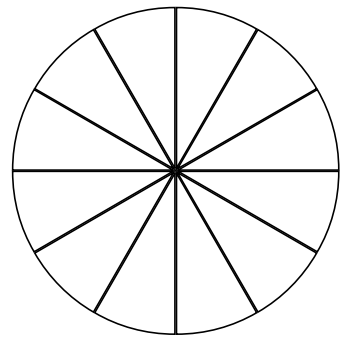
$$\frac{1}{3}$$



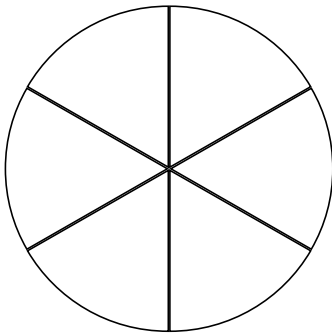
$$\frac{4}{6}$$



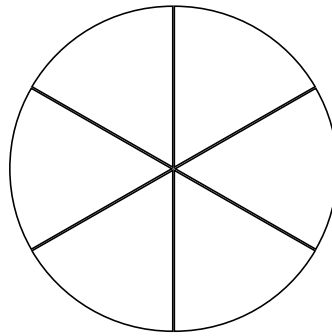
$$\frac{3}{12}$$



$$\frac{3}{6}$$



$$\frac{5}{6}$$



Smallest

Largest