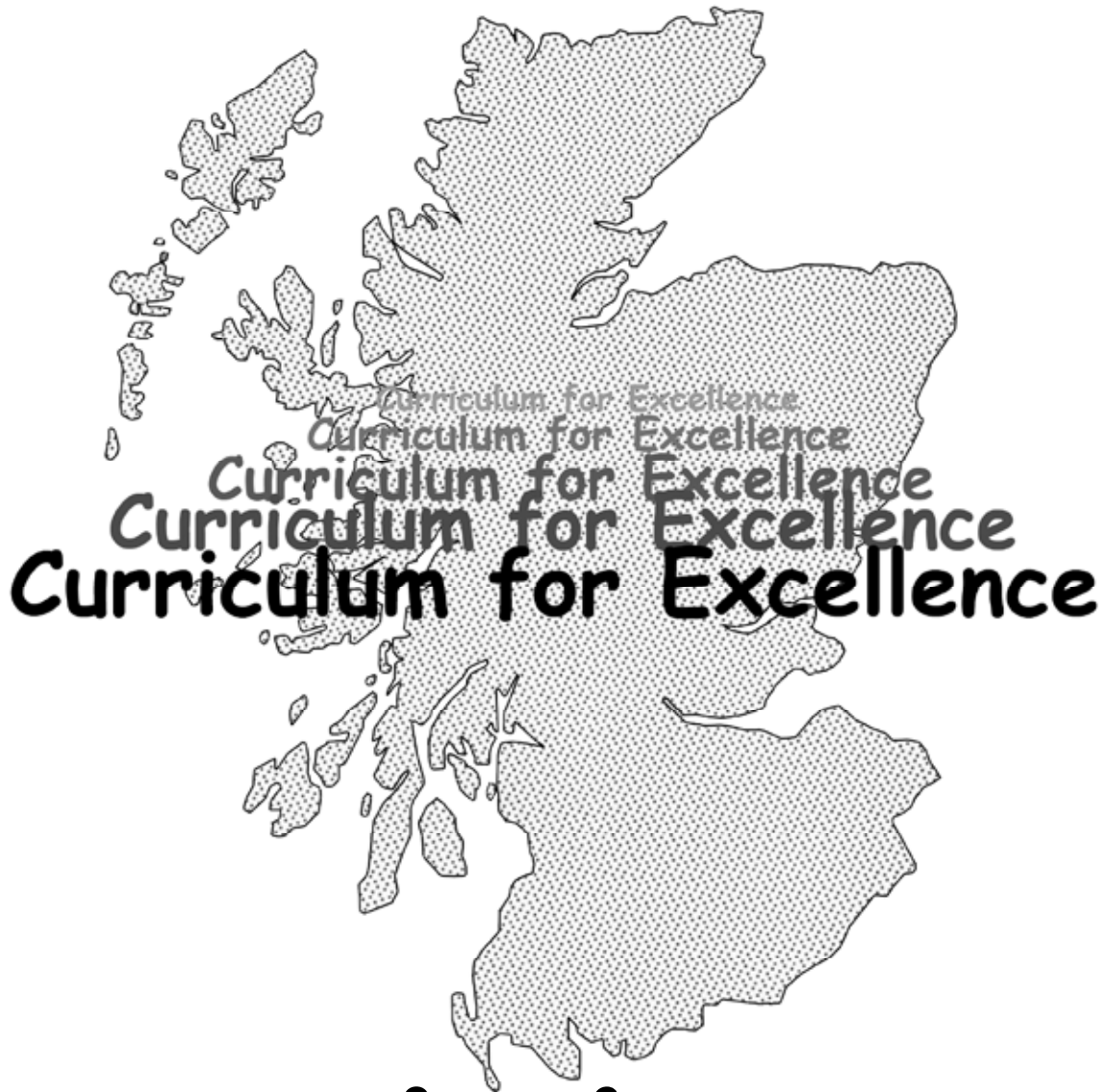




TeeJay
Publishers

Book 1b



Worksheets

1. What does the 6 stand for in :-

a 165

b 1206

c 693

d 6097

2. Write the following numbers using **digits** :-

a one hundred and thirty four

b one thousand four hundred and sixty nine

c three thousand eight hundred and seventy two

d five thousand three hundred and fifty six

e nine thousand five hundred and thirty eight

f six thousand nine hundred and ten

g four thousand seven hundred

h seven thousand and ninety nine

i one thousand one hundred and one

3. Write these numbers using **words** :-

a 482

b 697

c 2114

d 9330

e 5666

Show this to your teacher, then go to page 2 Exercise 1

1. Write the number that comes :-

a 10 after 190

b 100 after 2300

c 20 after 780

d 50 after 3450

e 200 after 1800

f 1000 after 6300

2. Write the number that comes :-

a 10 before 310

b 100 before 5200

c 20 before 610

d 50 before 6150

e 300 before 5200

f 2000 before 7100

3. Put each of these groups of numbers in the correct order.

Start with the **lowest**.

a 698, 702, 689

b 278, 308, 380, 280

c 2987, 2978, 2897, 2888

d 1756, 1876, 1777, 1798, 1808

4. Put each of these groups of numbers in the correct order.

Start with the **highest**.

a 938, 899, 983

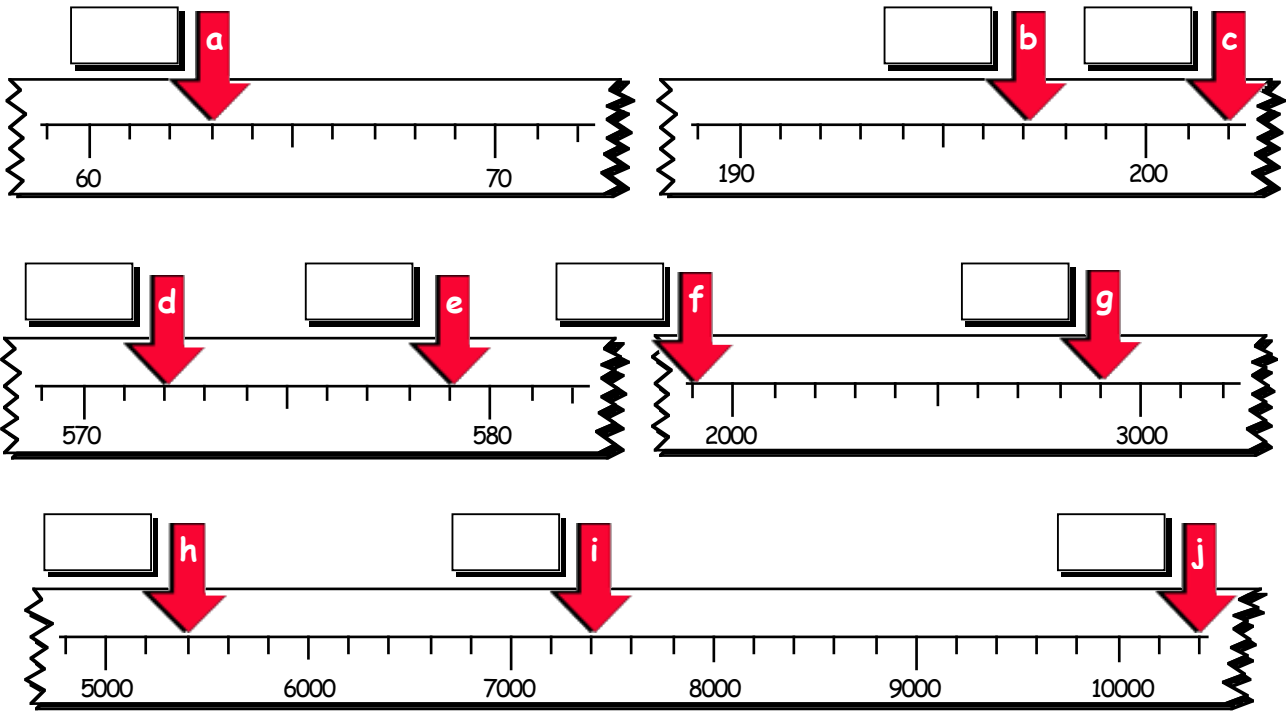
b 598, 618, 680, 589

c 4376, 4763, 4736, 4637

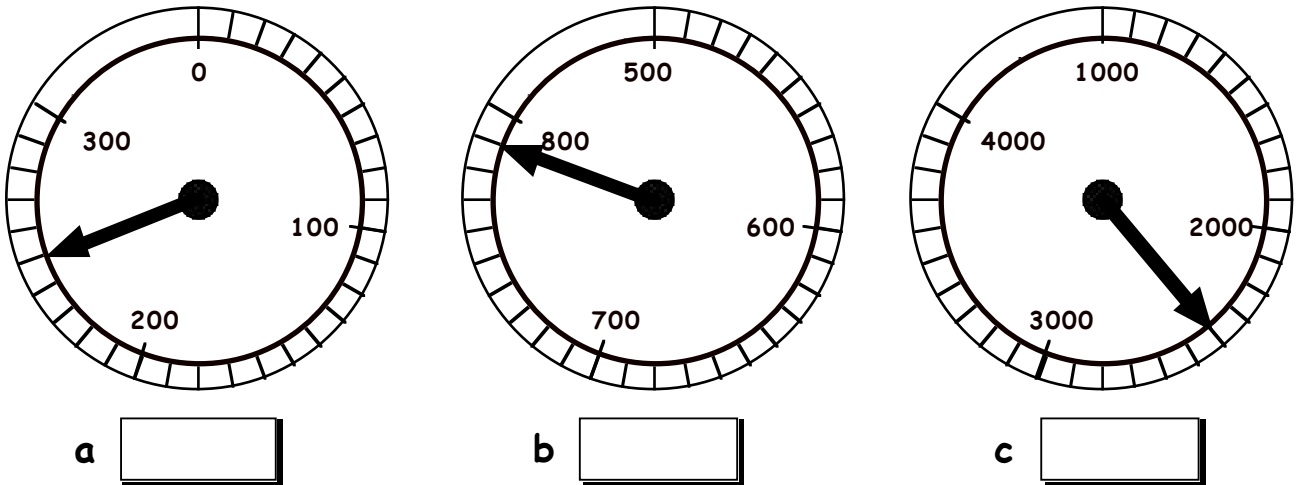
d 2098, 2108, 2801, 2189, 2089

Continued on next sheet

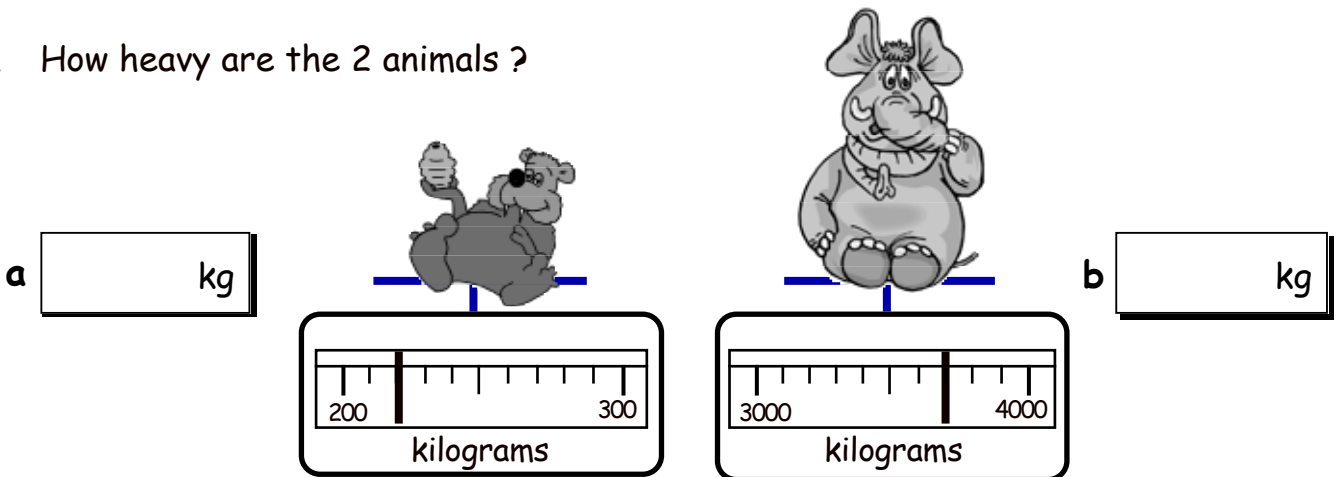
5. To what numbers are the arrows pointing ?



6. To what numbers are the arrows pointing ?

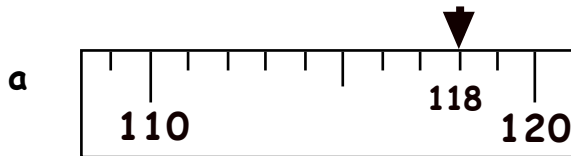


7. How heavy are the 2 animals ?

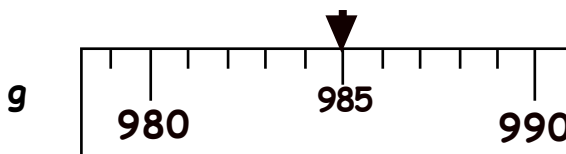
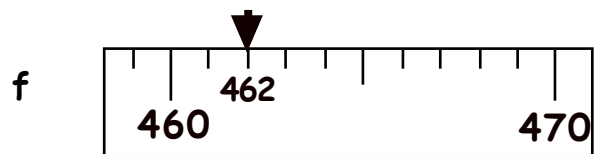
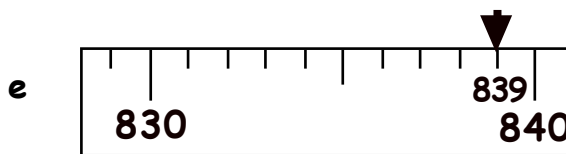
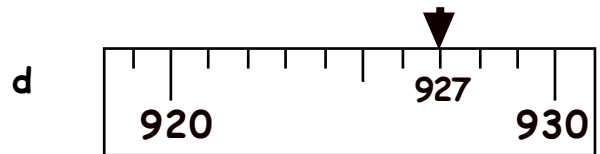
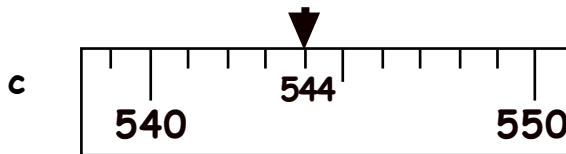
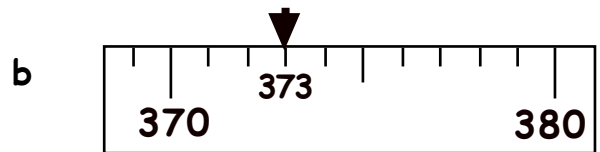


Show this to your teacher, then go to page 3, Question 5

1. Use the scales below to **round** the arrowed numbers to the nearest **ten**.
Answer in the boxes.



(118 is nearer to 120 than it is to 110)



2. Round each number to the nearest 10.

a 118 →

b 323 →

c 629 →

d 945 →

e 254 →

f 757 →

g 569 →

h 874 →

i 496 →

j 1092 →

k 2324 →

l 5097 →

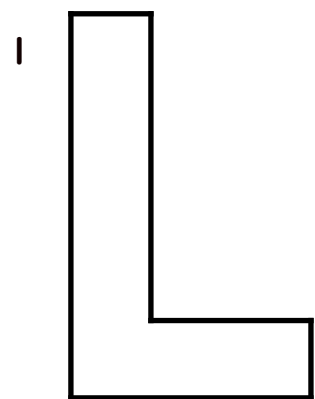


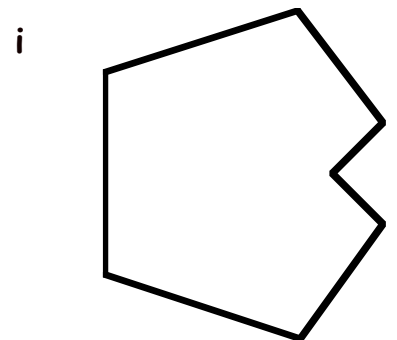



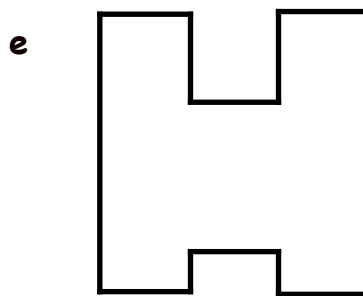
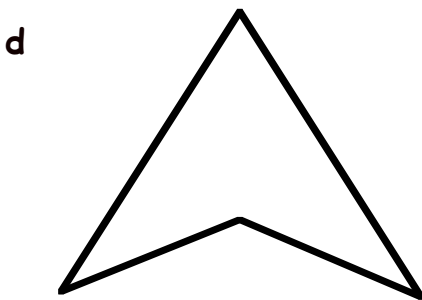
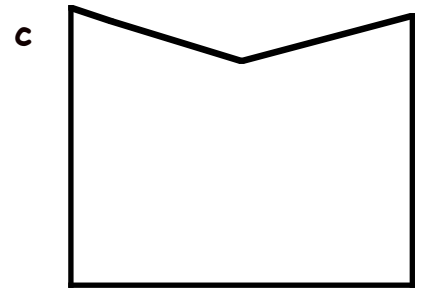
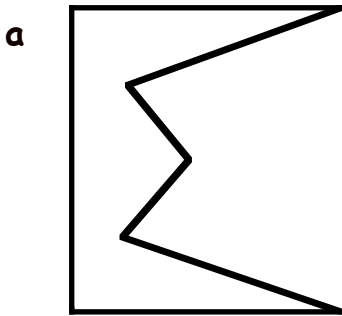
Show this to your teacher, then go to page 4, Exercise 2

Estimate the answers to these using **rounding** to the nearest 10 :-

1. $117 + 129$ is about the same as $120 + 130$ which is about 250
2. $139 + 238$ is about the same as $\quad + \quad$ which is about \quad
3. $212 + 157$ is about the same as $\quad + \quad$ which is about \quad
4. $514 + 96$ is about the same as $\quad + \quad$ which is about \quad
5. $338 + 296$ is about the same as $\quad + \quad$ which is about \quad
6. $429 + 161$ is about the same as $\quad + \quad$ which is about \quad
7. $627 + 233$ is about the same as $\quad + \quad$ which is about \quad
8. $718 + 153$ is about the same as $\quad + \quad$ which is about \quad
9. $829 + 138$ is about the same as $\quad + \quad$ which is about \quad
10. $609 + 324$ is about the same as $\quad + \quad$ which is about \quad
11. $468 - 133$ is about the same as $470 - 130$ which is about \quad
12. $562 - 115$ is about the same as $\quad - \quad$ which is about \quad
13. $879 - 259$ is about the same as $\quad - \quad$ which is about \quad
14. $991 - 749$ is about the same as \quad which is about \quad
15. $653 - 629$ is about the same as \quad which is about \quad
16. $837 - 29$ is about the same as \quad which is about \quad

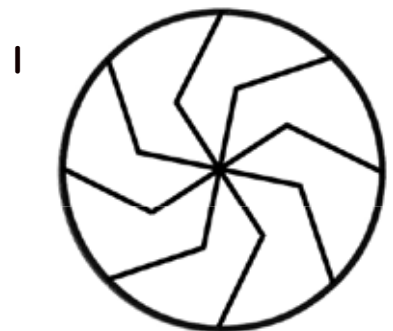
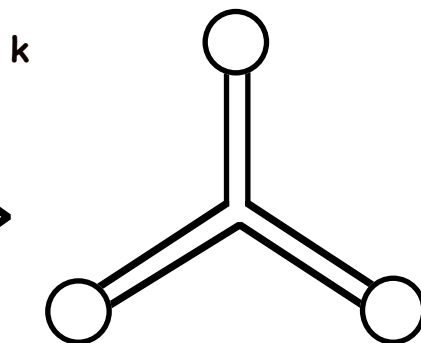
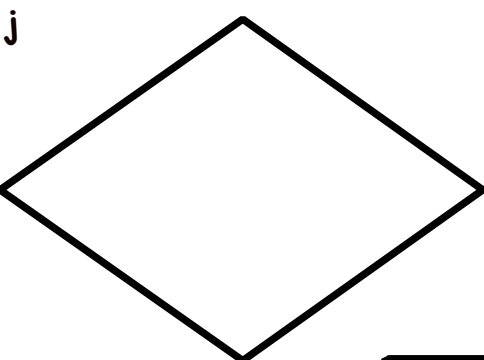
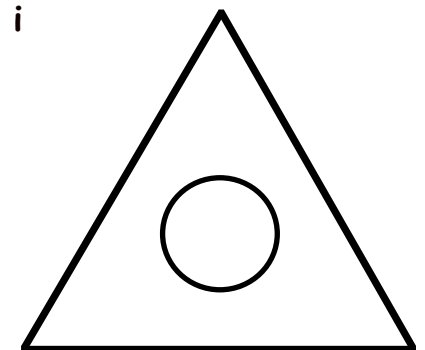
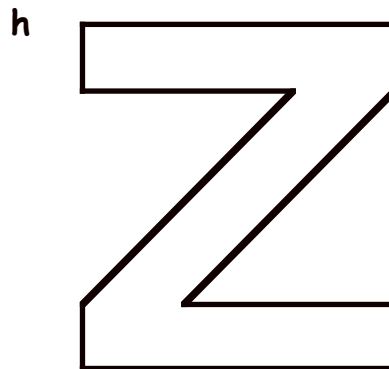
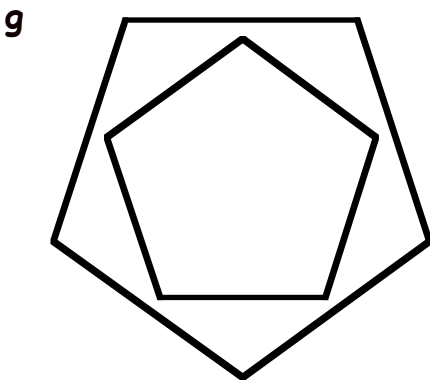
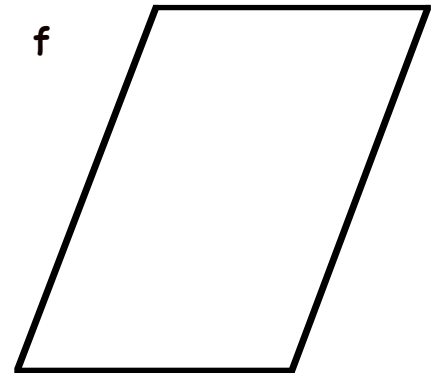
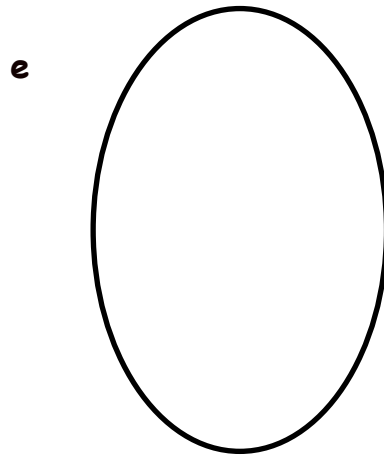
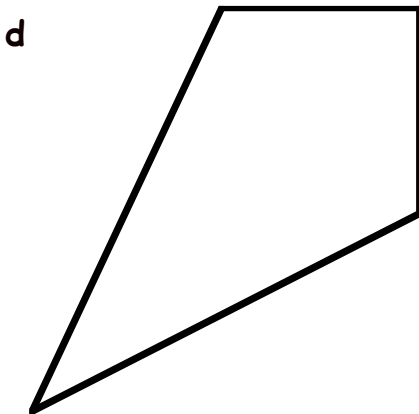
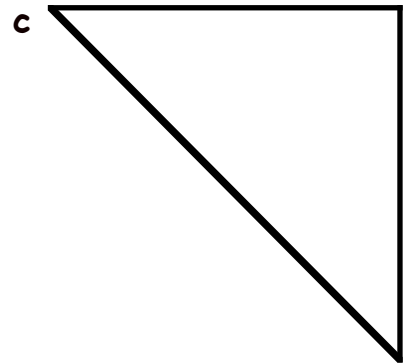


Show this to your teacher, then go to page 6 Exercise 3

1. Shade or colour the shapes that have **symmetry**.



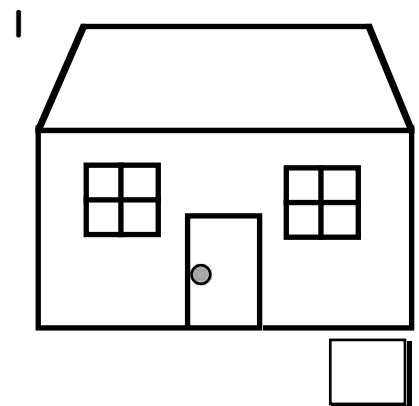
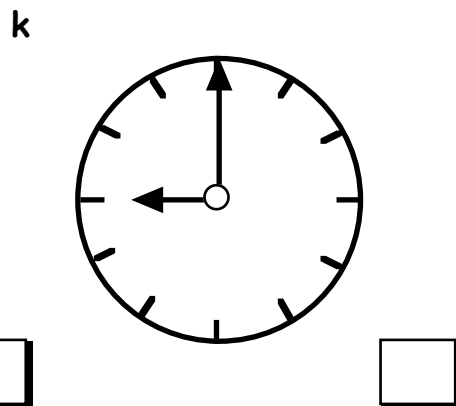
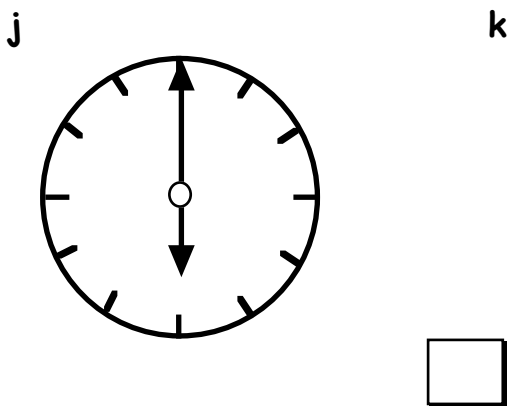
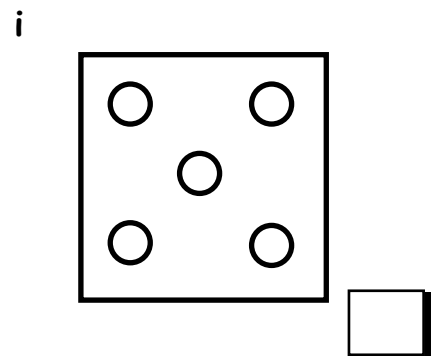
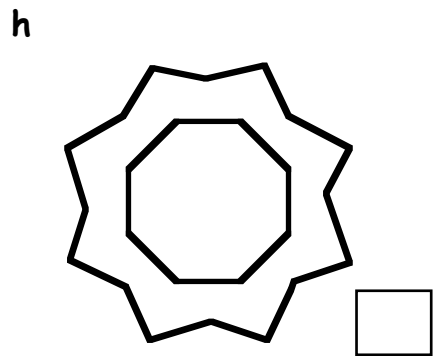
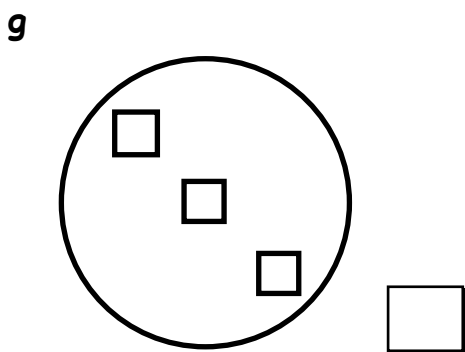
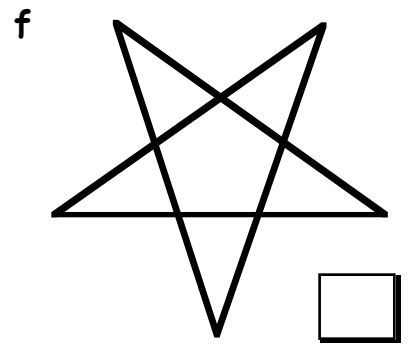
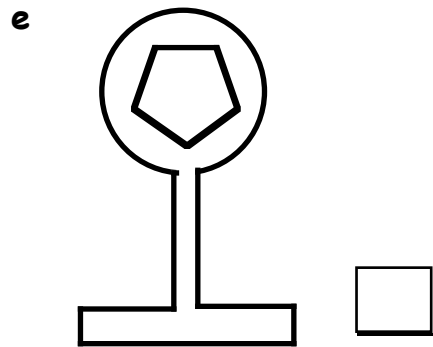
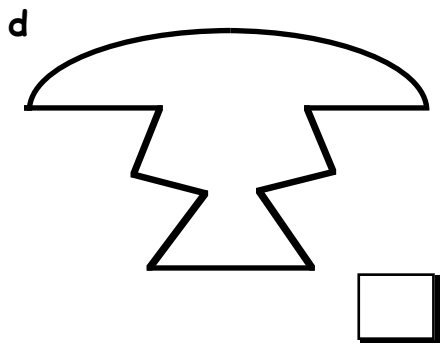
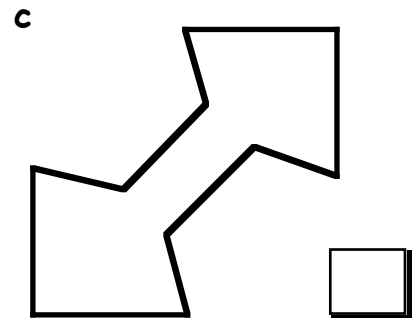
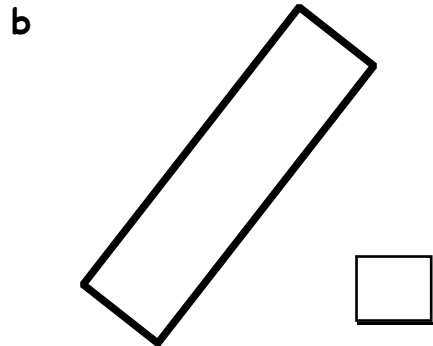
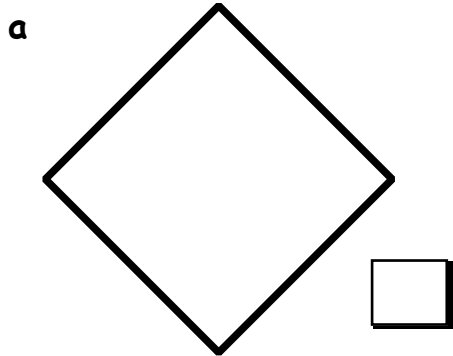
Show this to your teacher, then go to page 10 Exercise 1

1. Use a coloured pencil to draw in all the lines of symmetry.



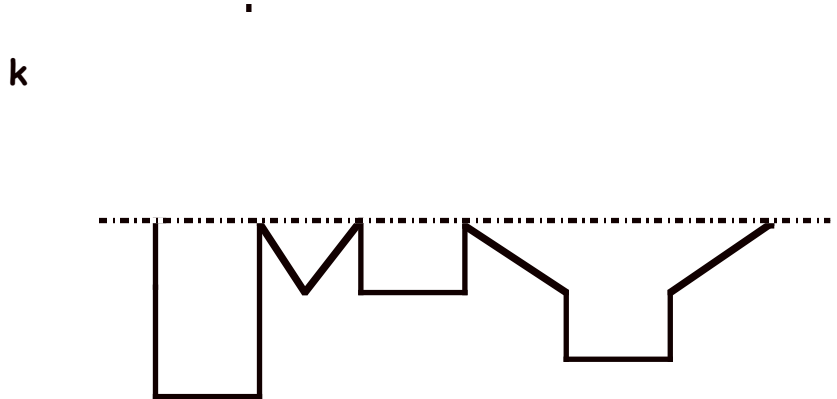



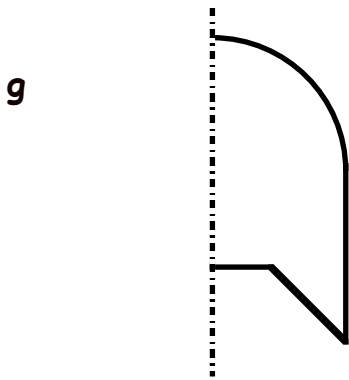
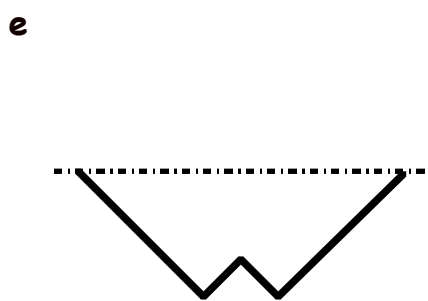
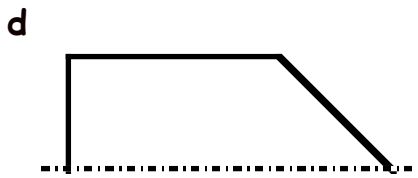
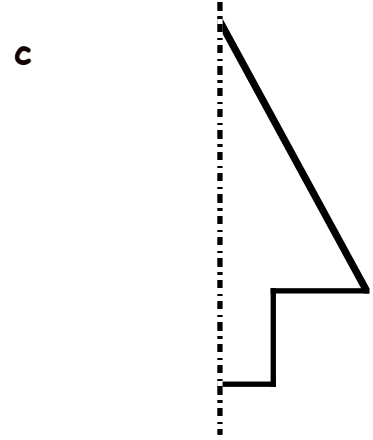

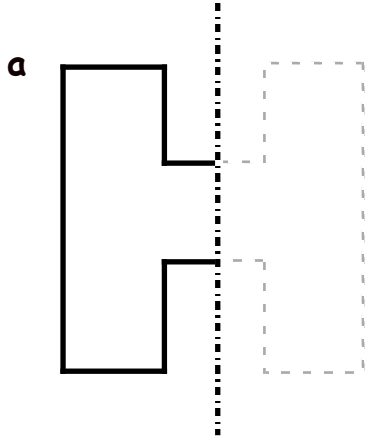
Show this to your teacher, then go to page 11 Question 2

1. Write down **how many** lines of symmetry each of these shapes has.
Draw the lines of symmetry using a coloured pencil.



Show this to your teacher, then go to page 13 Question 4

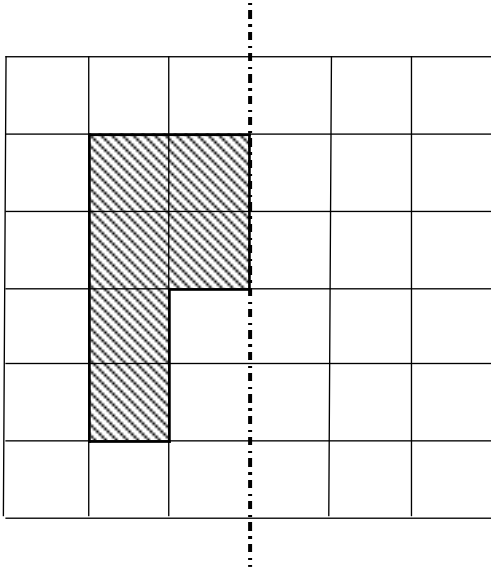
1. Draw the other half of each shape so that the shape has symmetry.



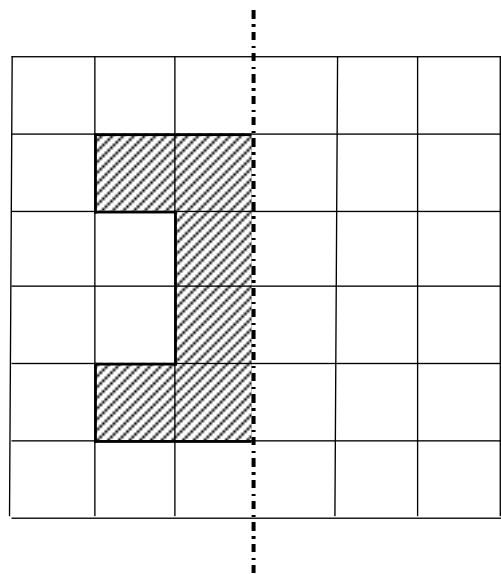
continued on the next page ->

2. Draw the other half of each shape so that the shape has symmetry.

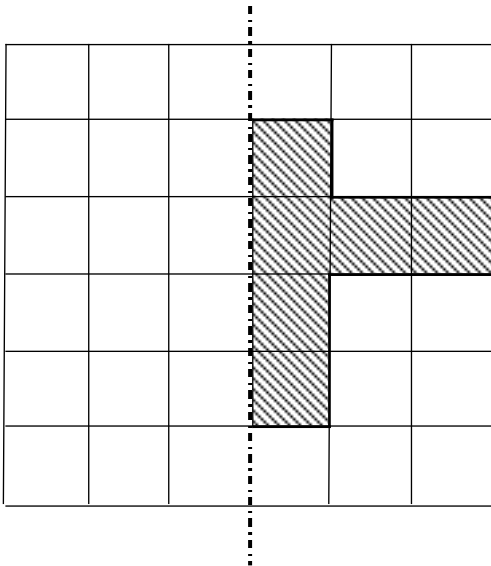
a



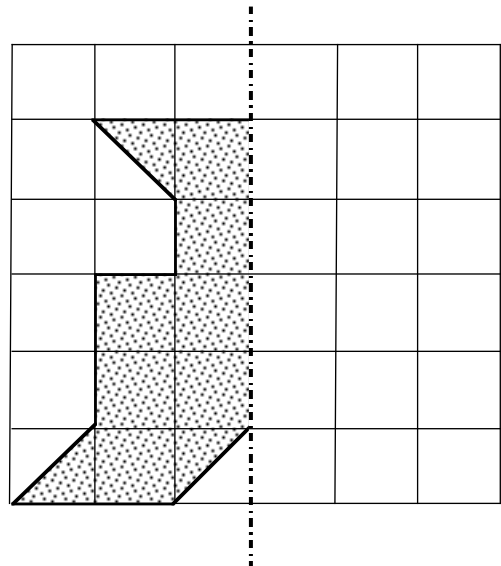
b



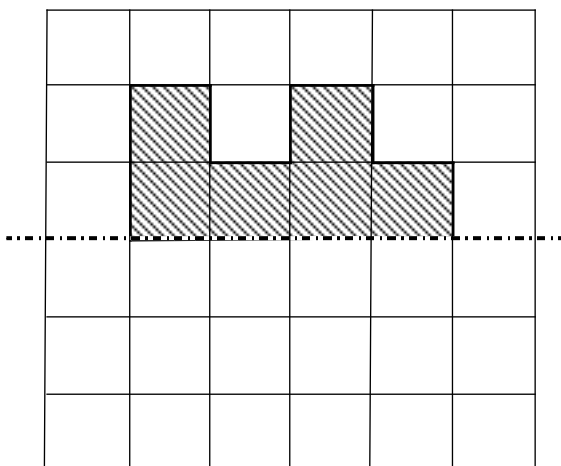
c



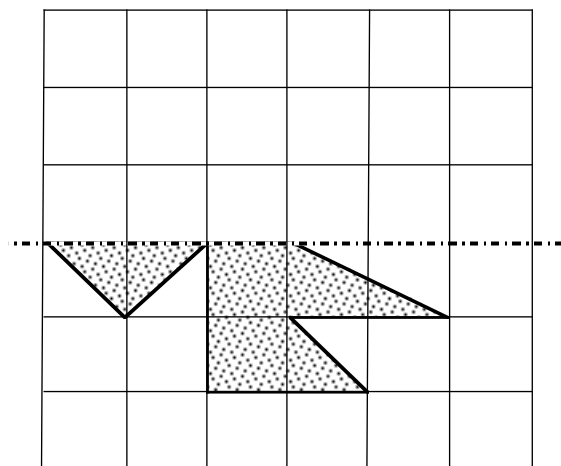
d



e

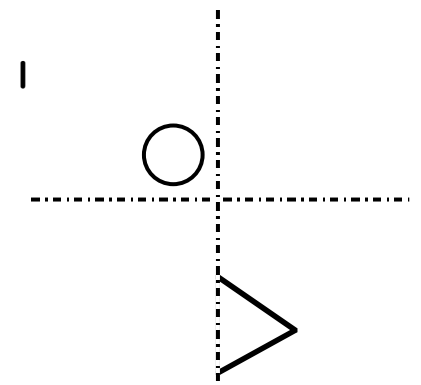
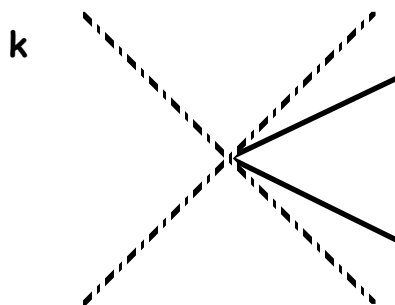
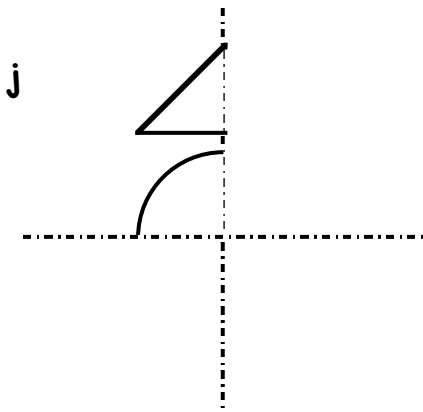
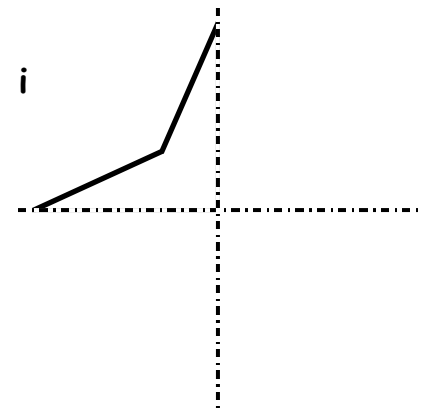
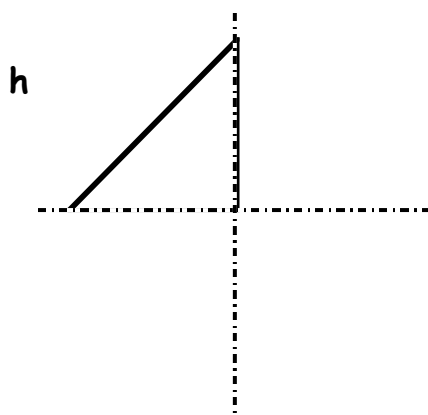
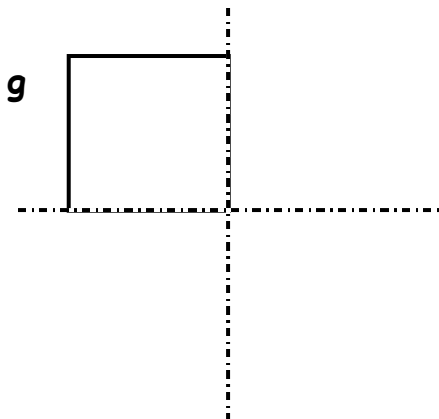
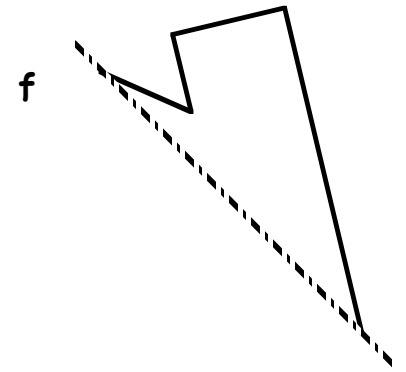
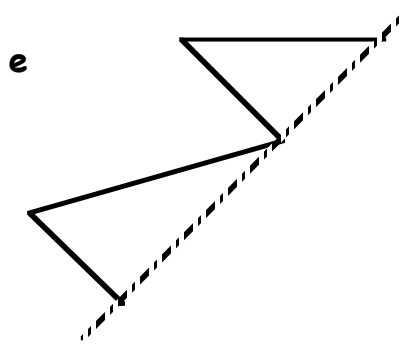
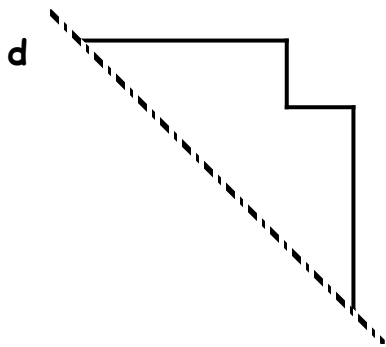
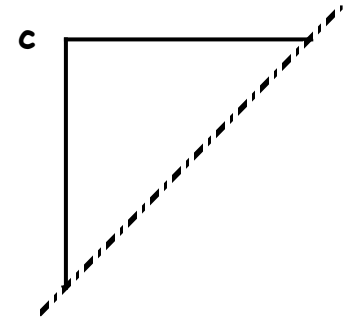
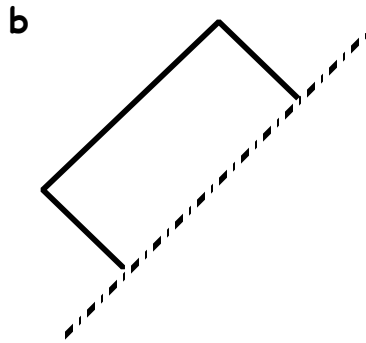
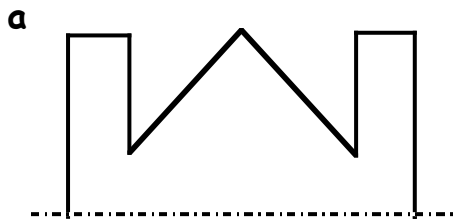


f



Show this to your teacher, then go to page 15 Exercise 2

1. Complete each shape so that the dotted line becomes a line of symmetry :-



Show this to your teacher, then go to page 17 Question 3

The 4 times table

Complete the 4 times table :-

$$4 \text{ sets of } 0 = 0$$

$$4 \text{ sets of } 1 = 4$$

$$4 \text{ sets of } 2 = 8$$

$$4 \text{ sets of } 3 = 12$$

$$4 \text{ sets of } 4 = \dots$$

$$4 \text{ sets of } \dots = \dots$$

$$4 \text{ sets of } \dots = \dots$$

$$4 \text{ sets of } \dots = \dots$$

$$4 \text{ sets of } \dots = \dots$$

$$4 \text{ sets of } \dots = \dots$$

$$4 \text{ sets of } \dots = \dots$$

$$4 \times 0 = 0$$

$$4 \times 1 = 4$$

$$4 \times 2 = 8$$

$$4 \times 3 = \dots$$

$$4 \times 4 = \dots$$

$$4 \times 5 = \dots$$

$$4 \times 6 = \dots$$

$$4 \times 7 = \dots$$

$$4 \times \dots = \dots$$

$$4 \times \dots = \dots$$

$$4 \dots \dots = \dots$$

LEARN

Memorise the 4 times table, go to Page 21 Questions 1 & 2 then go to the next sheet

Complete these multiplications :-

$$\begin{array}{r} 1 \quad 16 \\ \times 4 \\ \hline \end{array}$$

$$\begin{array}{r} 2 \quad 48 \\ \times 4 \\ \hline \end{array}$$

$$\begin{array}{r} 3 \quad 59 \\ \times 4 \\ \hline \end{array}$$

$$\begin{array}{r} 4 \quad 34 \\ \times 4 \\ \hline \end{array}$$

$$\begin{array}{r} 5 \quad 20 \\ \times 4 \\ \hline \end{array}$$

$$\begin{array}{r} 6 \quad 41 \\ \times 4 \\ \hline \end{array}$$

$$\begin{array}{r} 7 \quad 49 \\ \times 4 \\ \hline \end{array}$$

$$\begin{array}{r} 8 \quad 32 \\ \times 4 \\ \hline \end{array}$$

$$\begin{array}{r} 9 \quad 61 \\ \times 4 \\ \hline \end{array}$$

$$\begin{array}{r} 10 \quad 38 \\ \times 4 \\ \hline \end{array}$$

$$\begin{array}{r} 11 \quad 24 \\ \times 4 \\ \hline \end{array}$$

$$\begin{array}{r} 12 \quad 66 \\ \times 4 \\ \hline \end{array}$$

$$\begin{array}{r} 13 \quad 30 \\ \times 4 \\ \hline \end{array}$$

$$\begin{array}{r} 14 \quad 43 \\ \times 4 \\ \hline \end{array}$$

$$\begin{array}{r} 15 \quad 68 \\ \times 4 \\ \hline \end{array}$$

$$\begin{array}{r} 16 \quad 64 \\ \times 4 \\ \hline \end{array}$$

$$\begin{array}{r} 17 \quad 52 \\ \times 4 \\ \hline \end{array}$$

$$\begin{array}{r} 18 \quad 36 \\ \times 4 \\ \hline \end{array}$$

$$\begin{array}{r} 19 \quad 25 \\ \times 4 \\ \hline \end{array}$$

$$\begin{array}{r} 20 \quad 81 \\ \times 4 \\ \hline \end{array}$$

$$\begin{array}{r} 21 \quad 190 \\ \times 4 \\ \hline \end{array}$$

Show this to your teacher, then go to page 22 Question 3

The 5 times table

Complete the 5 times table :-

$5 \text{ sets of } 0 = 0$

$5 \text{ sets of } 1 = 5$

$5 \text{ sets of } 2 = 10$

$5 \text{ sets of } 3 = 15$

$5 \text{ sets of } 4 = 20$

$5 \text{ sets of } \dots = \dots$

$5 \text{ sets of } \dots = \dots$

$5 \text{ sets of } \dots = \dots$

$5 \text{ sets of } \dots = \dots$

$5 \text{ sets of } \dots = \dots$

$5 \text{ sets of } \dots = \dots$

$5 \times 0 = 0$

$5 \times 1 = 5$

$5 \times 2 = 10$

$5 \times 3 = 15$

$5 \times 4 = \dots$

$5 \times 5 = \dots$

$5 \times 6 = \dots$

$5 \times 7 = \dots$

$5 \times \dots = \dots$

$5 \times \dots = \dots$

$5 \dots \dots = \dots$

LEARN

Memorise the 5 times table, go to Page 21 Questions 1 & 2 then go to the next sheet

Complete these multiplications :-

$$\begin{array}{r} 1 \quad 14 \\ \times 5 \\ \hline \square \end{array}$$

$$\begin{array}{r} 2 \quad 46 \\ \times 5 \\ \hline \square \end{array}$$

$$\begin{array}{r} 3 \quad 57 \\ \times 5 \\ \hline \square \end{array}$$

$$\begin{array}{r} 4 \quad 32 \\ \times 5 \\ \hline \square \end{array}$$

$$\begin{array}{r} 5 \quad 18 \\ \times 5 \\ \hline \square \end{array}$$

$$\begin{array}{r} 6 \quad 39 \\ \times 5 \\ \hline \square \end{array}$$

$$\begin{array}{r} 7 \quad 47 \\ \times 5 \\ \hline \square \end{array}$$

$$\begin{array}{r} 8 \quad 30 \\ \times 5 \\ \hline \square \end{array}$$

$$\begin{array}{r} 9 \quad 59 \\ \times 5 \\ \hline \square \end{array}$$

$$\begin{array}{r} 10 \quad 36 \\ \times 5 \\ \hline \square \end{array}$$

$$\begin{array}{r} 11 \quad 22 \\ \times 5 \\ \hline \square \end{array}$$

$$\begin{array}{r} 12 \quad 64 \\ \times 5 \\ \hline \square \end{array}$$

$$\begin{array}{r} 13 \quad 28 \\ \times 5 \\ \hline \square \end{array}$$

$$\begin{array}{r} 14 \quad 41 \\ \times 5 \\ \hline \square \end{array}$$

$$\begin{array}{r} 15 \quad 66 \\ \times 5 \\ \hline \square \end{array}$$

$$\begin{array}{r} 16 \quad 62 \\ \times 5 \\ \hline \square \end{array}$$

$$\begin{array}{r} 17 \quad 50 \\ \times 5 \\ \hline \square \end{array}$$

$$\begin{array}{r} 18 \quad 34 \\ \times 5 \\ \hline \square \end{array}$$

$$\begin{array}{r} 19 \quad 23 \\ \times 5 \\ \hline \square \end{array}$$

$$\begin{array}{r} 20 \quad 79 \\ \times 5 \\ \hline \square \end{array}$$

$$\begin{array}{r} 21 \quad 188 \\ \times 5 \\ \hline \square \end{array}$$

Show this to your teacher, then go to page 24 Question 3

The 10 times table

Complete the 10 times table :-

$$10 \text{ sets of } 0 = 0$$

$$10 \text{ sets of } 1 = 10$$

$$10 \text{ sets of } 2 = 20$$

$$10 \text{ sets of } 3 = 30$$

$$10 \text{ sets of } 4 = 40$$

$$10 \text{ sets of } .. = ...$$

$$10 \text{ sets of } .. = ...$$

$$10 \text{ sets of } .. = ...$$

$$10 \text{ sets of } .. = ...$$

$$10 \text{ sets of } .. = ...$$

$$10 \text{ sets of } .. = ...$$

$$10 \times 0 = 0$$

$$10 \times 1 = 10$$

$$10 \times 2 = 20$$

$$10 \times 3 = ...$$

$$10 \times 4 = ...$$

$$10 \times 5 = ...$$

$$10 \times 6 = ...$$

$$10 \times 7 = ...$$

$$10 \times .. = ...$$

$$10 \times .. = ...$$

$$10 = ...$$

LEARN

Memorise the 10 times table, go to Page 21 Questions 1 & 2 then go to the next sheet

Complete these multiplications :-

$$\begin{array}{r} 1 \quad 17 \\ \times 10 \\ \hline \end{array}$$

$$\begin{array}{r} 2 \quad 24 \\ \times 10 \\ \hline \end{array}$$

$$\begin{array}{r} 3 \quad 32 \\ \times 10 \\ \hline \end{array}$$

$$\begin{array}{r} 4 \quad 38 \\ \times 10 \\ \hline \end{array}$$

$$\begin{array}{r} 5 \quad 45 \\ \times 10 \\ \hline \end{array}$$

$$\begin{array}{r} 6 \quad 49 \\ \times 10 \\ \hline \end{array}$$

$$\begin{array}{r} 7 \quad 60 \\ \times 10 \\ \hline \end{array}$$

$$\begin{array}{r} 8 \quad 63 \\ \times 10 \\ \hline \end{array}$$

$$\begin{array}{r} 9 \quad 67 \\ \times 10 \\ \hline \end{array}$$

$$\begin{array}{r} 10 \quad 74 \\ \times 10 \\ \hline \end{array}$$

$$\begin{array}{r} 11 \quad 79 \\ \times 10 \\ \hline \end{array}$$

$$\begin{array}{r} 12 \quad 81 \\ \times 10 \\ \hline \end{array}$$

$$\begin{array}{r} 13 \quad 90 \\ \times 10 \\ \hline \end{array}$$

$$\begin{array}{r} 14 \quad 14 \\ \times 10 \\ \hline \end{array}$$

$$\begin{array}{r} 15 \quad 76 \\ \times 10 \\ \hline \end{array}$$

$$\begin{array}{r} 16 \quad 108 \\ \times 10 \\ \hline \end{array}$$

$$\begin{array}{r} 17 \quad 194 \\ \times 10 \\ \hline \end{array}$$

$$\begin{array}{r} 18 \quad 175 \\ \times 10 \\ \hline \end{array}$$

$$\begin{array}{r} 19 \quad 236 \\ \times 10 \\ \hline \end{array}$$

$$\begin{array}{r} 20 \quad 440 \\ \times 10 \\ \hline \end{array}$$

$$\begin{array}{r} 21 \quad 538 \\ \times 10 \\ \hline \end{array}$$

Show this to your teacher.

1. Write each time in words. The first one has been done for you.

a **5:30**

half past 5.

b **8:30**


c **3:00**

d **6:45**

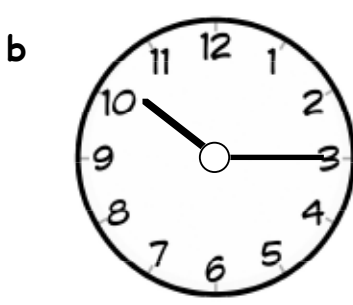
e **4:15**

f **7:45**


2. Fill in the digital time shown on the clock faces.



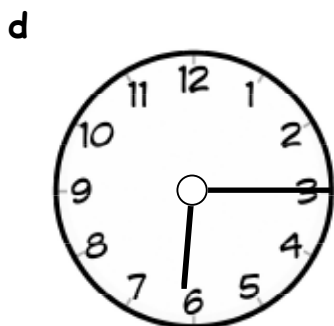
:



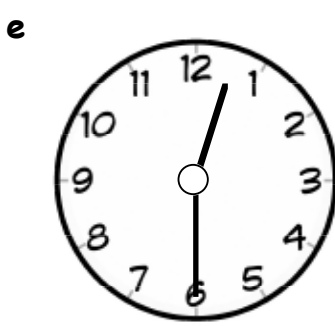
:



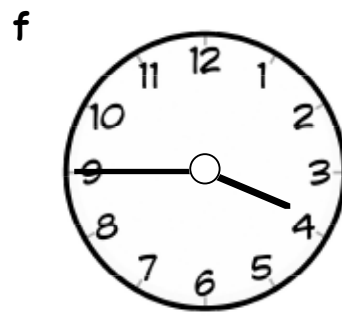
:



:



:

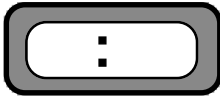


:

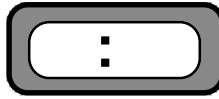
Show this to your teacher, then go to page 34 Exercise 1

1. Write each time on the digital clocks :-

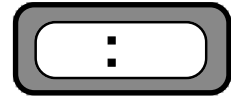
a quarter to 3



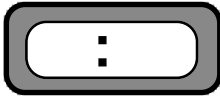
b quarter past 2



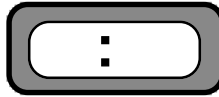
c half past 8



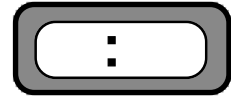
d quarter past 7



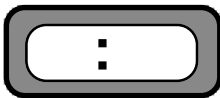
e twenty past 11



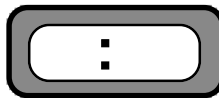
f ten to 5



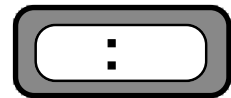
g ten past 12












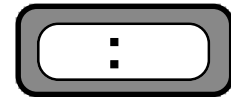

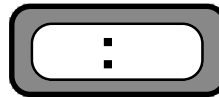

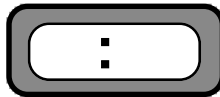

h twenty five to 7



i five past 6



2. Fill in the digital time shown on the clock faces :-



Show this to your teacher, then go to page 35 question 3

1. Complete each division :-

a $\frac{\square}{4 \overline{)41}}$

b $\frac{\square}{4 \overline{)45}}$

c $\frac{\square}{4 \overline{)48}}$

d $\frac{\square}{4 \overline{)47}}$

e $\frac{\square}{4 \overline{)44}}$

f $\frac{\square}{4 \overline{)80}}$

g $\frac{\square}{4 \overline{)40}}$

h $\frac{\square}{4 \overline{)83}}$

i $\frac{\square}{4 \overline{)89}}$

j $\frac{\square}{4 \overline{)88}}$

k $\frac{\square}{4 \overline{)86}}$

l $\frac{\square}{4 \overline{)840}}$

2. Show all your working.

a 43 fish were **divided equally** among 4 tanks.

How many fish were in each tank and how many were left over ?

 each
left over



b Each crate can hold 4 large dolls.

How many full crates can be packed if there are 81 dolls and how many dolls are left over ?

 crates
left over



cont'd over page

3. Complete each calculation :-

a $\frac{\square}{4 \overline{)73}}$

b $\frac{\square}{4 \overline{)57}}$

c $\frac{\square}{4 \overline{)69}}$

d $\frac{\square}{4 \overline{)82}}$

e $\frac{\square}{4 \overline{)53}}$

f $\frac{\square}{4 \overline{)38}}$

g $\frac{\square}{4 \overline{)43}}$

h $\frac{\square}{4 \overline{)77}}$

i $\frac{\square}{4 \overline{)93}}$

j $\frac{\square}{4 \overline{)75}}$

k $\frac{\square}{4 \overline{)87}}$

l $\frac{\square}{4 \overline{)491}}$

4. Show all your working.

- a 59 boxes of coconuts were **divided equally** among 4 shops.
How many boxes did each shop get and how many were left over ?

..... boxes
.....left over



- b Each new car needs 4 tyres.
How many cars can be fitted with 37 tyres and how many tyres will be left over?

..... cars
.....left over



- c How many toy cars are left over if I **share equally** 77 cars between Ben and his three friends.

.....left over



Show this to your teacher, then go to page 50 Exercise 2

1. Complete each calculation :-

a $\frac{\square}{5 \overline{)20}}$

b $\frac{\square}{5 \overline{)35}}$

c $\frac{\square}{5 \overline{)40}}$

d $\frac{\square}{5 \overline{)15}}$

e $\frac{\square}{5 \overline{)14}}$

f $\frac{\square}{5 \overline{)9}}$

g $\frac{\square}{5 \overline{)18}}$

h $\frac{\square}{5 \overline{)22}}$

i $\frac{\square}{5 \overline{)16}}$

j $\frac{\square}{5 \overline{)8}}$

k $\frac{\square}{5 \overline{)27}}$

l $\frac{\square}{5 \overline{)31}}$

m $\frac{\square}{5 \overline{)26}}$

n $\frac{\square}{5 \overline{)11}}$

o $\frac{\square}{5 \overline{)41}}$

p $\frac{\square}{5 \overline{)192}}$

2. Show all your working.

a 45 shirts were **stored equally** on 5 shelves.
How many shirts were on each shelf ?

b A bowl containing 59 cherries
was **split equally** into 5 small bags.
How many were in each small bag
and how many were left over ?



..... cherries

.....left over

cont'd over page

3. Complete each calculation :-

a $\boxed{}$
 $5 \overline{)27}$

b $\boxed{}$
 $5 \overline{)51}$

c $\boxed{}$
 $5 \overline{)71}$

d $\boxed{}$
 $5 \overline{)59}$

e $\boxed{}$
 $5 \overline{)34}$

f $\boxed{}$
 $5 \overline{)66}$

g $\boxed{}$
 $5 \overline{)82}$

h $\boxed{}$
 $5 \overline{)79}$

i $\boxed{}$
 $5 \overline{)48}$

j $\boxed{}$
 $5 \overline{)77}$

k $\boxed{}$
 $5 \overline{)39}$

l $\boxed{}$
 $5 \overline{)19}$

m $\boxed{}$
 $5 \overline{)61}$

n $\boxed{}$
 $5 \overline{)42}$

o $\boxed{}$
 $5 \overline{)88}$

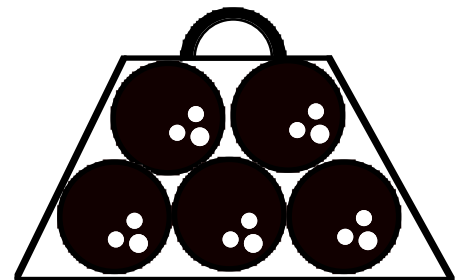
p $\boxed{}$
 $5 \overline{)531}$

4. Show all your working.

a A bag can hold 5 bowling balls.
 78 bowling balls were packed **equally**.

How many balls were left over ?

$\boxed{}$ $\boxed{} \dots \dots \dots \text{left over}$



b Carol, Danni, Jen and their two friends **share** 65 Scrunchies **equally**.

How many Scrunchies will each girl get ?

$\boxed{}$ $\boxed{} \dots \dots \dots \text{each}$


Show this to your teacher, then go to page 55 Exercise 4

1. Mark with a small box any right angles below :-

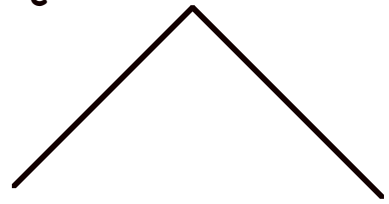
a




b



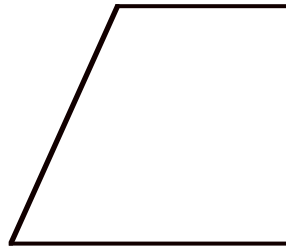
c



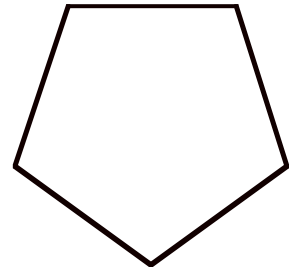
d



e




f




2. Mark all right angles in each diagram.

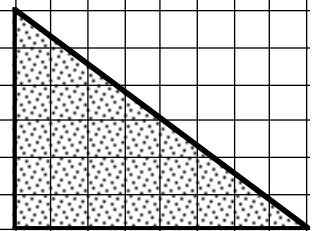
a



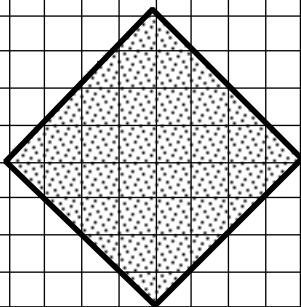
b



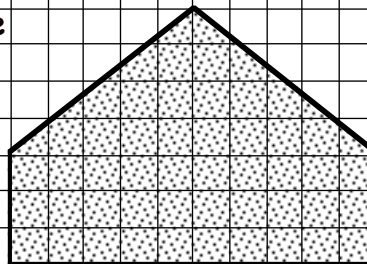
c



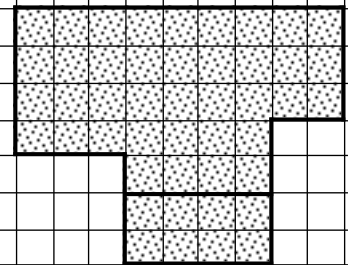
d




e



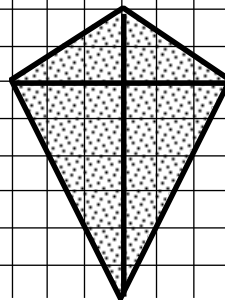
f



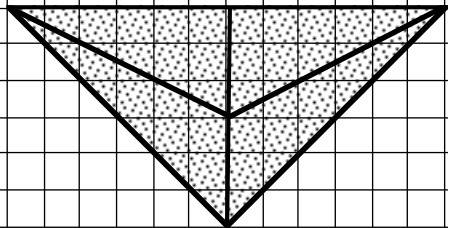
g



h



i



cont'd over page

3. Use your **template** to find the 7 Right Angles. Tick **YES** or **NO** in the box.

a

yes	
no	

b

yes	
no	

c

yes	
no	

d

yes	
no	

e

yes	
no	

f

yes	
no	

g

yes	
no	

h

yes	
no	

i

yes	
no	

j

yes	
no	

k

yes	
no	

l

yes	
no	

Show this to your teacher, then go to page 68 Question 2

1. a The **third month** of the year is
- b is the month **before** October.
- c Four months **after** October is
- d There are months in a year.
- e There are days in November.
- f There are days in May.
- g There are days in January.

2. Write the months of the year **backwards** :-

December - November - October

S		

3. **Complete** the calendar shown for June.

a List the **dates** of all the Fridays :-

4th, , ,

b The third Monday in June is the st.

c Which day of the week is the 1st of July ?

Answer -

June 2003						
Su	Mo	Tu	We	Th	Fr	Sa
		1	2
...	9	10
...
...

cont'd over page

4. a Complete the dates of the two months below :-

March 2012						
Su	Mo	Tu	We	Th	Fr	Sa
...
4
...
...
...	31

April 2012						
Su	Mo	Tu	We	Th	Fr	Sa
...
...	13	14
15	16
...
...

b Which day of the week is the 12th April 2012 ?

c Which day of the week is the 29th March 2012 ?

d Which day of the week is 1st May 2012 ?

e Which day of the week is 29th February 2012 ?

Write down the date of :-

f the first Thursday in April 2012 -

g the last Friday in March 2012 -

h the 3rd Tuesday in March 2012 -

5. Harder. Complete the October calendar.

Which day of the week is :-

a 30th September

b 1st November

c 8th November

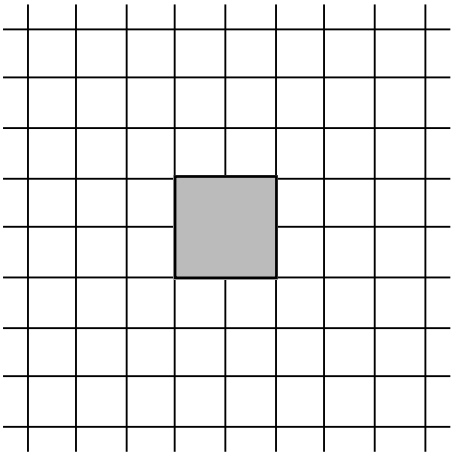
d 28th September

October 2012						
Su	Mo	Tu	We	Th	Fr	Sa
...
...
...
...	...	30

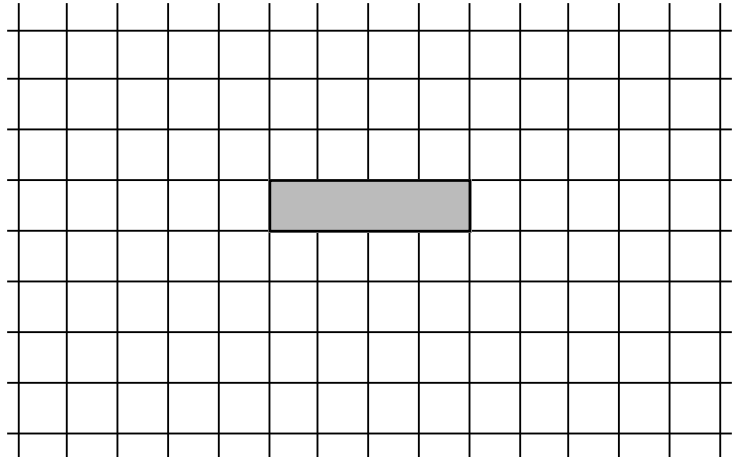
Show this to your teacher, then go to page 85 Exercise 1

1. These grids are to go with questions 5 to 10 on pages 95 and 96 of the textbook.

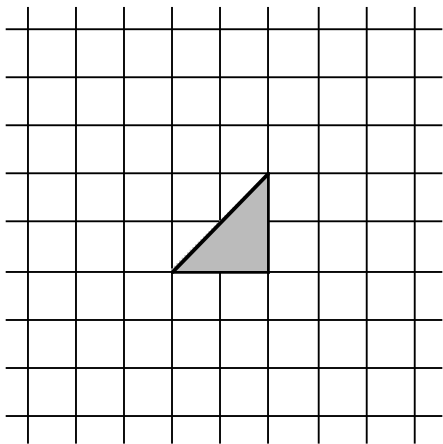
Qu 5



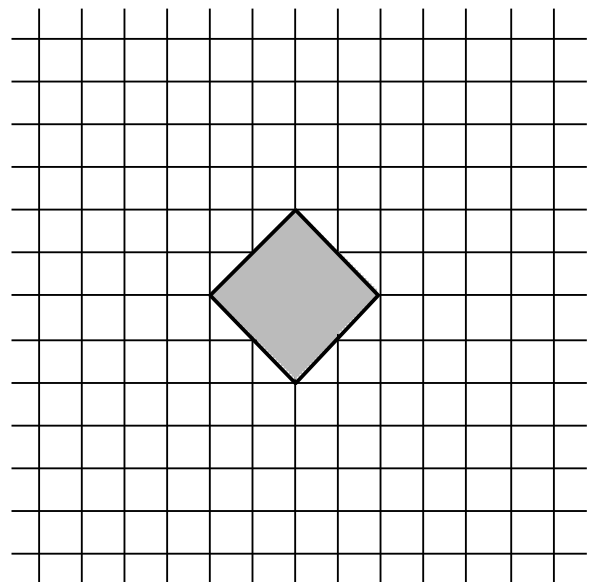
Qu 6



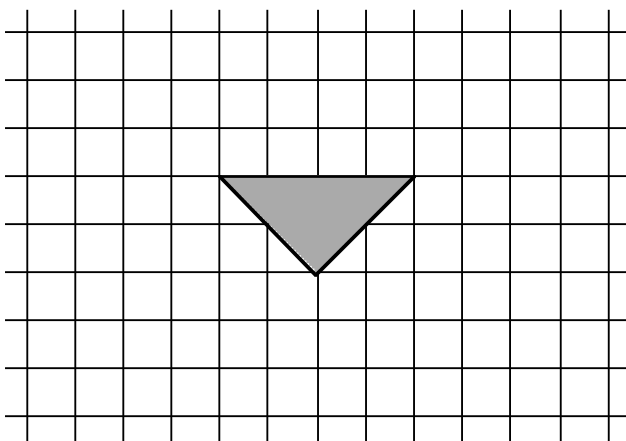
Qu 7



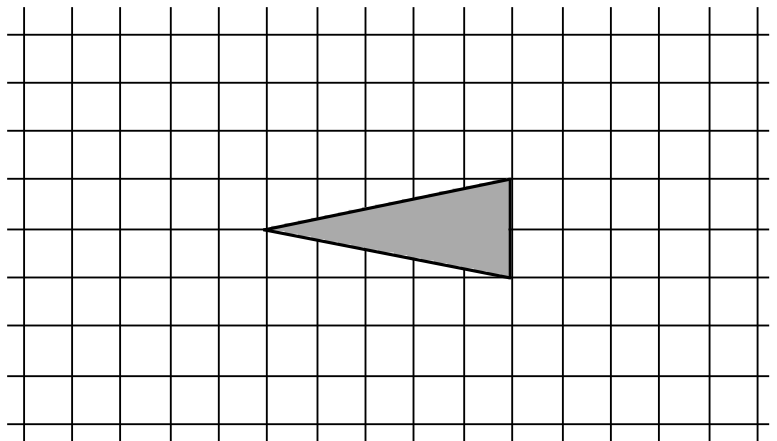
Qu 8



Qu 9



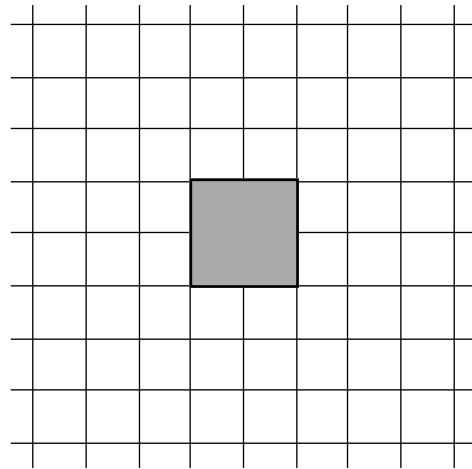
Qu 10



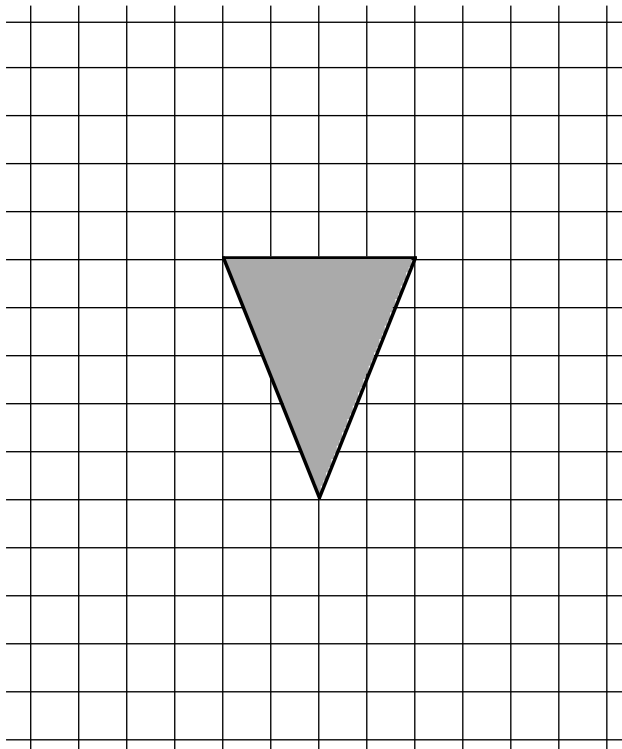
Show this to your teacher.

These grids are to go with questions 3, 4a and 4b on page 99 of the textbook.

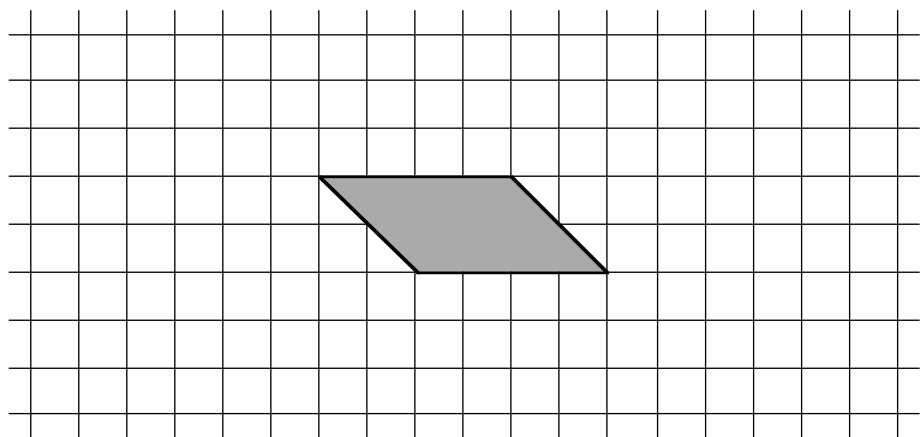
Qu 3



Qu 4a

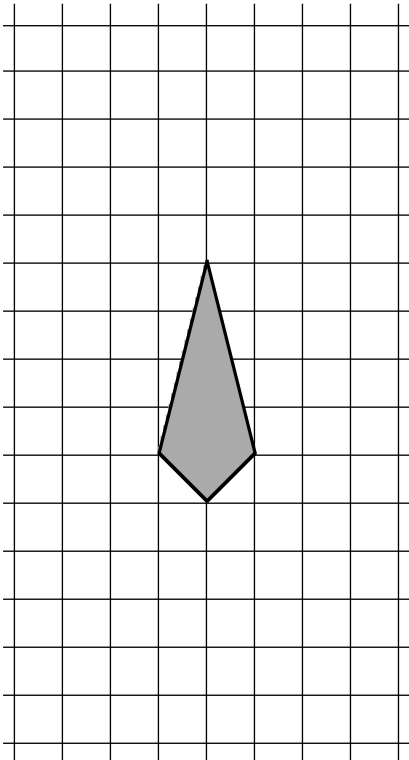


Qu 4b




These grids are to go with questions 4c, 4d, 5, and 6 on page 100 of the textbook.

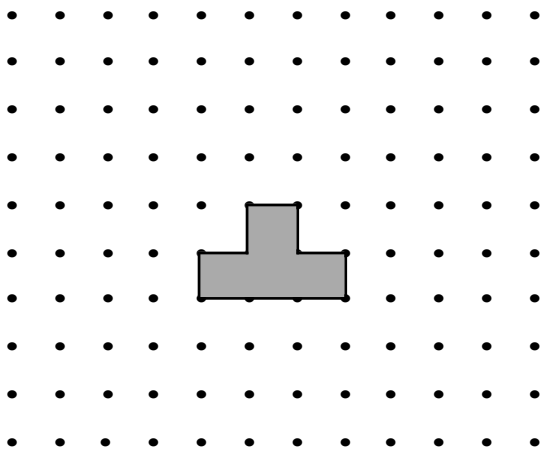
Qu 4c



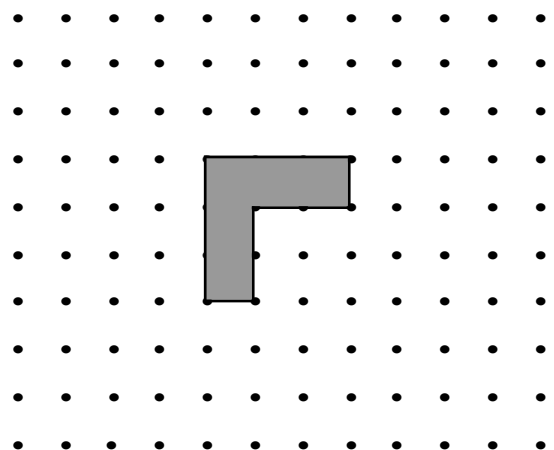
Qu 4d



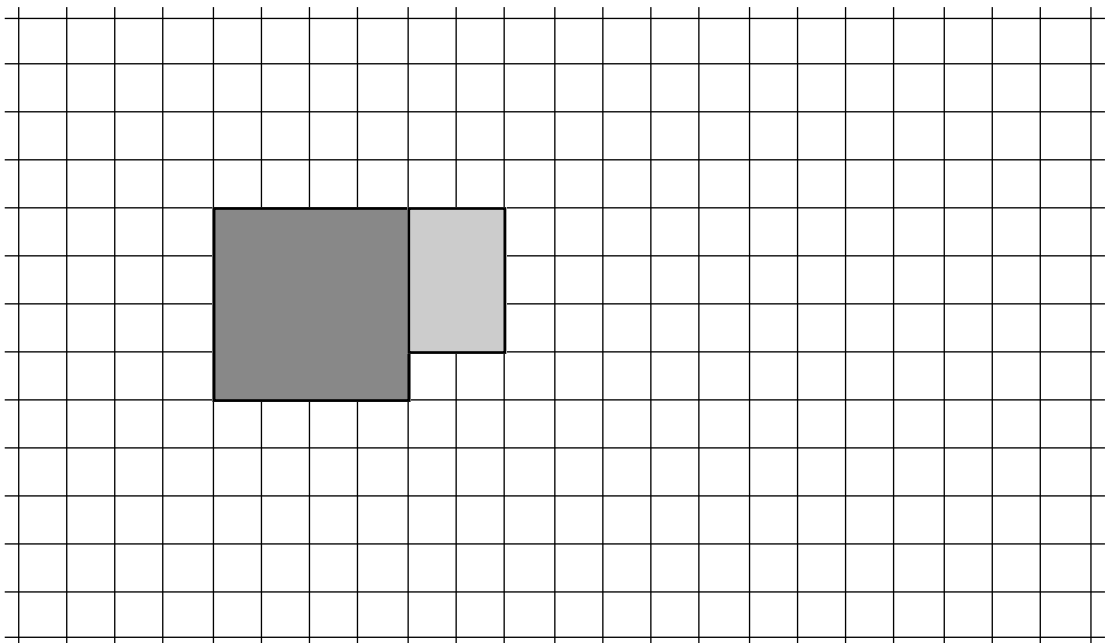
Qu 5a



Qu 5b



Qu 6



The 6 times table

Complete the 6 times table :-

$$6 \text{ sets of } 0 = 0$$

$$6 \text{ sets of } 1 = 6$$

$$6 \text{ sets of } 2 = 12$$

$$6 \text{ sets of } 3 = 18$$

$$6 \text{ sets of } 4 = 24$$

$$6 \text{ sets of } \dots = \dots$$

$$6 \text{ sets of } \dots = \dots$$

$$6 \text{ sets of } \dots = \dots$$

$$6 \text{ sets of } \dots = \dots$$

$$6 \text{ sets of } \dots = \dots$$

$$6 \text{ sets of } \dots = \dots$$

$$6 \times 0 = 0$$

$$6 \times 1 = 6$$

$$6 \times 2 = 12$$

$$6 \times 3 = 18$$

$$6 \times 4 = \dots$$

$$6 \times 5 = \dots$$

$$6 \times 6 = \dots$$

$$6 \times 7 = \dots$$

$$6 \times \dots = \dots$$

$$6 \times \dots = \dots$$

$$6 \dots \dots = \dots$$

LEARN

Memorise the 6 times table, go to Page 103 Exercise 1, then go to the next sheet

Complete these multiplications :-

$$\begin{array}{r} 1 \quad 17 \\ \times 6 \\ \hline \end{array}$$

$$\begin{array}{r} 2 \quad 47 \\ \times 6 \\ \hline \end{array}$$

$$\begin{array}{r} 3 \quad 58 \\ \times 6 \\ \hline \end{array}$$

$$\begin{array}{r} 4 \quad 36 \\ \times 6 \\ \hline \end{array}$$

$$\begin{array}{r} 5 \quad 40 \\ \times 6 \\ \hline \end{array}$$

$$\begin{array}{r} 6 \quad 51 \\ \times 6 \\ \hline \end{array}$$

$$\begin{array}{r} 7 \quad 39 \\ \times 6 \\ \hline \end{array}$$

$$\begin{array}{r} 8 \quad 33 \\ \times 6 \\ \hline \end{array}$$

$$\begin{array}{r} 9 \quad 71 \\ \times 6 \\ \hline \end{array}$$

$$\begin{array}{r} 10 \quad 45 \\ \times 6 \\ \hline \end{array}$$

$$\begin{array}{r} 11 \quad 26 \\ \times 6 \\ \hline \end{array}$$

$$\begin{array}{r} 12 \quad 67 \\ \times 6 \\ \hline \end{array}$$

$$\begin{array}{r} 13 \quad 50 \\ \times 6 \\ \hline \end{array}$$

$$\begin{array}{r} 14 \quad 44 \\ \times 6 \\ \hline \end{array}$$

$$\begin{array}{r} 15 \quad 58 \\ \times 6 \\ \hline \end{array}$$

$$\begin{array}{r} 16 \quad 65 \\ \times 6 \\ \hline \end{array}$$

$$\begin{array}{r} 17 \quad 53 \\ \times 6 \\ \hline \end{array}$$

$$\begin{array}{r} 18 \quad 37 \\ \times 6 \\ \hline \end{array}$$

$$\begin{array}{r} 19 \quad 28 \\ \times 6 \\ \hline \end{array}$$

$$\begin{array}{r} 20 \quad 91 \\ \times 6 \\ \hline \end{array}$$

$$\begin{array}{r} 21 \quad 180 \\ \times 6 \\ \hline \end{array}$$

Show this to your teacher, then go to page 105 Exercise 2

The 7 times table

Complete the 7 times table :-

$$7 \text{ sets of } 0 = 0$$

$$7 \text{ sets of } 1 = 7$$

$$7 \text{ sets of } 2 = 14$$

$$7 \text{ sets of } 3 = 21$$

$$7 \text{ sets of } 4 = \dots$$

$$7 \text{ sets of } \dots = \dots$$

$$7 \text{ sets of } \dots = \dots$$

$$7 \text{ sets of } \dots = \dots$$

$$7 \text{ sets of } \dots = \dots$$

$$7 \text{ sets of } \dots = \dots$$

$$7 \text{ sets of } \dots = \dots$$

$$7 \times 0 = 0$$

$$7 \times 1 = 7$$

$$7 \times 2 = 14$$

$$7 \times 3 = \dots$$

$$7 \times 4 = \dots$$

$$7 \times 5 = \dots$$

$$7 \times 6 = \dots$$

$$7 \times 7 = \dots$$

$$7 \times \dots = \dots$$

$$7 \times \dots = \dots$$

$$7 \dots \dots = \dots$$

LEARN

Memorise the 7 times table, go to Page 107 Exercise 3, then go to the next sheet

Complete these multiplications :-

$$\begin{array}{r} 1 \quad 19 \\ \times 7 \\ \hline \end{array}$$

$$\begin{array}{r} 2 \quad 38 \\ \times 7 \\ \hline \end{array}$$

$$\begin{array}{r} 3 \quad 49 \\ \times 7 \\ \hline \end{array}$$

$$\begin{array}{r} 4 \quad 54 \\ \times 7 \\ \hline \end{array}$$

$$\begin{array}{r} 5 \quad 60 \\ \times 7 \\ \hline \end{array}$$

$$\begin{array}{r} 6 \quad 31 \\ \times 7 \\ \hline \end{array}$$

$$\begin{array}{r} 7 \quad 59 \\ \times 7 \\ \hline \end{array}$$

$$\begin{array}{r} 8 \quad 37 \\ \times 7 \\ \hline \end{array}$$

$$\begin{array}{r} 9 \quad 91 \\ \times 7 \\ \hline \end{array}$$

$$\begin{array}{r} 10 \quad 48 \\ \times 7 \\ \hline \end{array}$$

$$\begin{array}{r} 11 \quad 34 \\ \times 7 \\ \hline \end{array}$$

$$\begin{array}{r} 12 \quad 66 \\ \times 7 \\ \hline \end{array}$$

$$\begin{array}{r} 13 \quad 50 \\ \times 7 \\ \hline \end{array}$$

$$\begin{array}{r} 14 \quad 73 \\ \times 7 \\ \hline \end{array}$$

$$\begin{array}{r} 15 \quad 45 \\ \times 7 \\ \hline \end{array}$$

$$\begin{array}{r} 16 \quad 68 \\ \times 7 \\ \hline \end{array}$$

$$\begin{array}{r} 17 \quad 72 \\ \times 7 \\ \hline \end{array}$$

$$\begin{array}{r} 18 \quad 46 \\ \times 7 \\ \hline \end{array}$$

$$\begin{array}{r} 19 \quad 25 \\ \times 7 \\ \hline \end{array}$$

$$\begin{array}{r} 20 \quad 71 \\ \times 7 \\ \hline \end{array}$$

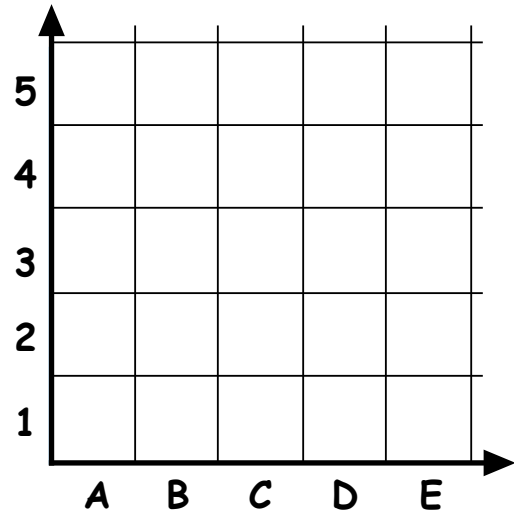
$$\begin{array}{r} 21 \quad 170 \\ \times 7 \\ \hline \end{array}$$

Show this to your teacher, then go to page 109 Exercise 4

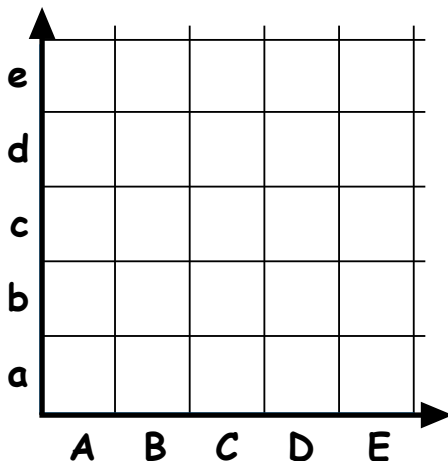
These questions are from textbook Chapter 11 page 117 questions 7, 8 and 9.

Use the grids below and coloured pencils to follow each set of instructions.

7. a Colour B2 red.
 b Colour these squares blue:-
 A2, D5, E1
 c Colour C1, C4 and E3 brown.
 d Colour A1 and B5 pink.



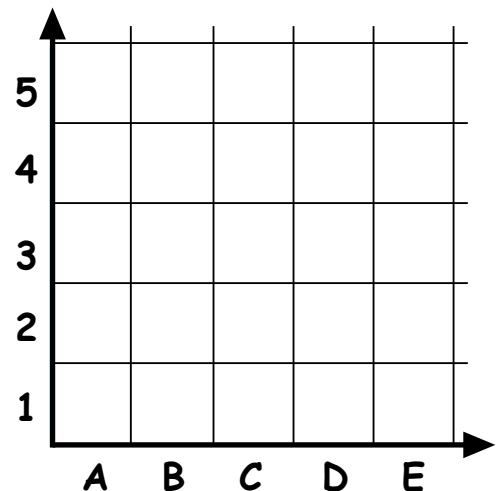
8. Use this grid and follow the instructions.



- a Colour these squares blue :-
 Bb, De, Ea, and Ae.
 b Colour these squares red :-
 Ce, Cc, Aa and Ec.

9. Use this grid and follow the instructions.

- a This time make a pattern of your own, using colours.
 b For each square you coloured in, write down its colour and its grid position.
 (Example : red - B2)



Show this to your teacher, then go to page 118 Question 10

The 8 times table

Complete the 8 times table :-

$$8 \text{ sets of } 0 = 0$$

$$8 \text{ sets of } 1 = 8$$

$$8 \text{ sets of } 2 = 16$$

$$8 \text{ sets of } 3 = 24$$

$$8 \text{ sets of } 4 = \dots$$

$$8 \text{ sets of } \dots = \dots$$

$$8 \text{ sets of } \dots = \dots$$

$$8 \text{ sets of } \dots = \dots$$

$$8 \text{ sets of } \dots = \dots$$

$$8 \text{ sets of } \dots = \dots$$

$$8 \text{ sets of } \dots = \dots$$

$$8 \times 0 = 0$$

$$8 \times 1 = 8$$

$$8 \times 2 = 16$$

$$8 \times 3 = \dots$$

$$8 \times 4 = \dots$$

$$8 \times 5 = \dots$$

$$8 \times 6 = \dots$$

$$8 \times 7 = \dots$$

$$8 \times \dots = \dots$$

$$8 \times \dots = \dots$$

$$8 \dots \dots = \dots$$

LEARN

Memorise the 8 times table, go to Page 125 Exercise 1, then go to the next sheet

Complete these multiplications :-

$$\begin{array}{r} 1 \quad 17 \\ \times 8 \\ \hline \square \end{array}$$

$$\begin{array}{r} 2 \quad 46 \\ \times 8 \\ \hline \square \end{array}$$

$$\begin{array}{r} 3 \quad 54 \\ \times 8 \\ \hline \square \end{array}$$

$$\begin{array}{r} 4 \quad 37 \\ \times 8 \\ \hline \square \end{array}$$

$$\begin{array}{r} 5 \quad 40 \\ \times 8 \\ \hline \square \end{array}$$

$$\begin{array}{r} 6 \quad 51 \\ \times 8 \\ \hline \square \end{array}$$

$$\begin{array}{r} 7 \quad 47 \\ \times 8 \\ \hline \square \end{array}$$

$$\begin{array}{r} 8 \quad 52 \\ \times 8 \\ \hline \square \end{array}$$

$$\begin{array}{r} 9 \quad 53 \\ \times 8 \\ \hline \square \end{array}$$

$$\begin{array}{r} 10 \quad 36 \\ \times 8 \\ \hline \square \end{array}$$

$$\begin{array}{r} 11 \quad 34 \\ \times 8 \\ \hline \square \end{array}$$

$$\begin{array}{r} 12 \quad 39 \\ \times 8 \\ \hline \square \end{array}$$

$$\begin{array}{r} 13 \quad 50 \\ \times 8 \\ \hline \square \end{array}$$

$$\begin{array}{r} 14 \quad 55 \\ \times 8 \\ \hline \square \end{array}$$

$$\begin{array}{r} 15 \quad 79 \\ \times 8 \\ \hline \square \end{array}$$

$$\begin{array}{r} 16 \quad 75 \\ \times 8 \\ \hline \square \end{array}$$

$$\begin{array}{r} 17 \quad 63 \\ \times 8 \\ \hline \square \end{array}$$

$$\begin{array}{r} 18 \quad 77 \\ \times 8 \\ \hline \square \end{array}$$

$$\begin{array}{r} 19 \quad 36 \\ \times 8 \\ \hline \square \end{array}$$

$$\begin{array}{r} 20 \quad 92 \\ \times 8 \\ \hline \square \end{array}$$

$$\begin{array}{r} 21 \quad 290 \\ \times 8 \\ \hline \square \end{array}$$

Show this to your teacher, then go to page 127 Exercise 2

The 9 times table

Complete the 9 times table :-

$$9 \text{ sets of } 0 = 0$$

$$9 \text{ sets of } 1 = 9$$

$$9 \text{ sets of } 2 = 18$$

$$9 \text{ sets of } 3 = 27$$

$$9 \text{ sets of } 4 = \dots$$

$$9 \text{ sets of } \dots = \dots$$

$$9 \text{ sets of } \dots = \dots$$

$$9 \text{ sets of } \dots = \dots$$

$$9 \text{ sets of } \dots = \dots$$

$$9 \text{ sets of } \dots = \dots$$

$$9 \text{ sets of } \dots = \dots$$

$$9 \times 0 = 0$$

$$9 \times 1 = 9$$

$$9 \times 2 = 18$$

$$9 \times 3 = \dots$$

$$9 \times 4 = \dots$$

$$9 \times 5 = \dots$$

$$9 \times 6 = \dots$$

$$9 \times 7 = \dots$$

$$9 \times \dots = \dots$$

$$9 \times \dots = \dots$$

$$9 \dots \dots = \dots$$

LEARN

Memorise the 9 times table, go to Page 129 Exercise 3, then go to the next sheet

Complete these multiplications :-

1 14
 x 9

2 23
 x 9

3 31
 x 9

4 42
 x 9

5 20
 x 9

6 41
 x 9

7 53
 x 9

8 44
 x 9

9 61
 x 9

10 38
 x 9

11 29
 x 9

12 66
 x 9

13 40
 x 9

14 63
 x 9

15 72
 x 9

16 83
 x 9

17 62
 x 9

18 33
 x 9

19 39
 x 9

20 81
 x 9

21 390
 x 9

Show this to your teacher, then go to page 131 Exercise 4

name score :-

1. a Mark on this grid with coloured pencils any number patterns that you can find.

X	1	2	3	4	5	6	7	8	9
1	1	2	3	4	5	6	7	8	9
2	2	4	6	8	10	12	14	16	18
3	3	6	9	12	15	18	21	24	27
4	4	8	12	16	20	24	28	32	36
5	5	10	15	20	25	30	35	40	45
6	6	12	18	24	30	36	42	48	54
7	7	14	21	28	35	42	49	56	63
8	8	16	24	32	40	48	56	64	72
9	9	18	27	36	45	54	63	72	81

b Describe below any number patterns you found :-

Show this to your teacher, then go to page 143 Question 3

1. Use your own ruler to measure these lines and write your answers in the box to the nearest centimetre.



a cm

b cm

c cm

d cm

f cm

e cm

g cm

h cm

i cm

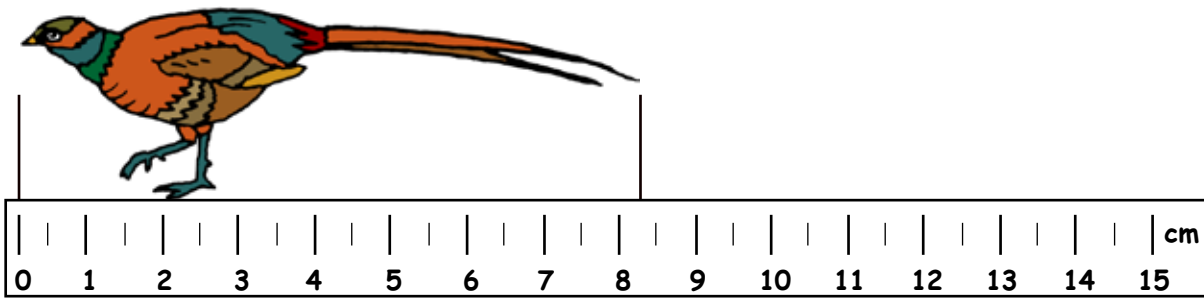
k cm

j cm

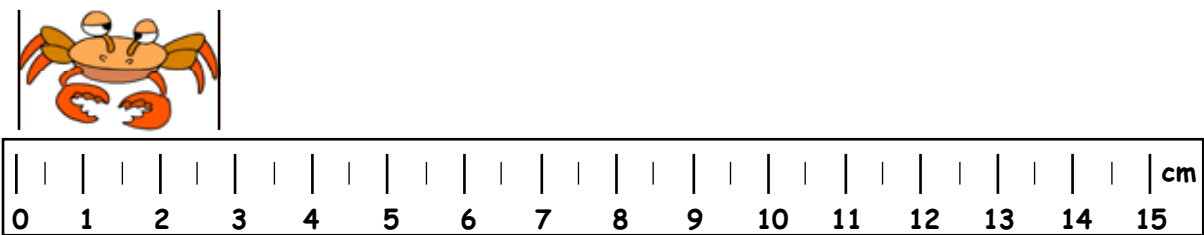
l cm

Show this to your teacher, then go to page 175 Exercise 1

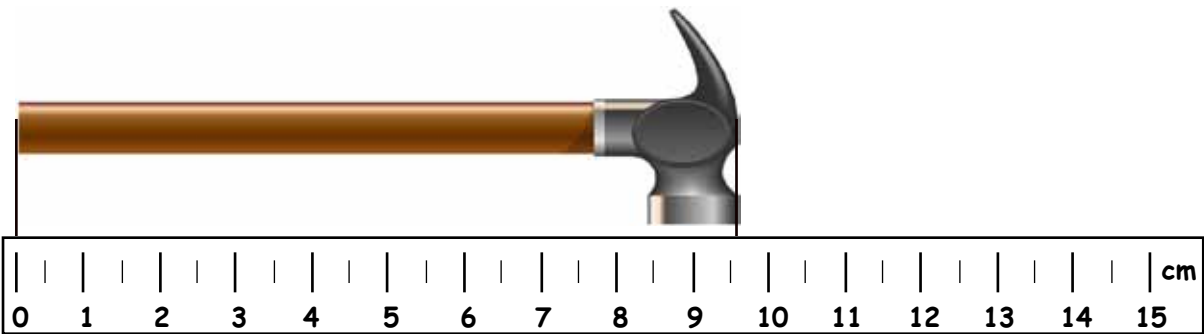
1. Write down the lengths of these objects to the nearest centimetre.



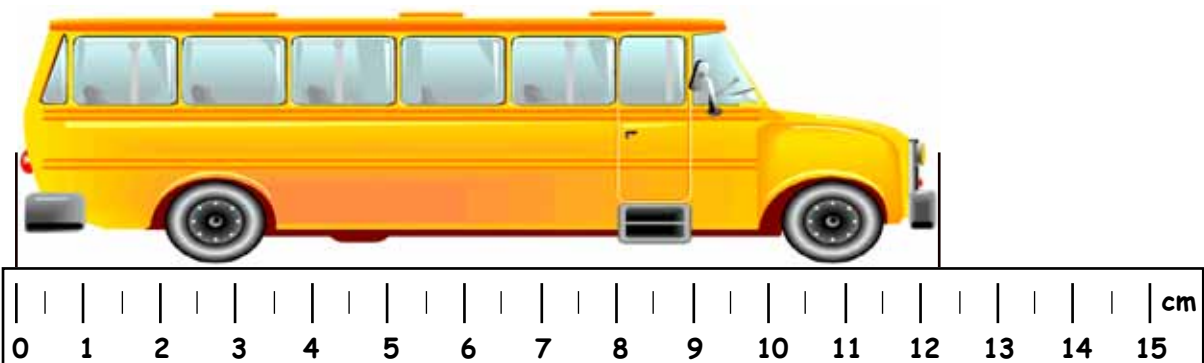
a
cm



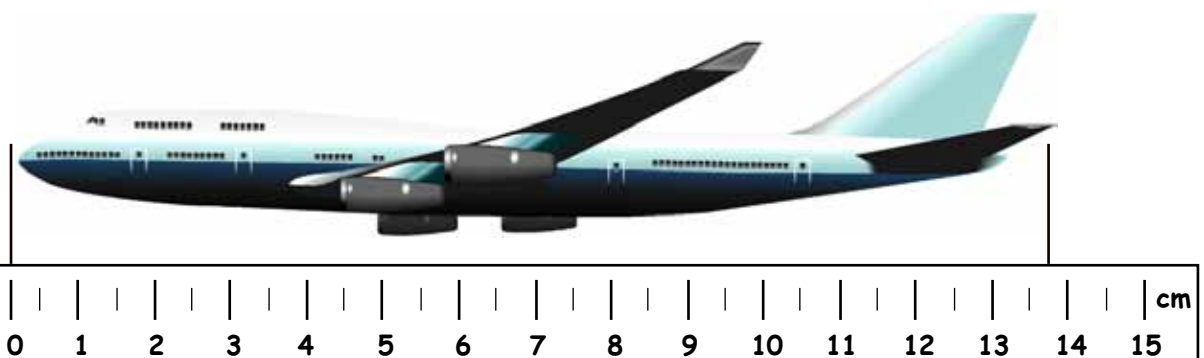
b
cm



c
cm



d
cm



e
cm

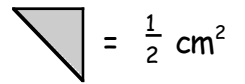
cont'd over page

2. Measure the size of each picture and write in your answer to the nearest centimetre.

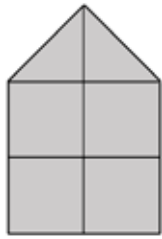
b cm
 c cm
 a cm
 d cm
 e cm
 f cm
 g cm
 h cm
 i cm

Show this to your teacher, then go to page 176 Question 4

1. Write down the area (...cm²) of each shape below :-

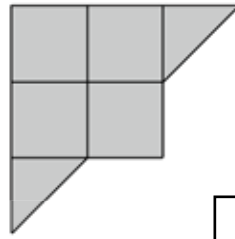


a



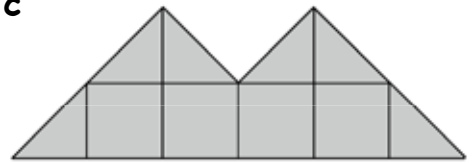
cm²

b



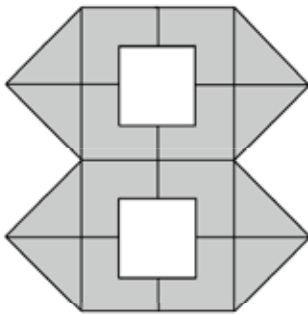
cm²

c



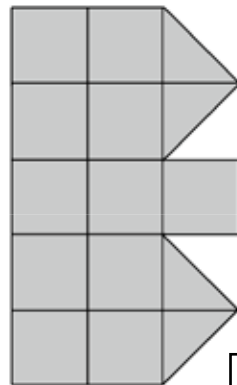
cm²

d



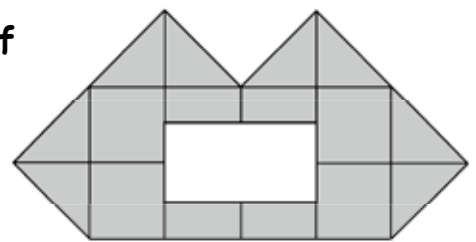
cm²

e



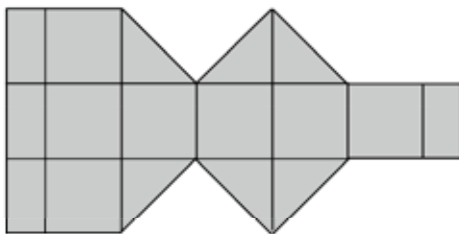
cm²

f



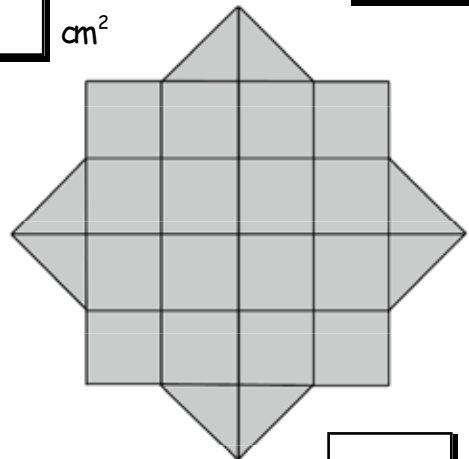
cm²

g



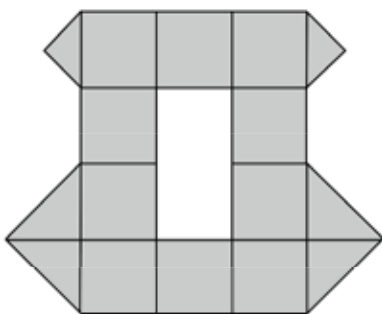
cm²

h



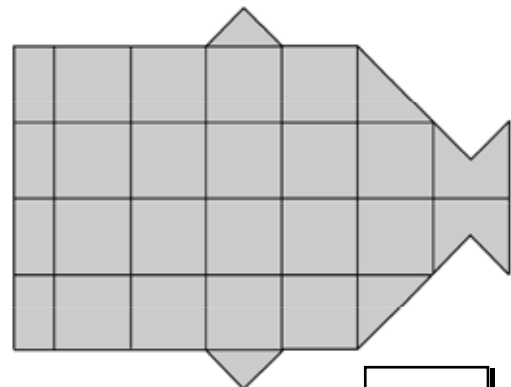
cm²

i



cm²

j

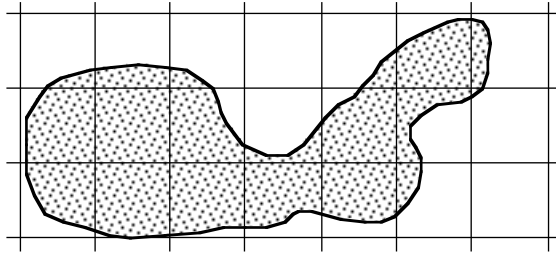


cm²

Show this to your teacher.

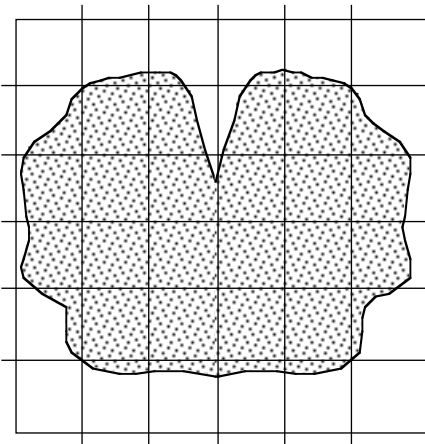
1. Estimate the area (...cm²) of the following shapes :-

a

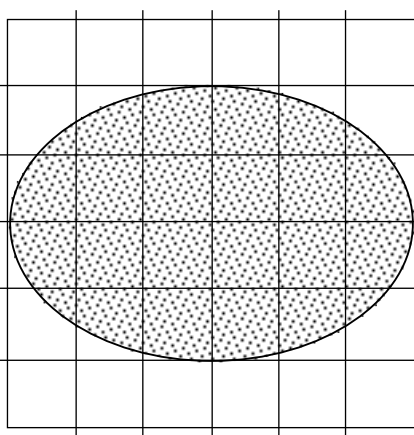


cm²

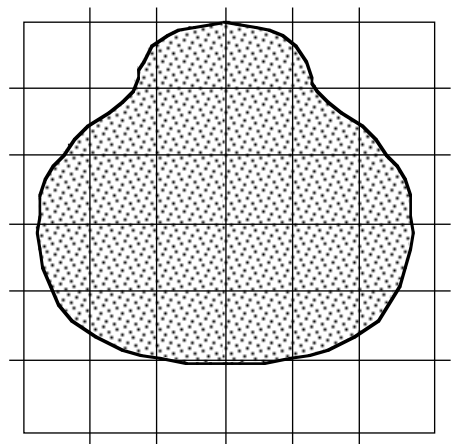
b



c



d

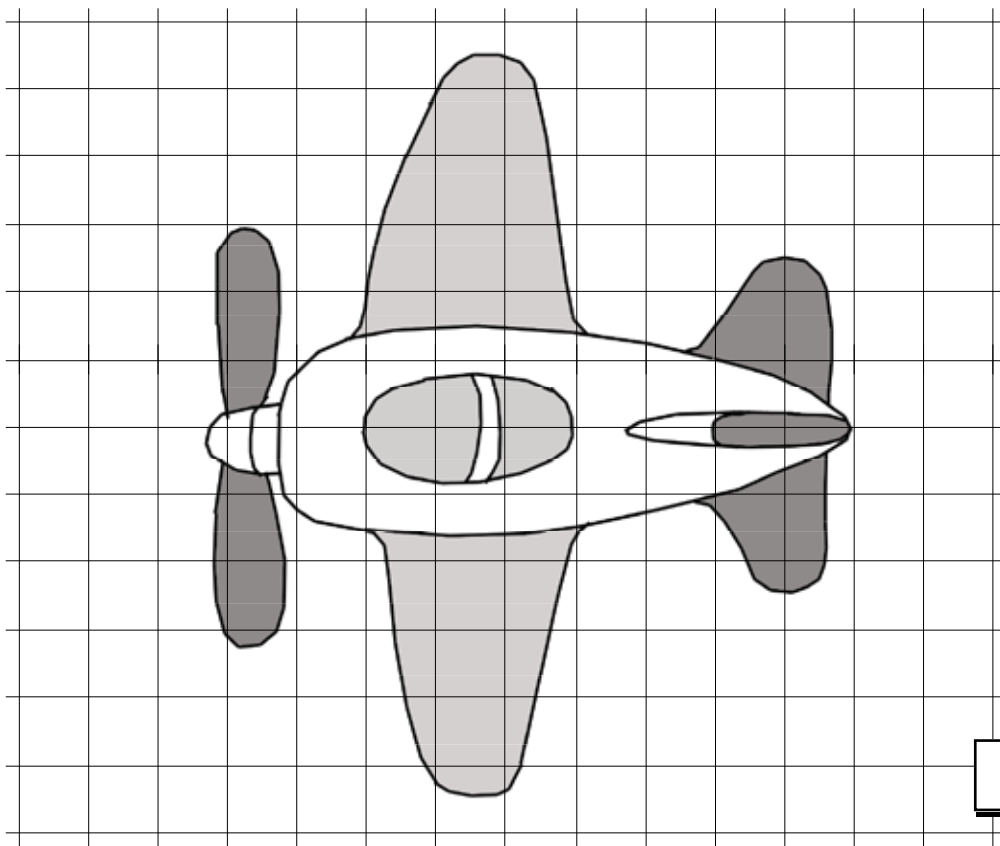


e

cm²

cm²

cm²



cm²

Show this to your teacher, then go to page 181 Exercise 4

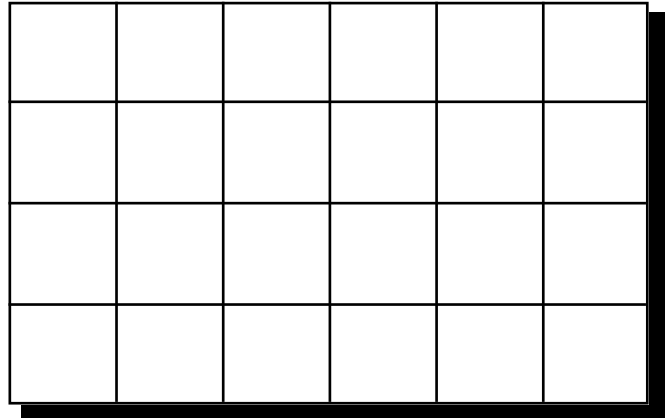
These questions are from textbook Chapter 16 page 186 questions 8 and 9.

8. a What is $\frac{1}{6}$ of 24 ?

b Colour $\frac{1}{6}$ of the rectangle red.

c Colour $\frac{1}{8}$ of it blue
and $\frac{1}{4}$ of it yellow.

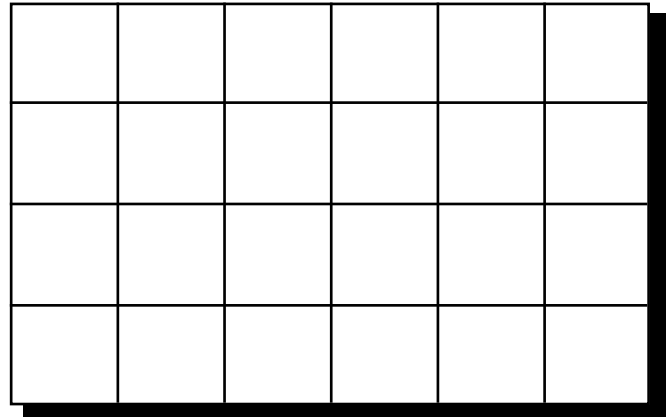
d How many squares are not coloured ?



9. a Colour :-

- one half red
- one quarter blue
- one eighth green.

b How many squares are not coloured ?



Extra question

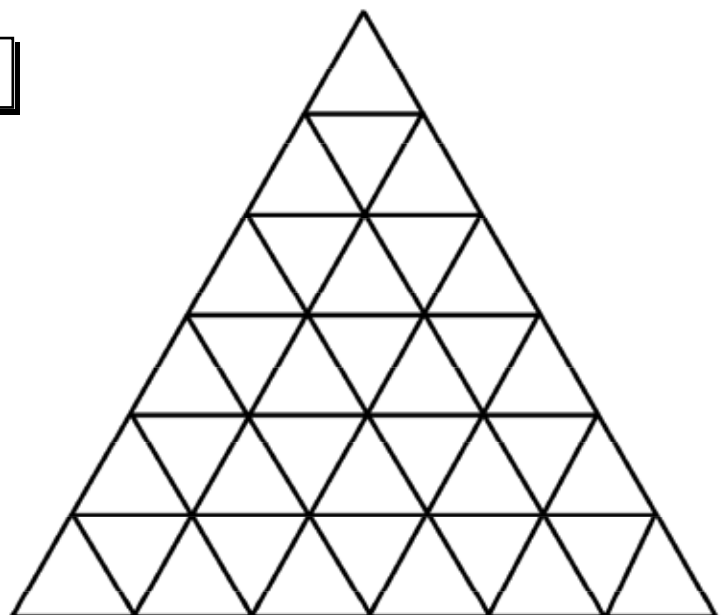
a How many small triangles ?

b Colour $\frac{1}{2}$ of the shape red.

c Colour $\frac{1}{6}$ of the shape blue.

d Colour $\frac{1}{4}$ of the shape green.

e How many triangles are not coloured ?



Show this to your teacher, then go to page 187 Question 10

These questions are from textbook Chapter 16 page 189 questions 4 and 5.

4. a Colour in 2 boxes red in figure 1.

b What fraction have you shaded ?




figure 1

c Colour in the correct number of boxes in figure 2 so that both figures look the same.

d Use your drawings to complete :-

$$\frac{\square}{3} = \frac{\square}{6}$$




figure 2

5. a Colour in 3 parts of this circle in figure 3.

b What fraction have you shaded ?

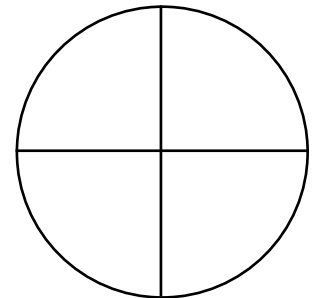


figure 3

c Colour in the correct number of parts in figure 4 so that both figures look the same.

d Use your drawings to complete :-

$$\frac{\square}{4} = \frac{6}{\square}$$

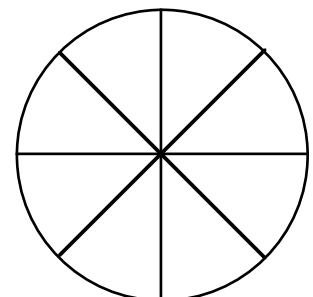


figure 4

Show this to your teacher.