




Halving and Doubling Towers

Challenge Cards



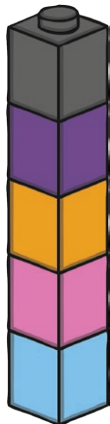
Halving and Doubling Towers

1. Can you make a tower that is double the height of mine? How many bricks will you need?




Halving and Doubling Towers

2. Can you make a tower that is double the height of mine? How many bricks will you need?



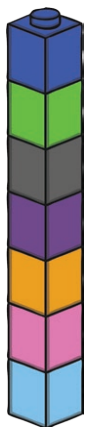
Halving and Doubling Towers

3. Can you make a tower that is double the height of mine? How many bricks will you need?



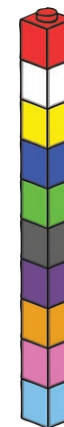
Halving and Doubling Towers

4. Can you make a tower that is double the height of mine? How many bricks will you need?



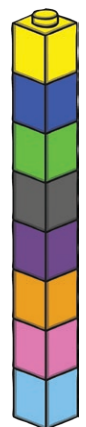
Halving and Doubling Towers

5. Can you make a tower that is double the height of mine? How many bricks will you need?




Halving and Doubling Towers

6. Can you make a tower that is double the height of mine? How many bricks will you need?



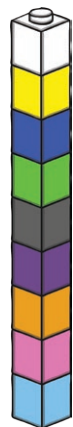
Halving and Doubling Towers

7. Can you make a tower that is double the height of mine? How many bricks will you need?



Halving and Doubling Towers

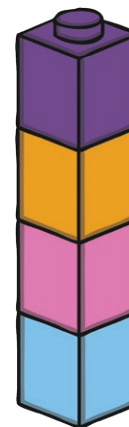
8. Can you make a tower that is double the height of mine? How many bricks will you need?



twinkl.com

Halving and Doubling Towers

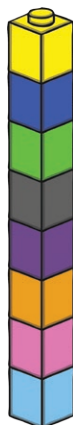
9. Can you make a tower that is half the height of mine? How many bricks will you need?



twinkl.com

Halving and Doubling Towers

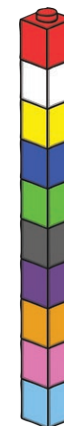
10. Can you make a tower that is half the height of mine? How many bricks will you need?



twinkl.com

Halving and Doubling Towers

11. Can you make a tower that is half the height of mine? How many bricks will you need?



twinkl.com

Halving and Doubling Towers

12. Can you make a tower that is half the height of mine? How many bricks will you need?



twinkl.com

Halving and Doubling Towers

13. Can you make a tower that is half the height of mine? How many bricks will you need?



twinkl.com

Halving and Doubling Towers

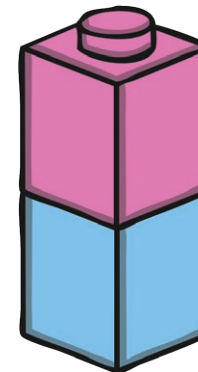
14. Can you make a tower that is half the height of mine? How many bricks will you need?



twinkl.com

Halving and Doubling Towers

15. Can you make a tower that is half the height of mine? How many bricks will you need?



twinkl.com

16. Can you make a tower that is half the height of mine? How many bricks will you need?



Halving and Doubling Towers Challenge Cards **Answers**

1. **Double 4 = 8 bricks**
2. **Double 5 = 10 bricks**
3. **Double 2 = 4 bricks**
4. **Double 7 = 14 bricks**
5. **Double 10 = 20 bricks**
6. **Double 8 = 16 bricks**
7. **Double 6 = 12 bricks**
8. **Double 9 = 18 bricks**
9. **Half of 4 = 2 bricks**
10. **Half of 8 = 4 bricks**
11. **Half of 10 = 5 bricks**
12. **Half of 12 = 6 bricks**
13. **Half of 14 = 7 bricks**
14. **Half of 18 = 9 bricks**
15. **Half of 2 = 1 brick**
16. **Half of 16 = 8 bricks**