

Mixed Money Problems without a Calculator

Exercise 3


1. Ravi bought a can of cola for 85p and a packet of crisps for 32p.
How much did this cost him **in total**?



2. a **Five** chocolate lollies costs £3.35. How much did it cost for **one** lolly?

b Joe paid 87p for a pen. How much would it cost for **4** pens?

c How much would it cost for **six** cakes if **one** cost 45p?



3. Zoheb paid £4.40 for a hamburger and 150p for french fries.
What change did Zoheb get from three £2 coins?

4. Ben buys a cooked breakfast.

Bacon £1.25, Mushrooms 40p, Toast 25p and Fresh Orange Juice 80p.

a What is the total cost of Ben's breakfast?


b He only has two £1 coins and one 50p coin with him.

Will this be enough? **Explain!**

5. A fish supper costs £5.10. Mr Chips buys **three** fish suppers.

a How much change did he get from a £20 note?

b Give an example of what coins he might have had in his change.



6. a Mr Jack paid £81 for **three** concert tickets.

How much was each ticket?

b Mrs Burrows paid £1.50 for a programme.

How much would she pay for **four** programmes?



7. a A packet of crisps costs 75p. How much would it cost for **5** packets?

b How much would **one** plant cost if **eight** plants costs £48?

Money with a Calculator

When using money there **MUST** be **two** numbers after the decimal point.

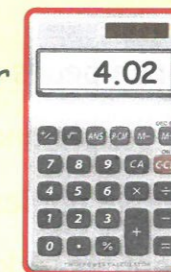
Be able to use a calculator when working with money problems



The sum of money shown on this calculator

is **£4.02**

(£4 and 2 pence)

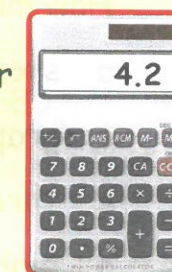


The sum of money shown on this calculator

is **£4.20**

(£4 and 20 pence)


NOT £4.02




Exercise 4

1. Write down the amount of money shown on each calculator :-


a




b




c



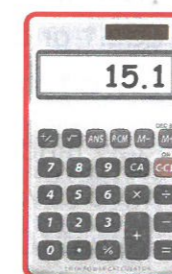
d




e



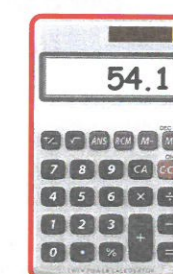
f



g



h



2. Ollie buys a juice at £1.75 and a sandwich at £2.35.
How much did he pay **in total**?

3. Bee bought a scarf at £14.50 and a headband at £8.40.

How much **more** did she pay for the scarf than the headband?

