





1. d How many  are in  ?



e How many  are in  ?

f How many  are in  ?



2. How many 1p coins can I get for :-

a  b 



3. How many 2p coins can I get for :-

a  b 

4. How many 5p coins can I get for :-

a  b 

5. How many 10p coins can I get for :-

a  b 

Here is another coin you might use every day.




£1 coin

There are 100 pence in £1.

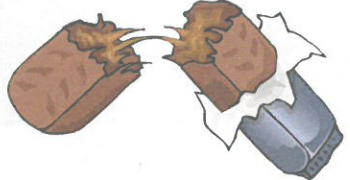
6. How many  pieces are in  ?


Worksheet 8.1


- 7. a How many 20p pieces can I get for £1 ?
- b How many 10p pieces can I get for £1 ?
- c How many 5p pieces can I get for £1 ?
- d How many 2p pieces can I get for £1 ?





8. List the coins you might use to pay for each item exactly :-


a  25p

b  80p

c  57p

d  76p

e  48p

f  99p

9. Make up some questions of your own, similar to question 8.

Worksheet 8.2