

The 3  
9's

Revisit - Review - Revise



1. Work out :-


a	48	b	236	c	457	d	809
	<u>- 7</u>		<u>- 24</u>		<u>- 136</u>		<u>- 203</u>

2. Find :-

a 68 - 5      b 484 - 63      c 769 - 368      d 957 - 205.


3. Tina texted her mum **368** times last month.  
Una texted her mum **122** times fewer.  
How many times did Una text her mum ?



4.  A baker has a tray of **237** steak pies.  
He puts **25** into the oven to heat.  
How many have still to be heated ?

5. VMH Stores had **396** copies of the PC game "Green Ghost" in stock.  
They sold **273** on the first day they were on sale.  
How many did they have left ?



6.  Mr Marsh ordered **589** bedding plants from Gardening Mail .... **223** Pansies,  
**130** Marigolds, the rest were Asters.  
a How many Asters ?  
b How many **more** Asters than Marigolds ?

Chapter 8

Using Coins


Money 1

Be able to work with money up to £1.

Here are some coins you might use every day.



1p piece



2p piece



5p piece



10p piece



20p piece



50p piece

Example 1



is the same as



Example 2



is the same as



Example 3



is the same as



Exercise 1

1. a How many



are in



?

b How many



are in



?

c How many



are in



?