






2. Write the time on each of these clocks :-



3. Draw a clock face. Put hands on it to show **8 o'clock**.

4. Draw a clock face. Put hands on it to show **3 o'clock**.

5. a It is 10 o'clock. What time will it be in **1 hour**?

b It is 7 o'clock. I arrived home **1 hour ago**.

At what time did I arrive home?

c It is 6 o'clock. My favourite programme is on in **1 hour's time**.

At what time will my programme start?

d My plane left at 4 o'clock. The flight takes **3 hours**.

At what time will my plane land?

6. a It is 11 o'clock in the morning. I leave for work in **3 hours**.

At what time must I leave for work?

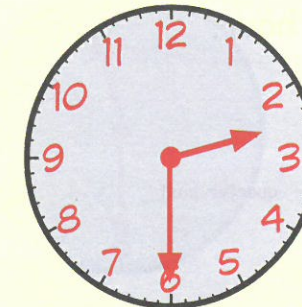
b It is 1 o'clock in the afternoon. I drank tea **2 hours ago**.

When did I have my cup of tea?

Telling the Time

When the **BIG** hand moves **half-way** round the clock, it is at the **6**.

The time reads as **half past** the hour.



just past the 2

Be able to tell the time using half past and quarter to/past.



This clock reads **half past 2**.

Exercise 4

1. Write the time shown on each clock :-

