

3. e What is the month just **after** April?  
 f What is the month just **before** November?  
 g What is the month just **after** February?  
 h What is the month just **before** January?



4. What **month** is it :-  
 a 2 months **after** June      b 2 months **after** September  
 c 2 months **before** July      d 2 months **before** March  
 e 3 months **after** December      f 2 months **before** February?

5. What month is it **12 months after** May?

6. a What is the **3rd** month of the year?  
 b What is the **6th** month of the year?  
 c What is the **last** month of the year?  
 d What is the **2nd last** month of the year?



7. a Use a Calendar to find how many days there are in each month.

For example, **December** has 31 days and **June** has 30 days.



b Here is a small rhyme that tells you how many days there are in each month.

Check that the rhyme works for each month of the year.


c Try to learn the rhyme.

30 days has September,  
 April, June and November.  
 All the rest have 31, except February,  
 which has 28 days clear,  
 and 29 days each leap year.

### Telling the Time on the Hour

When the **BIG** hand is pointing to 12, the small hand tells you what the hour (**o'clock**) is.

This clock reads **4 o'clock**.



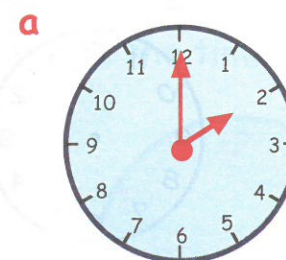
Be able to tell the time - o'clock only.



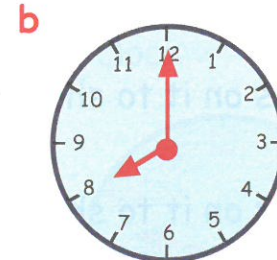
4 o'clock

### Exercise 3

1. Write the time shown on each clock :-



.... o'clock



.... o'clock

