



5. Jack has two 50p coins.  
He spent 64p on sweets.  
What coins would he expect in his change?




6. Una paid £3.75 for a magazine and 95p for juice.  
a How much did she spend altogether?  
b What change should she get from a £5 note?  
c List the coins she might get in her change.



7.  Jo went into the shop with a £10 note.  
After buying a hat, she had £2.28.  
How much was the hat?

8. Sally has £17 in her purse.  
She buys perfume for £8.75,  
face cream for £3.60 and  
soap for 95p.  
How much does she have left?



9.  Ben has a £5 note, four £2 coins a  
50p coin and a 20p coin.  
His train fare costs £3.74 and he  
buys lunch for £4.88.  
He also buys a book (£3.50) for the train.  
How much does he have left?

10. Copy and complete the bill,  
working out the total cost.


2 chips at 75p each	=	£
1 burger at £1.65	=	£
3 colas at 68p each	=	£
<b>Total</b>	=	£

# Chapter 8

## The Calendar

### Time 2

Be able to use a calendar to answer questions.



#### Remember

There are **7 days** in a **week**.  
There are **12 months** in a **year**.

*30 days has September, April, June and November.  
All the rest have 31, except February which has 28 days clear and 29 in each leap year.*



### Worksheet 8.1

#### Exercise 1

- a What is the **1<sup>st</sup>** month of the year?

b What is the **last** month of the year?

c Which day comes 2 days **after** Thursday?

d Which day comes 3 days **before** Monday?

e Which month comes 3 months **after** July?

f Which month comes 4 months **before** May?
- How many days are there in the month of :-

a January    b February    c April    d June

e August    f October    g November    h December?
- What is the :-

a 6<sup>th</sup> month    b 3<sup>rd</sup> month    c 10<sup>th</sup> month    d 8<sup>th</sup> month?

