

Literacy

- Reading

Look carefully at the picture and answer the questions. Try to answer in a sentence.

At the Beach

By: _____



1. What are Inky Mouse, Snake and Bee doing?

2. How many seagulls are there flying over the sea?

3. What is the weather like?

4. What is the seagull next to the green bag doing?

5. How many spots can you see on the umbrella?

6. What else do you think is in the green bag?

- Listening and Talking

Choose one of the challenges and talk about what you can see.

Jolly Phonics Grammar

Spot the Difference Challenge

Circle 5 differences between these two pictures.

Describe what is happening in the picture:

Circle 5 differences between these two pictures.

Describe what is happening in the picture:

Jolly Phonics Grammar

Odd One Out Challenge

Circle the odd one out in each line. Give reasons for your choices.

Maths

- **Sumdog**


Challenge 3 finishes today. Have you earned 100 gold coins?

- **Word Problems**


Choose the level of challenge that's best for you

Word Problems within 10


If you have 8 slices of pizza and 5 slices are eaten, how many slices would you have left?



If you have 3 rubber ducks and are given another 4, how many rubber ducks would you have?



If you have 6 flowers and give 2 of them away, how many would you have left?




If you invite 10 people to a party and 3 of them say they can't come, how many people will be at the party?



Word Problems within 20


Number Bonds to 20
There are 12 glasses bottles on a shelf. The shelf can hold 20 bottles. How many more can I put on the shelf?

20	
12	?




Number Bonds to 20
I have 20 ice cubes. I use 6 ice cubes in a glass of lemonade. How many do I have left?

20	
6	?




Number Bonds to 20
I have 20 chunks of chocolate. I eat 11 chunks. How many do I have left?

20	
11	?




Number Bonds to 20
In my garden, there are 7 red birds and 13 yellow birds. How many birds are there altogether?

?	
7	13




Word Problems within 100


Addition and Subtraction Word Problems Challenge Cards




Addition and Subtraction to 100 Word Problems
1. If you have 67 slices of pizza and 15 slices are eaten, how many slices would you have left?



Addition and Subtraction to 100 Word Problems
2. If you have 72 rubber ducks and are given another 17, how many rubber ducks would you have?




























Addition and Subtraction to 100 Word Problems
3. If you have 100 flowers and give 34 of them away, how many would you have left?



Nature Walk Scavenger Hunt

Mark each item as you find it. Can you find five in a row?


worm  <input type="checkbox"/>	leaf  <input type="checkbox"/>	insect  <input type="checkbox"/>	grass  <input type="checkbox"/>	flower  <input type="checkbox"/>
twig  <input type="checkbox"/>	bush  <input type="checkbox"/>	rocks  <input type="checkbox"/>	bird  <input type="checkbox"/>	squirrel  <input type="checkbox"/>
river  <input type="checkbox"/>	field or meadow  <input type="checkbox"/>	tree  <input type="checkbox"/>	cloud  <input type="checkbox"/>	spider  <input type="checkbox"/>
soil  <input type="checkbox"/>	ant  <input type="checkbox"/>	butterfly  <input type="checkbox"/>	caterpillar  <input type="checkbox"/>	raindrops  <input type="checkbox"/>
web  <input type="checkbox"/>	breeze  <input type="checkbox"/>	branch  <input type="checkbox"/>	nest  <input type="checkbox"/>	stones  <input type="checkbox"/>

twinkl

visit [twinkl.com](https://www.twinkl.com)

twinkl

Story



<https://www.bbc.co.uk/iplayer/episode/b0bwdw8y/zog>