



### Reasoning in Addition Puzzle A

$$\text{Blue Circle} + \text{Green Square} = 5$$

$$\text{Blue Circle} + \text{Blue Circle} = 6$$


 =


 =

### Reasoning in Addition Puzzle B

$$\text{Yellow Circle} + \text{Red Triangle} = 6$$

$$\text{Yellow Circle} + \text{Red Triangle} + \text{Red Triangle} = 7$$


 =


 =

### Reasoning in Addition Puzzle C

$$\text{Yellow Diamond} + \text{Brown Star} = 4$$

$$\text{Yellow Diamond} + \text{Brown Star} + \text{Brown Star} = 4$$


 =


 =

### Reasoning in Addition Puzzle D

$$\text{Blue Hexagon} + \text{Blue Hexagon} = 20$$

$$\text{Blue Hexagon} + \text{Purple Square} = 16$$

 =

 =

## Reasoning in Addition Puzzle E

			7
			6
			4
4	7	6	



## Reasoning in Addition Puzzle F

			7
			5
			11
2	6	15	

