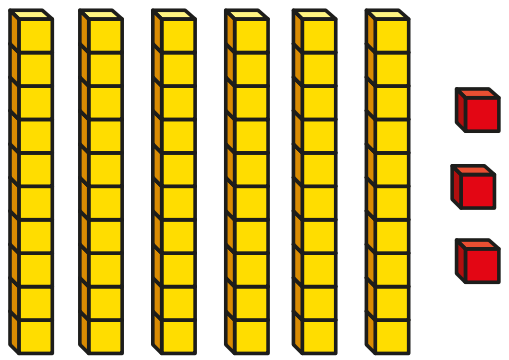


# One more one less

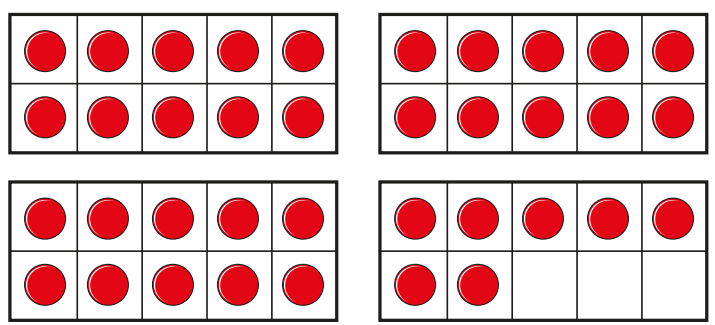


**I** What is one more than each number?

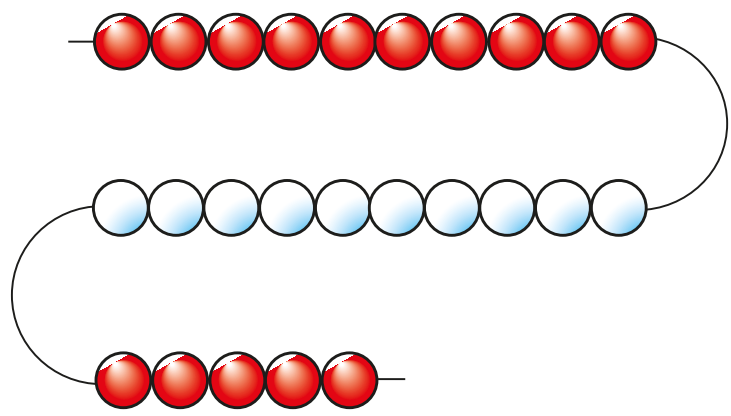
a)




b)

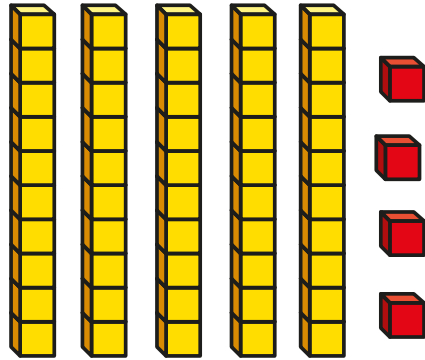



c)





**2** Sam makes this number.



a) Make a number that is one less than Sam's.

b) What number did you make?

**3** Kim has 73 stickers.

She gets one more sticker.

How many stickers does she have now?

**4** Write one more than each number.

a) 48

d) 9

b) 73

e) 36

c) 59

f) 99





**5** Write one less than each number.

a) 61

d) 10

b) 83

e) 78

c) 90

f) 29

**6** Complete the sentences.

a) One less than 39 is

b) One more than 39 is

c) One more than

is 39

d) One less than

is 39

