



Sketching Time on Analog Clocks (A)


Name: _____


Date: _____


Sketch each time on the clock face above it.


1. 
Midnight Noon
9:15 AM


2. 
Midnight Noon
5:45 AM


3. 
Midnight Noon
2:45 AM


4. 
Noon Midnight
8:00 PM


5. 
Noon Midnight
6:15 PM

6. 
Noon Midnight
4:00 PM


7. 
Midnight Noon
12:00 AM

8. 
Noon Midnight
3:30 PM

9. 
Noon Midnight
11:30 PM

10. 
Midnight Noon
10:15 AM

11. 
Noon Midnight
12:30 PM

12. 
Midnight Noon
6:45 AM

Sketching Time on Analog Clocks (A) Answers

Name: _____

Date: _____

Sketch each time on the clock face above it.

