
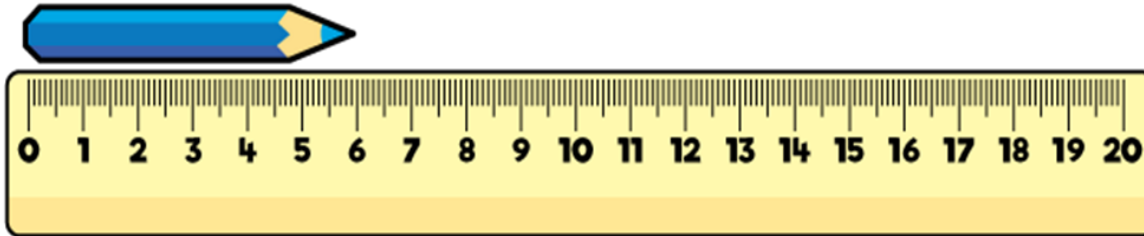


1) How long is the crayon?



2) How many more children play netball than rounders?

Sport played	Number of children
Rounders	● ● ● ●
Netball	● ● ● ● ●


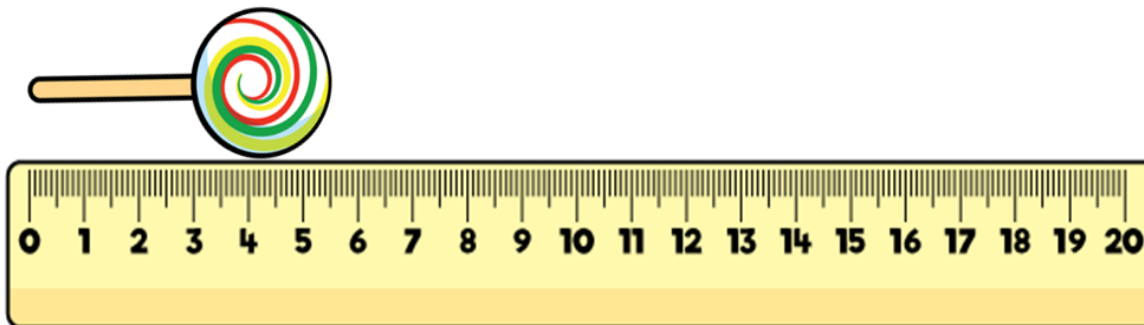
Key

● = 8 children

3) What is £5 and 27 p + £6 and 50 p?

4) How many hundreds are in 462?

1) How long is the lollipop?



2) Write 18 in tally marks.


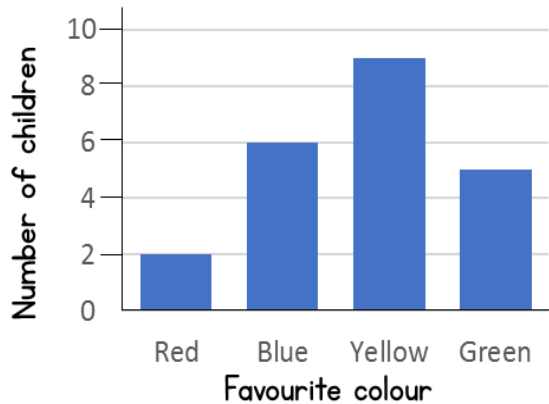
3) Find the total of £2 and 94 p and £5 and 79 p.

4) What is 3×12 ?

1) Complete the sentence.


_____ centimetres = 1 metre

2) How many more children like yellow than red?



3) What is £3 more than 452 p?

4) What is the value of the 5 digit in 325?




- 1) How many metres are equal to 300 centimetres?

- 2) Which unit of measurement would you use to measure the length of the classroom?
centimetres metres millimetres

- 3) Draw tally marks to show 21

- 4) Calculate $345 + 472$



1) Complete.

_____ millimetres = 4 centimetres

2) Which unit of measurement is best to measure the width of your fingernail?

centimetres metres millimetres

3) If one ● represents 8 people, what do 5 ● represent?

4) What is the product of 14 and 3?