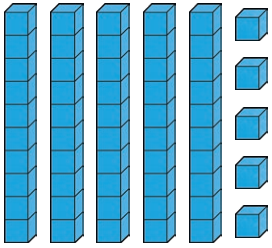
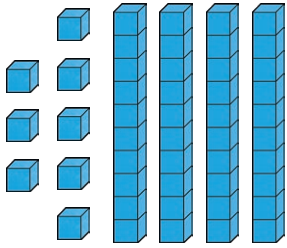
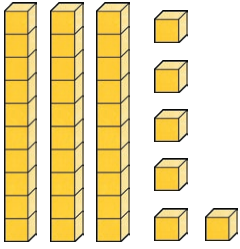
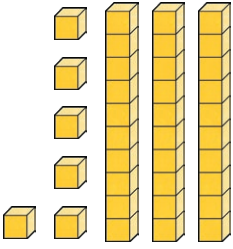


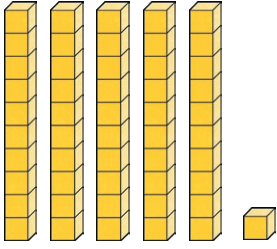
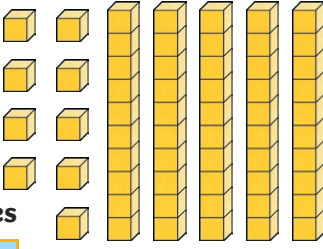


# Greater Than or Less Than

Compare these numbers. Write the number shown by the pictures then circle the correct sign. The first one is an example.







<p>tens ones 3 2</p>	<p>&gt; &lt; =</p>	<p>tens ones 2 4</p>
<p>tens ones □ □</p>	<p>&gt; &lt; =</p>	<p>tens ones □ □</p>
<p>tens ones □ □</p>	<p>&gt; &lt; =</p>	<p>tens ones □ □</p>
<p>tens ones □ □</p>	<p>&gt; &lt; =</p>	<p>tens ones □ □</p>

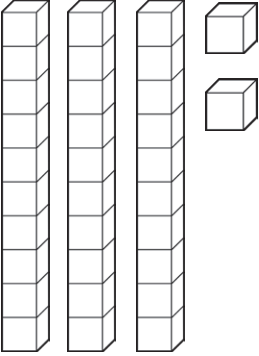
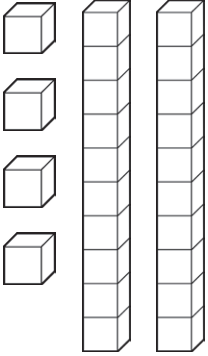
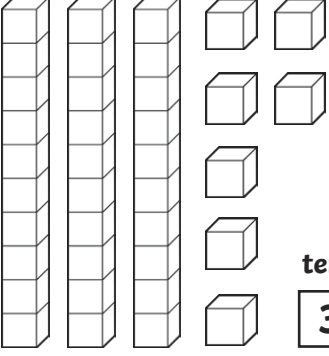
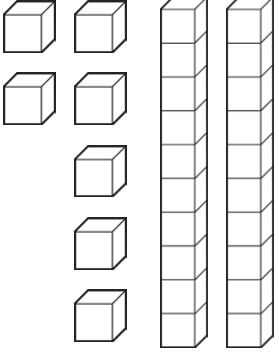
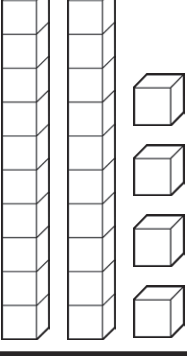
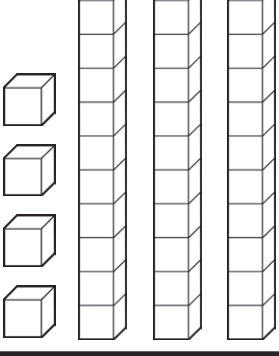
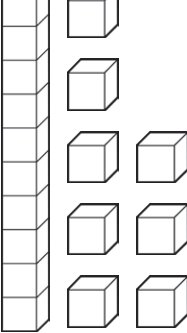

 <p>tens ones</p> <input type="text"/> <input type="text"/>	<p>&gt; &lt; =</p>	 <p>tens ones</p> <input type="text"/> <input type="text"/>
 <p>tens ones</p> <input type="text"/> <input type="text"/>	<p>&gt; &lt; =</p>	 <p>tens ones</p> <input type="text"/> <input type="text"/>
 <p>tens ones</p> <input type="text"/> <input type="text"/>	<p>&gt; &lt; =</p>	 <p>tens ones</p> <input type="text"/> <input type="text"/>
 <p>tens ones</p> <input type="text"/> <input type="text"/>	<p>&gt; &lt; =</p>	 <p>tens ones</p> <input type="text"/> <input type="text"/>

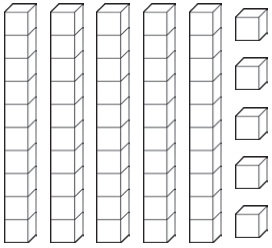
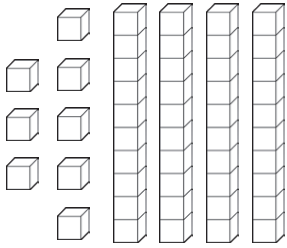
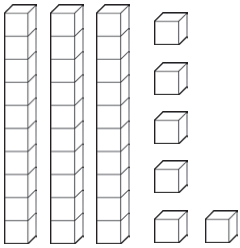
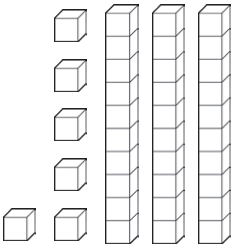
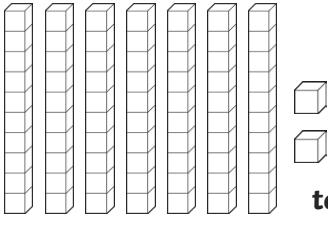

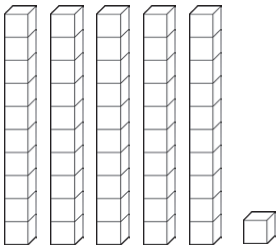
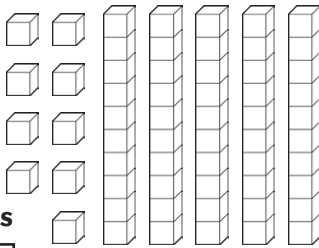


# Greater Than or Less Than Answers

Compare these numbers. Write the number shown by the pictures then circle the correct sign. The first one is an example.



 <p>tens ones <b>3</b> <b>2</b></p>	<p><b>&gt;</b> <b>&lt;</b> <b>=</b></p>	 <p>tens ones <b>2</b> <b>4</b></p>
 <p>tens ones <b>3</b> <b>7</b></p>	<p><b>&gt;</b> <b>&lt;</b> <b>=</b></p>	 <p>tens ones <b>2</b> <b>7</b></p>
 <p>tens ones <b>2</b> <b>4</b></p>	<p><b>&gt;</b> <b>&lt;</b> <b>=</b></p>	 <p>tens ones <b>3</b> <b>4</b></p>
 <p>tens ones <b>1</b> <b>8</b></p>	<p><b>&gt;</b> <b>&lt;</b> <b>=</b></p>	 <p>tens ones <b>3</b> <b>6</b></p>

 <p>tens ones <b>5 5</b></p>	<p><b>&gt;</b> <b>&lt;</b> <b>=</b></p>	 <p>tens ones <b>4 8</b></p>
 <p>tens ones <b>3 6</b></p>	<p><b>&gt;</b> <b>&lt;</b> <b>=</b></p>	 <p>tens ones <b>3 6</b></p>
 <p>tens ones <b>7 2</b></p>	<p><b>&gt;</b> <b>&lt;</b> <b>=</b></p>	 <p>tens ones <b>5 0</b></p>
 <p>tens ones <b>5 1</b></p>	<p><b>&gt;</b> <b>&lt;</b> <b>=</b></p>	 <p>tens ones <b>5 9</b></p>

