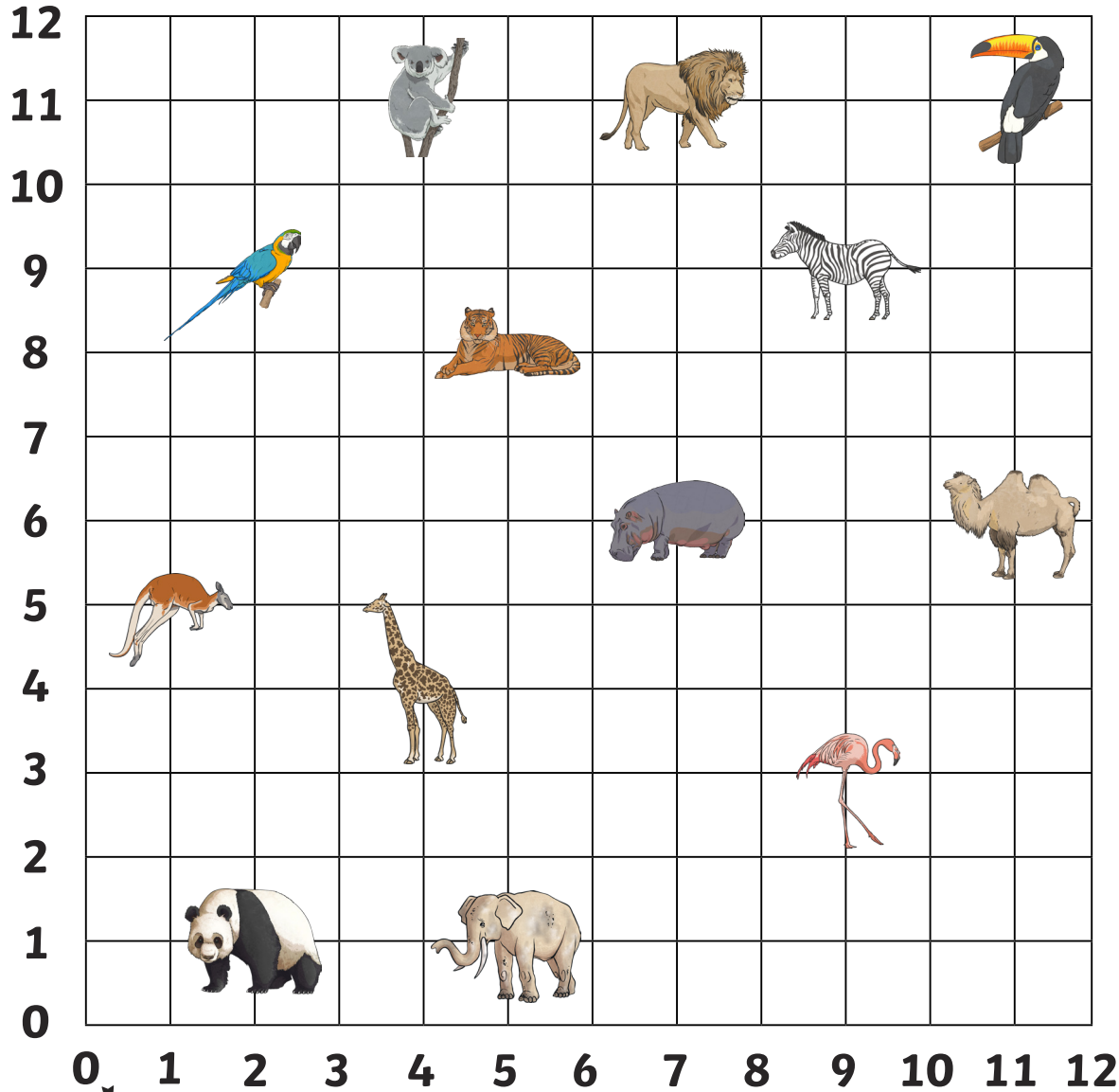


Zoo Coordinates

Which zoo animal is at the following coordinates?



$(7,11) =$ _____ $(7,6) =$ _____

$(2,1) =$ _____ $(11,6) =$ _____

$(11,11) =$ _____ $(1,5) =$ _____

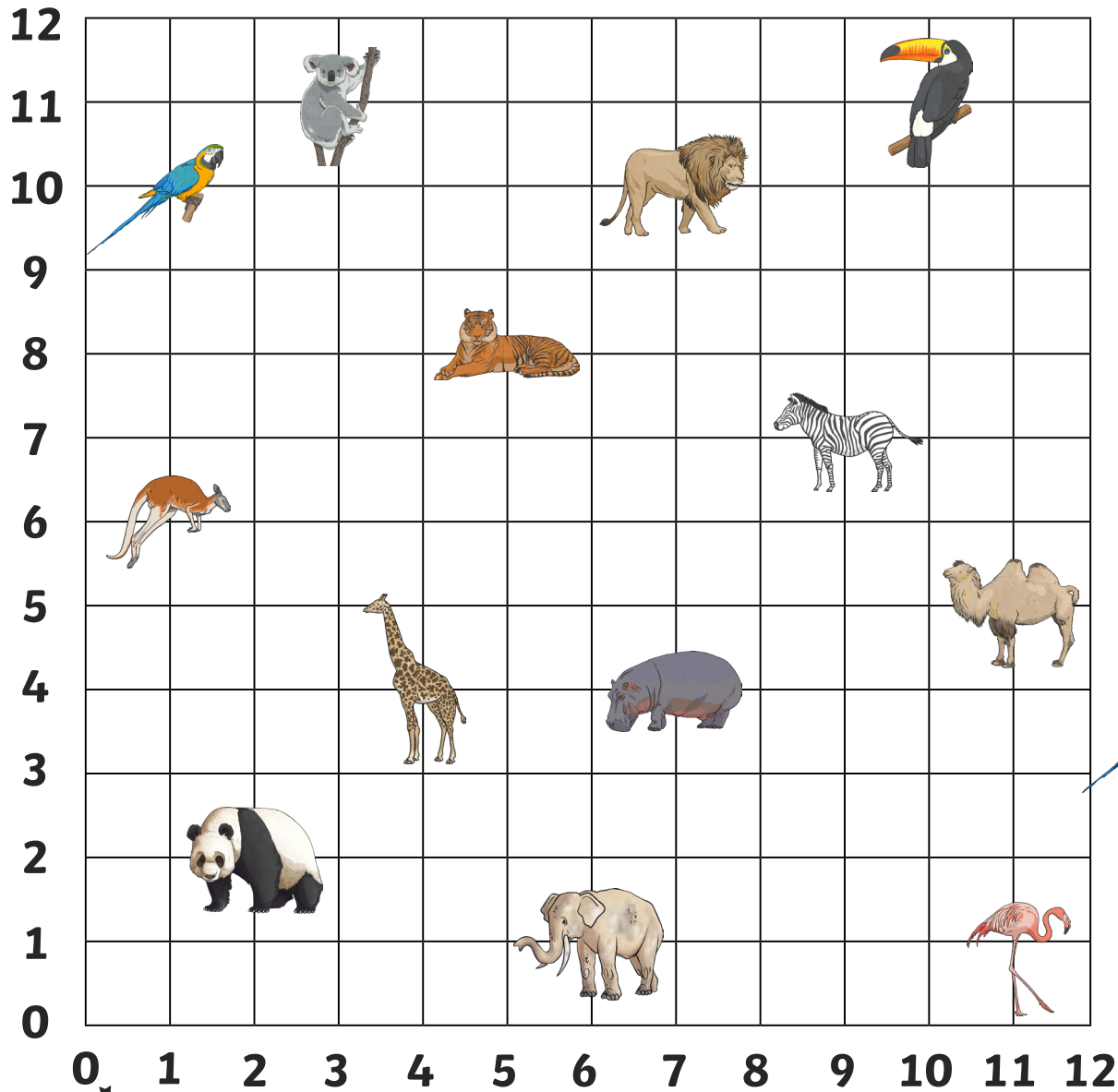
$(9,3) =$ _____ $(9,9) =$ _____

$(4,11) =$ _____ $(5,8) =$ _____

parrot	kangaroo	panda
koala	tiger	giraffe
elephant	flamingo	hippo
camel	zebra	lion
toucan		




Zoo Coordinates



Write the coordinates for the zoo animals:



= (,)



= (,)



= (,)




= (,)



= (,)



= (,)



= (,)



= (,)

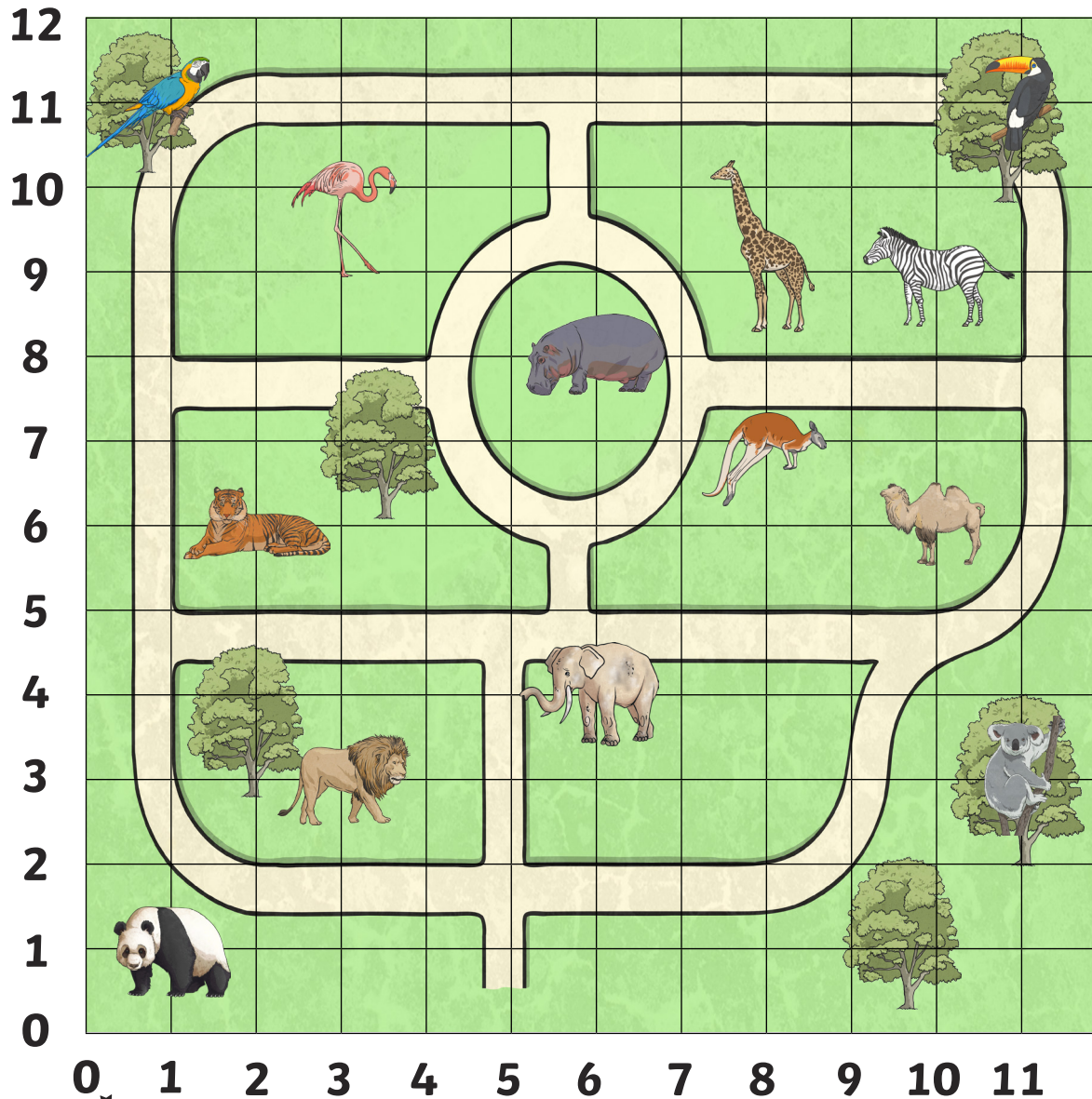


= (,)



= (,)

Zoo Coordinates



Which animal is at these coordinates on the zoo map?

(11,11) = _____

(2,6) = _____

(6,8) = _____

(3,10) = _____

(11,3) = _____

(1,1) = _____

Write the coordinates of these animals on the zoo map:



= _____



= _____



= _____



= _____



= _____



= _____

Draw your own zoo animals at these coordinates on the map:

(6,1)

(2,9)

(7,3)

(8,3)

(8,6)

(11,1)



12
11
10
9
8
7
6
5
4
3
2
1
0











0 1 2 3 4 5 6 7 8 9 10 11

Zoo Coordinates - Answers



- (7,11) = lion
- (2,1) = panda
- (11,11) = toucan
- (9,3) = flamingo
- (4,11) = koala
- (7,6) = hippo
- (11,6) = camel
- (1,5) = kangaroo
- (9,9) = zebra
- (5,8) = tiger









- | | | | |
|---|-----------|---|----------|
|  | = (3,11) |  | = (4,4) |
|  | = (7,10) |  | = (1,6) |
|  | = (10,11) |  | = (7,4) |
|  | = (1,10) |  | = (11,5) |
|  | = (5,8) |  | = (11,1) |



Which animal is at these coordinates on the zoo map?

- | | |
|------------------|-------------------|
| (11,11) = toucan | (2,6) = tiger |
| (6,8) = hippo | (3,10) = flamingo |
| (11,3) = koala | (1,1) = panda |

Write the coordinates of these animals on the zoo map:

- | | | | |
|---|----------|---|----------|
|  | = (1,11) |  | = (6,4) |
|  | = (3,3) |  | = (10,6) |
|  | = (10,9) |  | = (8,7) |