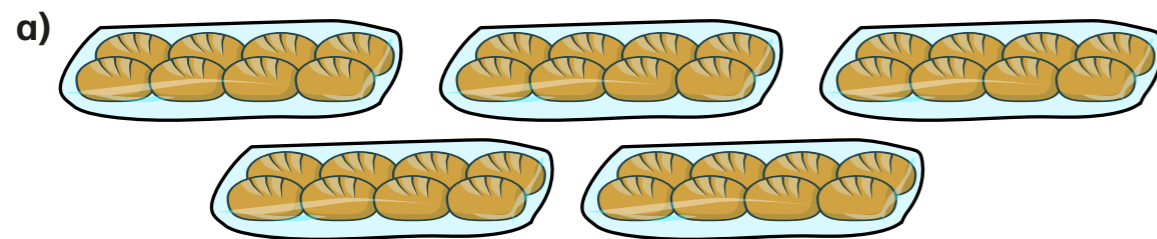
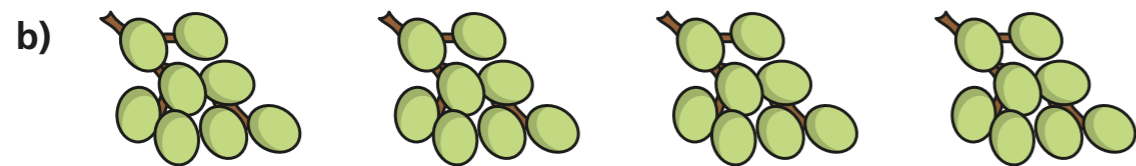


# The 8 times-table

**1** How many are there in total?  
Complete the multiplications.



$$\square \times \square = \square$$



$$\square \times \square = \square$$

**2** Complete the number tracks.


a) 

0	8	16	24				
---	---	----	----	--	--	--	--

b) 

96	88	80					
----	----	----	--	--	--	--	--

**3** Here is an array made up of triangles.



a) What multiplication sentence can you see?

$$\square \times \square = \square$$

b) What division sentence can you see?

$$\square \div \square = \square$$

**4** Complete the calculations.

Try to do the calculations in your head.

a)  $6 \times 8 = \square$

e)  $72 \div 8 = \square$

b)  $8 \times \square = 56$

f)  $\square \div 11 = 8$

c)  $10 \times 8 = \square$

g)  $\square \div 8 = 5$

d)  $\square = 8 \times 4$

h)  $8 \times 1 = \square$

