

Counting in coins



I How much money is there?

a)

<input type="text"/> p	<input type="text"/> p	<input type="text"/> p	<input type="text"/> p



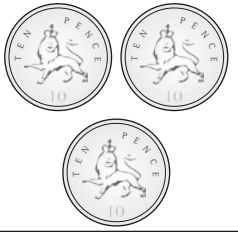

b)

<input type="text"/> p	<input type="text"/> p	<input type="text"/> p	<input type="text"/> p


c)

<input type="text"/> p	<input type="text"/> p	<input type="text"/> p	<input type="text"/> p

d)

			
<input type="text"/>	<input type="text"/>	<input type="text"/>	<input type="text"/>

2 How much money is there?

a)  p

b)  p

c)  p

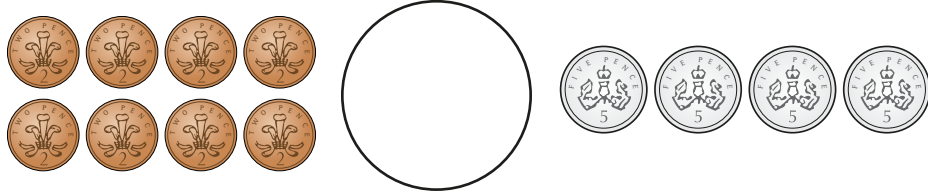
3 Write $<$, $>$ or $=$ to compare the amounts.

a)  

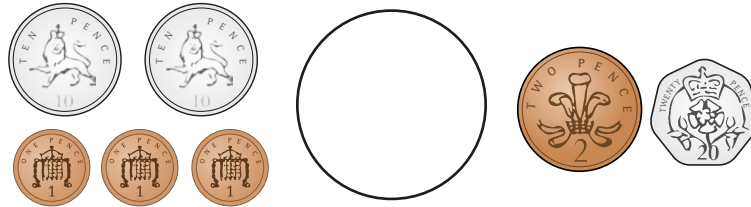
b)  




c)



d)



4 Sam has some 2p coins.




I have 11 pence.

Do you agree with Sam? _____

Talk about your answer.

5 Ron has nine 2p coins.

Jo has three silver coins.



I must have more money because I have more coins.

Ron

Do you agree with Ron? _____

Talk about your answer.