

Recognising coins



I Match the coin to the amount.



20 pence



5 pence



10 pence



1 pound



1 pence



50 pence



2 pence



2 pounds

2 Here are some coins.



Complete the sentences.

There are 1p coins.

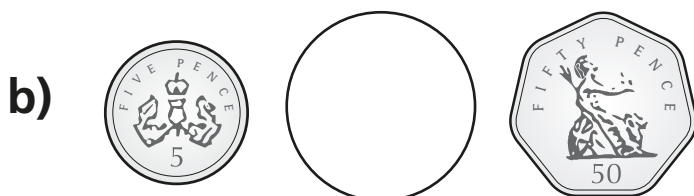
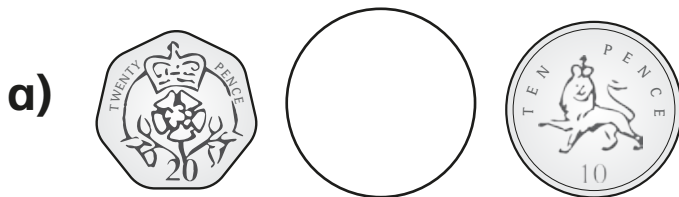
There are 2p coins.


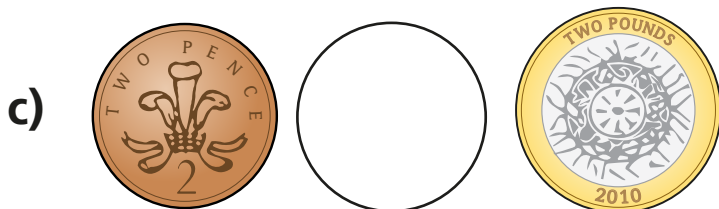
There is 5p coin.

There are 10p coins.

There are 20p coins.


3 Write $<$ or $>$ to compare the amounts.





4 Mo has one coin in his hand.

I have more than 2 pence,
but less than 1 pound.



Draw Mo's coin.

What is the value of Mo's coin?

p

Is there more than one answer?

