


Subtraction – crossing 10 (1)

- 1 Rosie has 15 cakes.



Her friends eat 6 cakes.

How many cakes does Rosie have left?

$$\boxed{15} - \boxed{6} = \boxed{9}$$

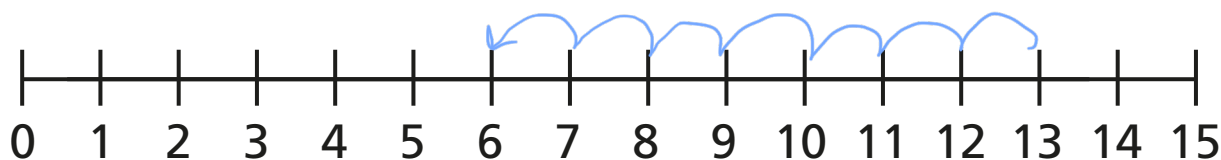
Rosie has $\boxed{9}$ cakes left.



- 2 Jack has 13 stickers.

He gives 7 stickers to Dora.

How many stickers does Jack have left?



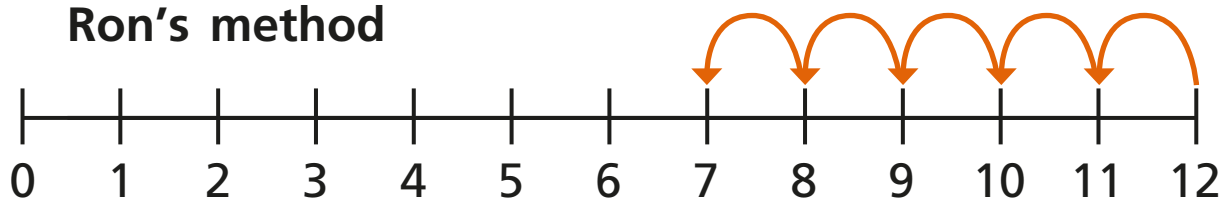
$$\boxed{13} - \boxed{7} = \boxed{6}$$

Jack has $\boxed{6}$ stickers left.

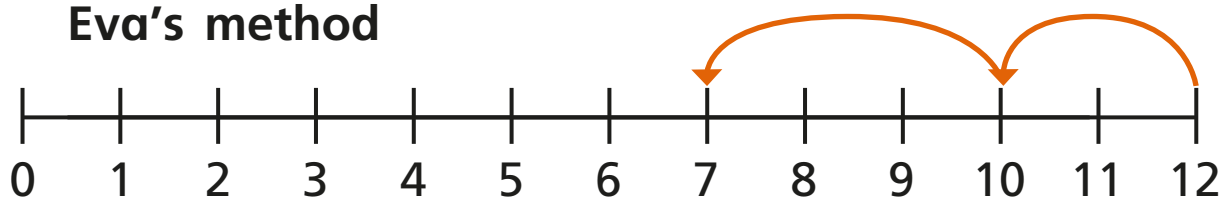


- 3 Ron and Eva have worked out $12 - 5$ on a number line.

Ron's method

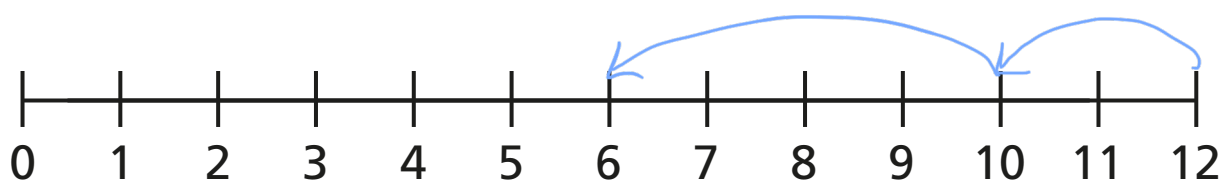


Eva's method

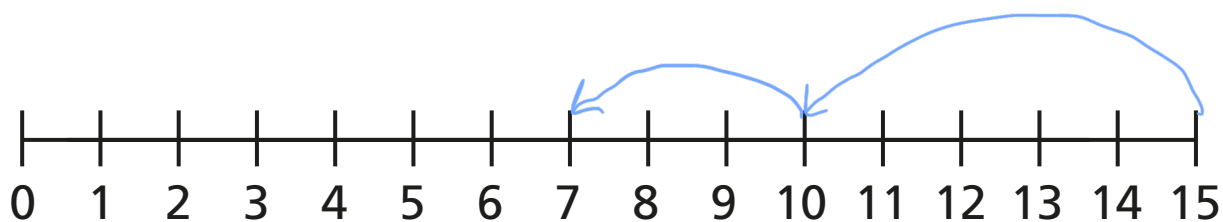


- a) What is the same and what is different?
- b) Use Eva's method to complete the subtractions.

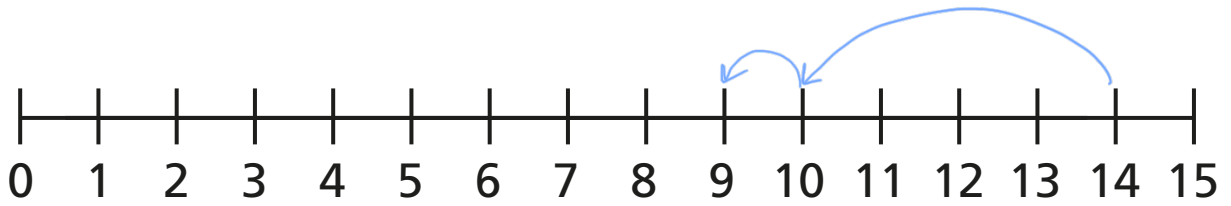
$$12 - 6 = \boxed{6}$$



$$15 - 8 = \boxed{7}$$

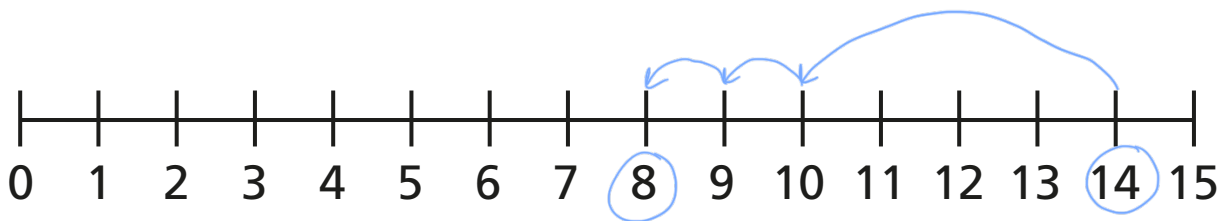


$$14 - 9 = \boxed{5}$$



4 Fill in the missing numbers.

$$14 - \boxed{6} = 8$$



$$\boxed{13} - 6 = 7$$

