




Add fractions


1 Complete the additions.

Use the bar models to help you.

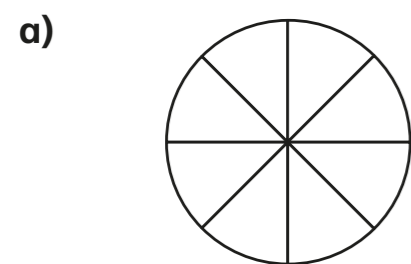
a)  $\frac{1}{3} + \frac{1}{3} = \square$

b)  $\frac{1}{5} + \frac{1}{5} = \square$

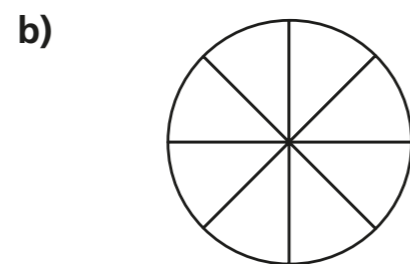
c)  $\frac{1}{5} + \frac{2}{5} = \square$

d)  $\frac{1}{5} + \frac{3}{5} = \square$

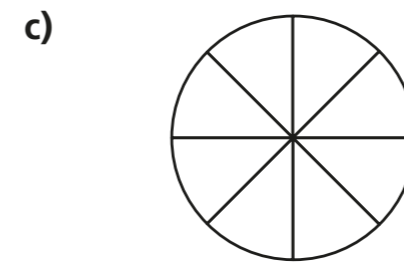
2 Shade the circles and complete the additions.



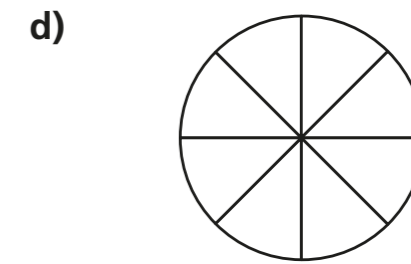
$\frac{1}{8} + \frac{3}{8} = \square$



$\frac{5}{8} + \frac{1}{8} = \square$

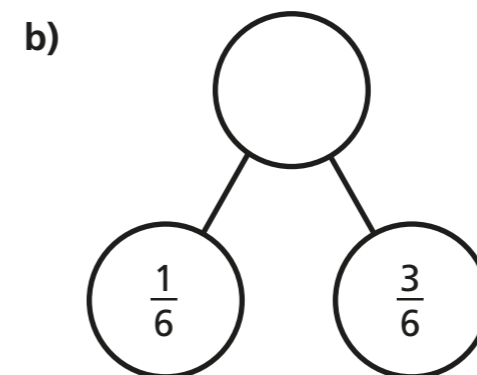
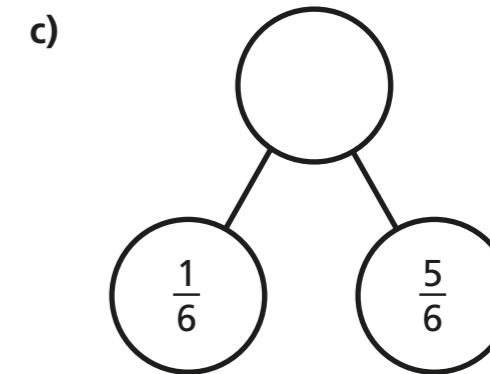
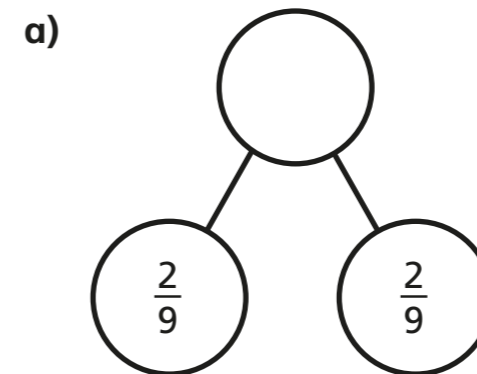


$\frac{3}{8} + \frac{3}{8} = \square$



$\frac{5}{8} + \frac{3}{8} = \square$

3 Complete the part-whole models.



Which part-whole model is the odd one out? _____

Talk about your choice with a partner. Did they choose the same odd one out?



- 4 Alex and Huan are eating a cake.

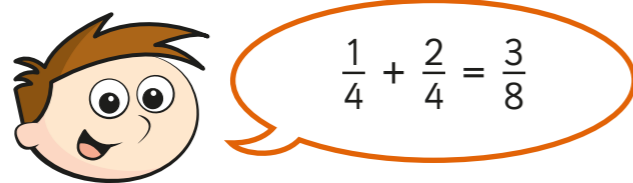
Alex eats $\frac{4}{7}$ of the cake.

Huan eats $\frac{2}{7}$ of the cake.

What fraction of the cake have they eaten altogether?

They have eaten of the cake altogether.

- 5 Teddy is adding fractions.



- a) Draw a bar model to show that Teddy is wrong.

- b) Complete the addition $\frac{1}{4} + \frac{2}{4} =$

- 6 Annie has baked 12 muffins.



She puts them into 2 boxes.

What fraction of the muffins could she put in each box?

Complete the table to show different possibilities.

One has been done for you.

Box 1	Box 2
$\frac{1}{12}$	$\frac{11}{12}$

Are there any other possibilities? Talk about it with a partner.

- 7 Complete the additions.

a) $\frac{3}{8} + \frac{4}{8} =$

d) $\frac{3}{103} + \frac{4}{103} =$

b) $\frac{3}{9} + \frac{4}{9} =$

e) $\frac{5}{31} + \frac{9}{31} =$

c) $\frac{3}{29} + \frac{4}{29} =$

f) $\frac{17}{111} + \frac{33}{111} =$