



# Find the Difference

I can find the difference between 2 numbers.

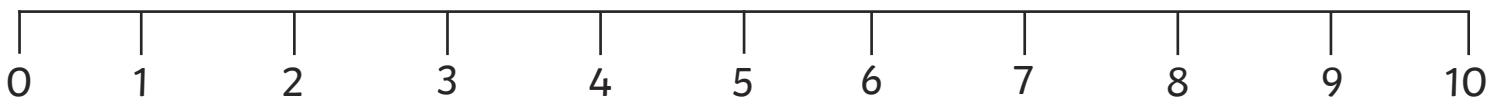


Choose 2 numbers from the board. Make towers with that number of cubes and find the difference between them.

1	7	3
5	4	8

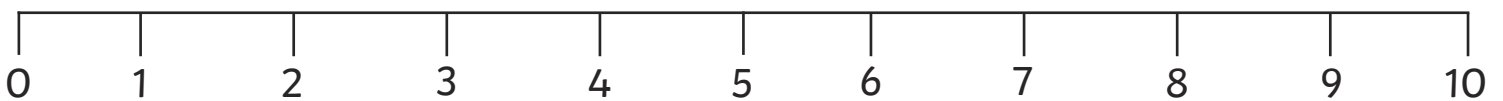
Draw jumps on the number line to match your numbers.

I chose \_\_\_\_\_ and \_\_\_\_\_.



The difference between \_\_\_\_\_ and \_\_\_\_\_ is \_\_\_\_\_.

I chose \_\_\_\_\_ and \_\_\_\_\_.

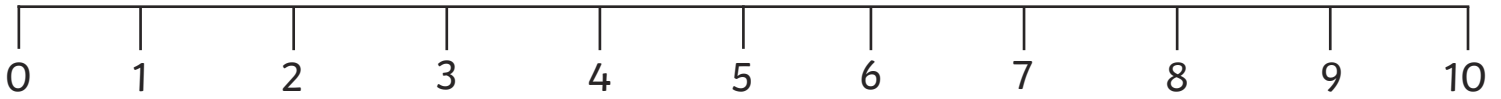


The difference between \_\_\_\_\_ and \_\_\_\_\_ is \_\_\_\_\_.



# Find the Difference

I chose \_\_\_\_\_ and \_\_\_\_\_.

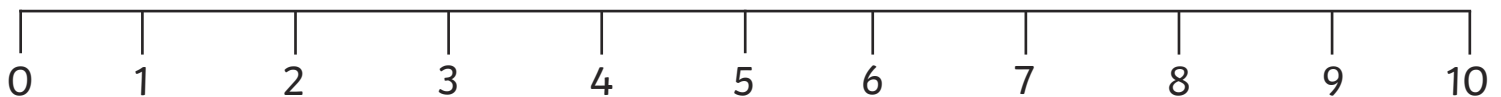
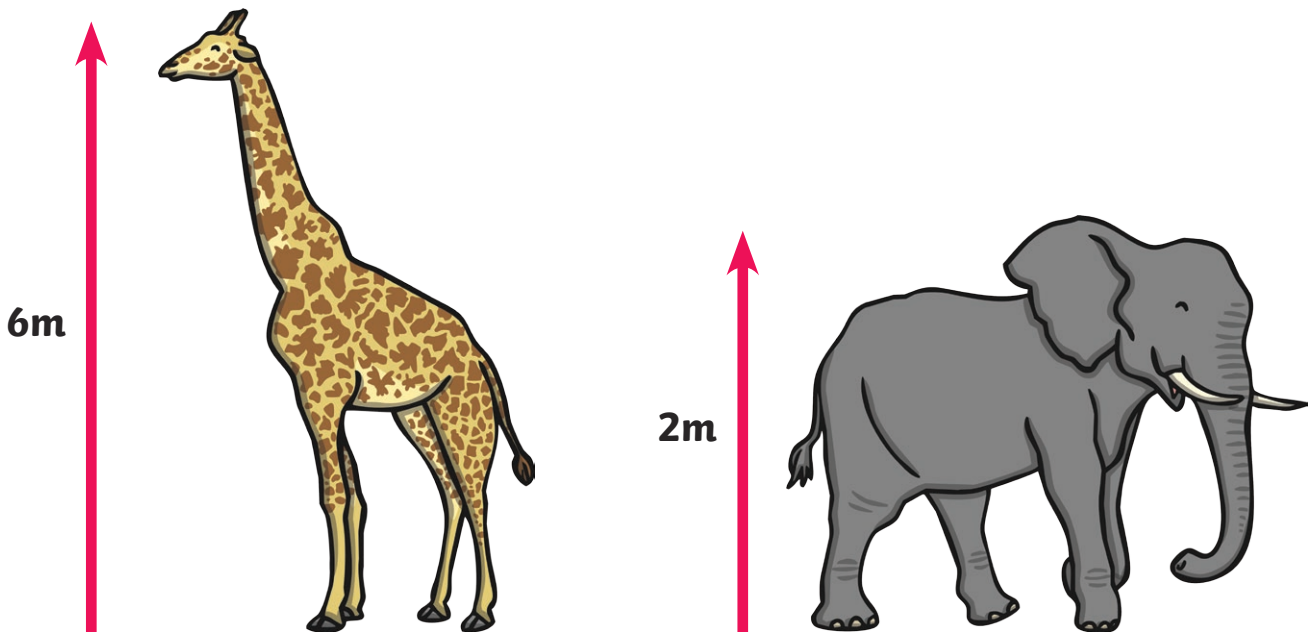


The difference between \_\_\_\_\_ and \_\_\_\_\_ is \_\_\_\_\_.

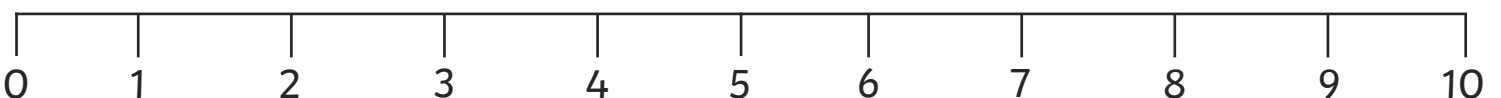
Read your sentences to a friend.

Use your cubes and a number line to solve these puzzles.

A giraffe is 6 metres tall. An elephant is 2 metres tall.  
What is the difference in their heights?



I am 5 years old and my brother is 9. What is the difference in our ages?





# Find the Difference **Answers**

A giraffe is 6 metres tall. An elephant is 2 metres tall.  
What is the difference in their heights? **4 metres**

I am 5 years old and my brother is 9. What is the difference in our ages?  
**4 years**



# Find the Difference

I can find the difference between 2 numbers.

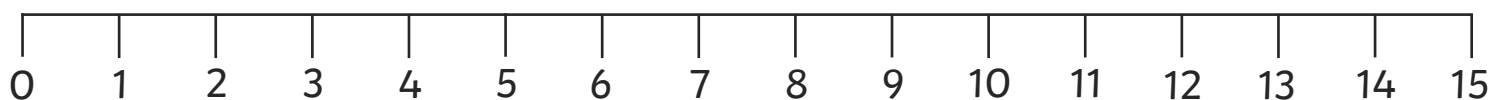


Choose 2 numbers from the board. Make towers with that number of cubes and find the difference between them.

11	7	6
10	9	14

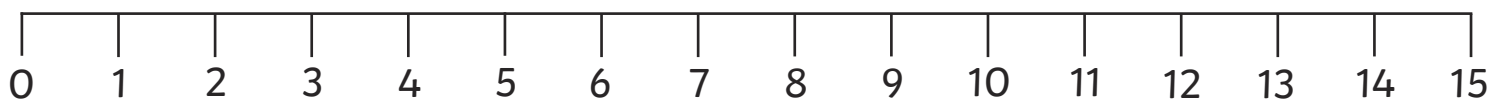
Draw jumps on the number line to match your numbers.

I chose \_\_\_\_\_ and \_\_\_\_\_.



The difference between \_\_\_\_\_ and \_\_\_\_\_ is \_\_\_\_\_.

I chose \_\_\_\_\_ and \_\_\_\_\_.



The difference between \_\_\_\_\_ and \_\_\_\_\_ is \_\_\_\_\_.



# Find the Difference

I chose \_\_\_\_\_ and \_\_\_\_\_.

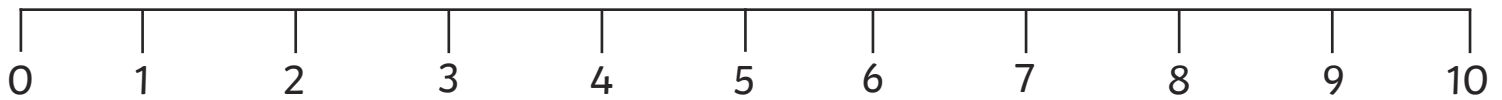




The difference between \_\_\_\_\_ and \_\_\_\_\_ is \_\_\_\_\_.

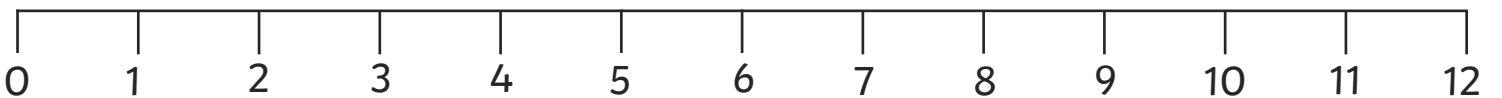
Read your sentences to a friend.

Use your cubes and a number line to solve these puzzles.

A rabbit weighs 3kg. A wolf weighs 10kg.  
What is the difference in their weights?



I run for 12 minutes and my brother runs for 7 minutes. What is the difference in the length of time of our runs?





# Find the Difference **Answers**

A rabbit weighs 3kg. A wolf weighs 10kg. What is the difference in their weights? **7kg**

I run for 12 minutes and my brother runs for 7 minutes. What is the difference in the length of time of our runs? **5 minutes**



# Find the Difference

I can find the difference between 2 numbers.



Choose 2 numbers from the board. Make towers with that number of cubes and find the difference between them.

Write sentences about your numbers.

Use: more than                      less than                      difference between

6

9

11

7

14

18

Draw jumps on the number line to match your numbers.

I chose \_\_\_\_\_ and \_\_\_\_\_.



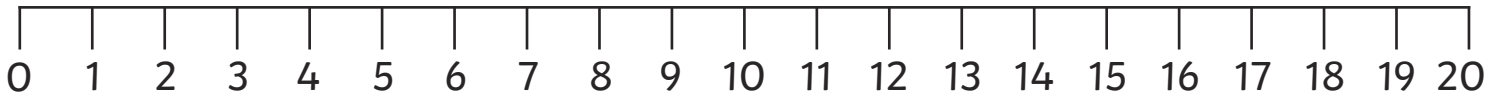
---

---

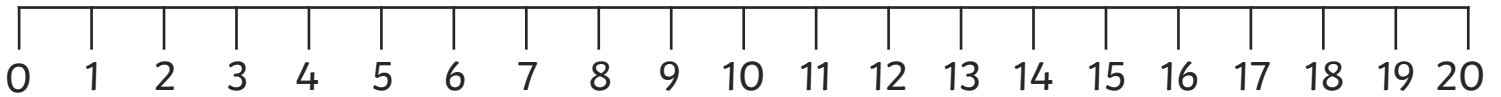


# Find the Difference

I chose \_\_\_\_\_ and \_\_\_\_\_.



I chose \_\_\_\_\_ and \_\_\_\_\_.



Read your sentences to a friend.

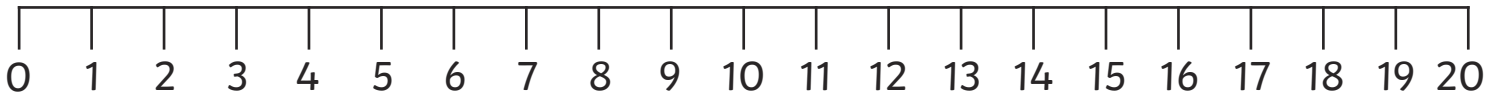
Solve these puzzles. Show your reasoning.

A giant has 16 teeth and a dwarf has 8.

A giant has \_\_\_\_\_ more teeth.

A dwarf has \_\_\_\_\_ fewer teeth.

The difference in the number of teeth is \_\_\_\_\_.

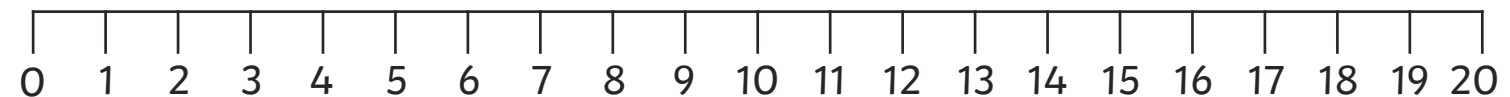


I send 18 messages and my brother sends 11.

I send \_\_\_\_\_ more messages.

My brother sends \_\_\_\_\_ fewer messages.

The difference in the number of messages is \_\_\_\_\_.







# Find the Difference Answers

A giant has 16 teeth and a dwarf has 8.

A giant has **8** more teeth.

A dwarf has **8** fewer teeth.

The difference in the number of teeth is **8**.

I send 18 messages and my brother sends 11.

I send **7** more messages.

My brother sends **7** fewer messages.

The difference in the number of messages is **7**.