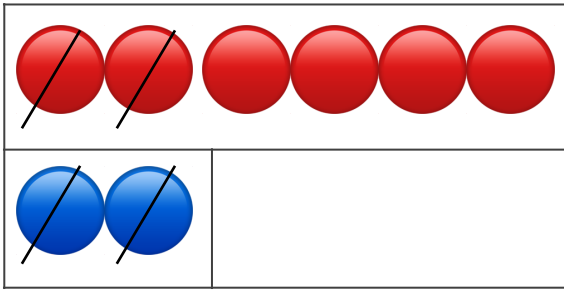
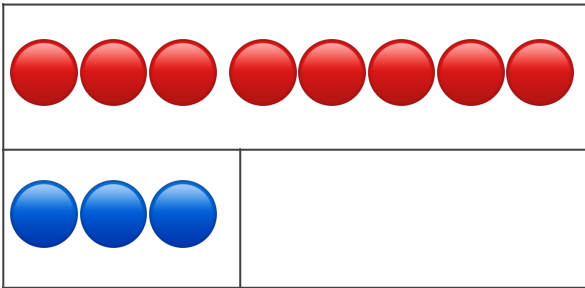


Finding the Difference



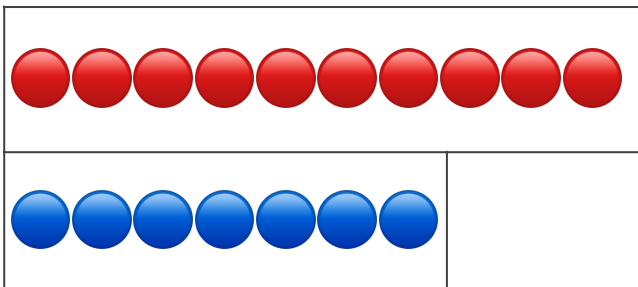
The difference between 6 and 2 is

$$6 - 2 = \underline{\quad}$$



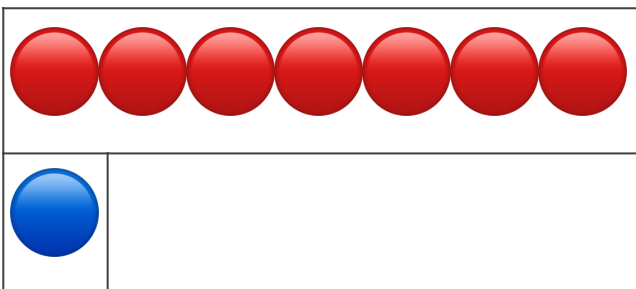
The difference between 8 and 3 is

$$8 - 3 = \underline{\quad}$$



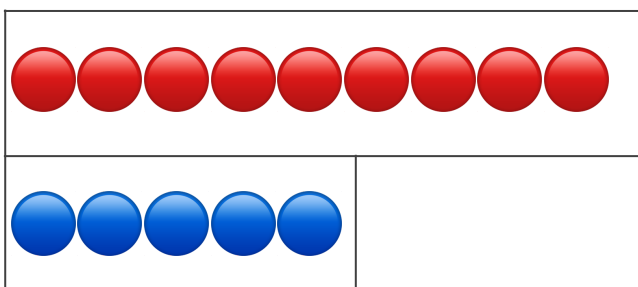
The difference between 10 and 7 is

$$10 - 7 = \underline{\quad}$$



The difference between 7 and 1 is

$$7 - 1 = \underline{\quad}$$



The difference between 9 and 5 is

$$9 - 5 = \underline{\quad}$$