


Add equal groups

I Complete the sentences.



There are apples in each bag.

There are bags.

There are equal groups of

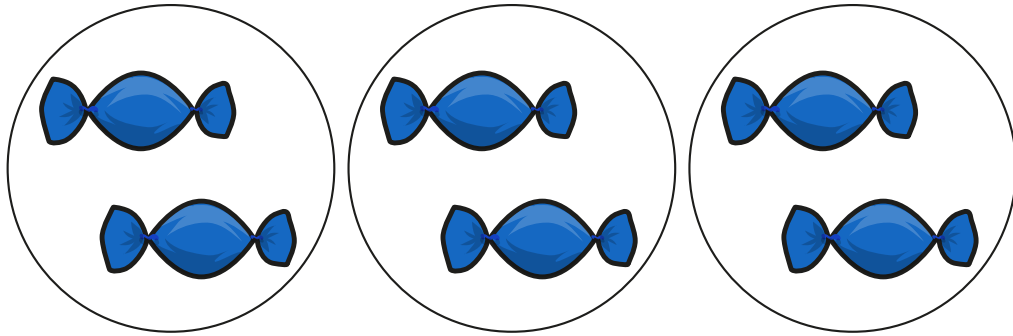
There are apples altogether.

$$\square + \square + \square + \square = \square$$






2 How many sweets are there?



$$\square + \square + \square = \square$$

There are sweets.

3 How many marbles are there?




$$\square + \square + \square = \square$$

There are marbles.





4 How many candles are there?



$$\square + \square + \square + \square = \square$$

There are candles.



5 Use counters to show the equal groups.

Complete the number sentences.

a) $2 + 2 + 2 + 2 =$

b) $5 + 5 + 5 + 5 + 5 =$

6 There are 7 equal groups of 5 counters.

How many counters are there altogether?

There are counters altogether.

