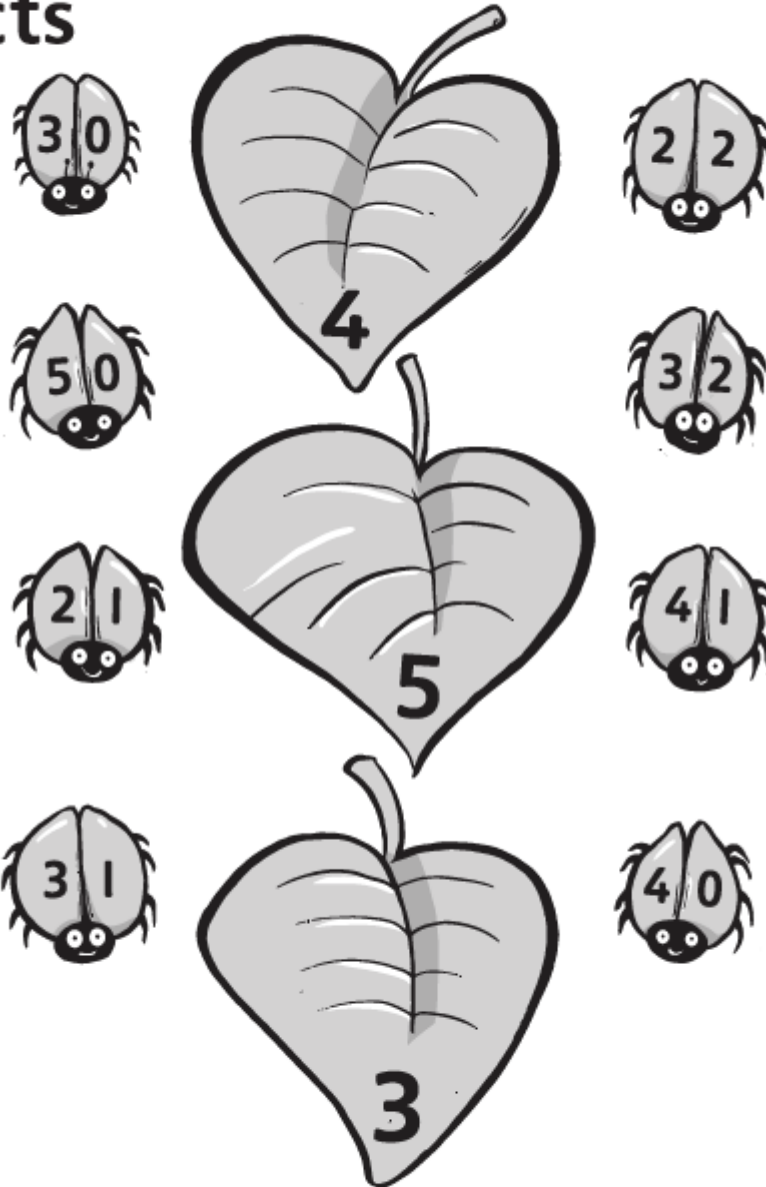


Match the ladybird facts



Cut out the ladybirds and stick them onto the correct leaves.



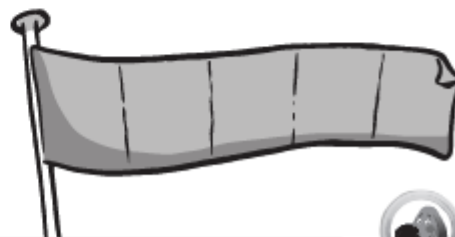
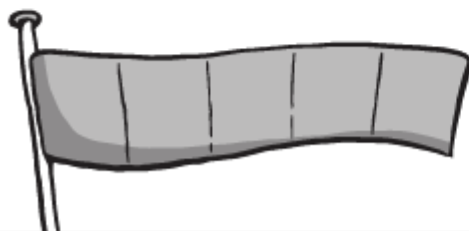
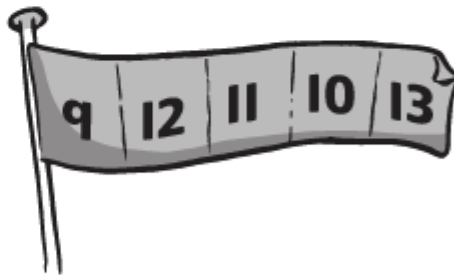

Can you make leaves with ladybird facts for 1 and 2?



Mixed-up numbers

10	12	19	14	18	11	13	16	17	15	20
----	----	----	----	----	----	----	----	----	----	----

10					15					20
----	--	--	--	--	----	--	--	--	--	----




Write the numbers in the correct order in the lower pictures.



What bigger numbers can you find on a 100-square?



Sorting numbers



9	18	15	20	5
8	40	19	100	17
33	12	50	14	

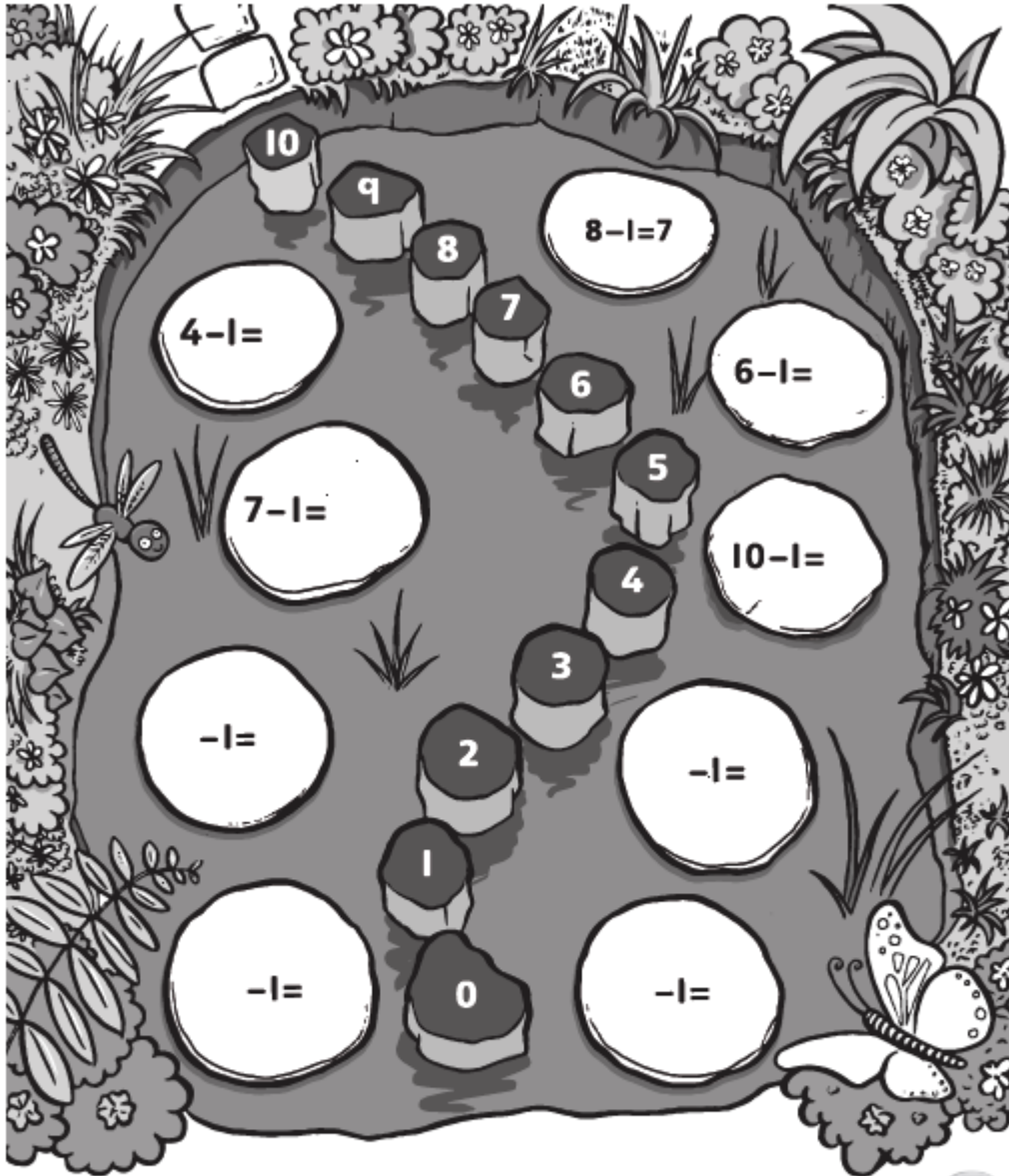
Cut out the numbers and stick them onto the correct side of the diagram.



Can you find the numbers on the sheet between 11 and 20 and put these in order? Which numbers are missing?



Counting back 1



Write the answers on the lily pads.

Make up some of your own for the last four examples. Use the stepping stones to help if necessary.



Can you make up some 'counting back 1' stories to share with a friend? Can you use bigger numbers?



Count back 1



Start at

Land at

- 7 →
- 3 →
- 1 →
- 9 →
-



-
-
-
-
-

number before	count back 1	1 less than
6 → <input type="text"/>	6 → <input type="text"/>	6 → <input type="text"/>
4 → <input type="text"/>	4 → <input type="text"/>	4 → <input type="text"/>
8 → <input type="text"/>	8 → <input type="text"/>	8 → <input type="text"/>
5 → <input type="text"/>	5 → <input type="text"/>	5 → <input type="text"/>

Count back 1 and write the answer. Can you make up one of your own for the last one?









In the second activity, what links can you see between the 'number before', 'count back 1' and '1 less than'?



Can you tell someone what happens when you count back 1?



Take away 2

  5 skittles 2 fall down <input type="text"/> left	  8 skittles 2 fall down <input type="text"/> left
  6 skittles 2 fall down <input type="text"/> left	  7 skittles 2 fall down <input type="text"/> left



Write the answers in the boxes.
Write how many dinosaurs come out and draw the correct number if you wish to.



Can you make up some more 'take away' dinosaur stories?



Match to add

<p>+ 2</p> <div style="display: flex; justify-content: space-around;"> <div style="border: 1px solid black; border-radius: 10px; padding: 5px; width: 40px; text-align: center;"> 2 4 8 </div> <div style="border: 1px solid black; border-radius: 10px; padding: 5px; width: 40px; text-align: center;"> 6 10 4 </div> </div>	<p>+ 3</p> <div style="display: flex; justify-content: space-around;"> <div style="border: 1px solid black; border-radius: 10px; padding: 5px; width: 40px; text-align: center;"> 5 4 7 </div> <div style="border: 1px solid black; border-radius: 10px; padding: 5px; width: 40px; text-align: center;"> 7 10 8 </div> </div>
<p>+ 4</p> <div style="display: flex; justify-content: space-around;"> <div style="border: 1px solid black; border-radius: 10px; padding: 5px; width: 40px; text-align: center;"> 3 6 5 </div> <div style="border: 1px solid black; border-radius: 10px; padding: 5px; width: 40px; text-align: center;"> 10 7 9 </div> </div>	<p>+ 5</p> <div style="display: flex; justify-content: space-around;"> <div style="border: 1px solid black; border-radius: 10px; padding: 5px; width: 40px; text-align: center;"> 5 3 4 </div> <div style="border: 1px solid black; border-radius: 10px; padding: 5px; width: 40px; text-align: center;"> 9 10 8 </div> </div>
<p>+ 6</p> <div style="display: flex; justify-content: space-around;"> <div style="border: 1px solid black; border-radius: 10px; padding: 5px; width: 40px; text-align: center;"> 4 2 3 </div> <div style="border: 1px solid black; border-radius: 10px; padding: 5px; width: 40px; text-align: center;"> 9 8 10 </div> </div>	<p>+ 7</p> <div style="display: flex; justify-content: space-around;"> <div style="border: 1px solid black; border-radius: 10px; padding: 5px; width: 40px; text-align: center;"> 2 1 3 </div> <div style="border: 1px solid black; border-radius: 10px; padding: 5px; width: 40px; text-align: center;"> 9 10 8 </div> </div>



Draw lines to match the correct answers.



Can you make your own adding challenge?

