



15.06.20 P2 SHAPE ANSWER




WALT identify and name some 2D shapes. (MTH 1-16a)

2D shape: 2 dimensional – length and width.



circle



triangle




square




rectangle




semi-circle



pentagon



hexagon



octagon

I am going to describe a drawing I want you to do. Try and follow the instructions and see what you end up with. You can compare it to my drawing at the end of the week, when I put the answers on the Blog.

1. Draw a big yellow rectangle.
2. In the middle of the rectangle, draw a small red triangle.
3. Below the red triangle but still inside the rectangle, draw a slightly bigger pink octagon.
4. Above the red triangle and still inside the yellow rectangle, draw 2 blue semi-circles. One of them is above the red triangle and a little to the right. The other blue semi-circle is above the red triangle and a little to the left.
5. On top of the yellow rectangle, draw a big green triangle.
6. On top of the green triangle, sitting on the top corner, draw a small red circle.

Challenge: Do a drawing using 2D shapes then describe it to someone else and see if they can draw it. Compare pictures afterwards.