

Task 1.

Okay boys and girls, let's get warmed up for the holidays. Click on one of the icons to be taken to the activity. Feel free to try them all!

Disney




STAR WARS



Instructions

Click on the home icon to be taken back to this page.
Click the right arrow to go forward and the left arrow to go back.



	Adult	Child
Single	£250	£100
Return	£450	£175



	Adult	Child
Single	£350	£150
Return	£575	£250



Under 5s travel free

	Adult	Child
Single	£250	£150
Return	£450	£250



Task 2.

You arrive at the airport and need to buy tickets for your family who are traveling with you.

Work out the cheapest return price for your family.



Task 3.

Woohoo! You're in Orlando!

Ask everyone in your family what their dream hotel would have. Design the perfect hotel for you all.



Task 4.

Time for the parks! You leave Disney Springs at 8:40am. How long until you get to The Magic Kingdom?

Bus Timetable

Caribbean Beach	8.30am
Disney Springs	8.40am
Key West	8.45am
Epcot	8.55am
Grand Floridian	9.05am
Magic Kingdom	9.15am
Contemporary	9.20am



Task 5.

We need to buy park tickets! Calculate the cost for tickets for your family. Make sure you have time to visit all the parks!

Design a ticket, showing the price for your family.



Weekly Pass

Family of 4	\$90
Adult	\$50
Child	\$35
< 2 years old	Free

Daily Pass

Family of 4	\$50
Adult	\$30
Child	\$20
< 2 years old	Free



MAPS

★ Magic Kingdom Park

Task 6.

Plan out a route of the parks for your stay. Talk to your family to see where they would like to go and ensure those places are included in the route. Click the stars to be taken to maps of the parks.



Task 7.

Why not take a tour or hop on a ride. Enjoy!

The Magic Kingdom

Epcot

Slinky Dog Roller coaster

Expedition Mt. Everest

Hagrid's Motorbike Adventure



Price List

Bottles = $\frac{1}{4}$ of \$52

Snow globe = $\frac{1}{2}$ of \$30

Teddy = $\frac{3}{8}$ of \$88

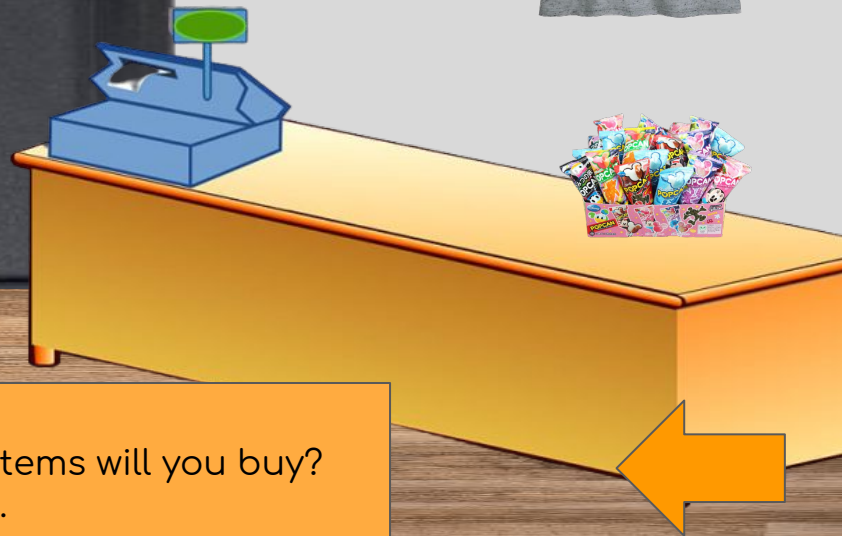

Pencils = \$3.25 each or \$8.50 for 3

Pin badges = \$8 each or \$15 for 2

T-shirts = $\frac{1}{2}$ of £80

Hats/Ears = $\frac{1}{4}$ of \$32

Candy = $\frac{2}{5}$ of \$10



Task 8. Time to go home :(

You have \$100 to spend in the gift shop. What items will you buy?
Calculate the cost and change you will receive.