




08.06.20 P2 Time Worksheet



Questions: WALT use our time knowledge to solve time questions. (MNU 1-10a)




1. It is 8 o'clock in the morning (8am). School should be starting in one hour's time. What time should school be starting?



2. It is 10am (10 o'clock in the morning). Mrs Duff is going to have a cup of tea and a biscuit in one hour from now. What time will Mrs Duff be having her cup of tea?




3. It is 2pm (2 o'clock in the afternoon). Bob ate his lunch 2 hours ago. When did Bob eat his lunch?



4. It is 3 o'clock in the afternoon (3pm). Millie's favourite TV programme starts in one hour from now. What time does the TV programme start?



5. It is 11pm (11 o'clock at night). John went to bed 3 hours ago. What time did John go to bed?



6. It is 5am (5 o'clock in the morning). I have to catch a train at 10am (10 o'clock in the morning). How many hours do I have to wait until I catch my train?

April						2013
SUN	MON	TUE	WED	THU	FRI	SAT
	1	2	3	4	5	6
7	8	9	10	11	12	13
14	15	16	17	18	19	20
21	22	23	24	25	26	27
28	29	30				

The above calendar page shows the month of April (not this year). The days of the week are along the top. (WALT use a calendar to get information. MNU 1-10b)

1. Which year is the calendar showing?
2. How many Saturdays are there in April? (Hint: go to the Saturday at the top of the page, then count down all the Saturday boxes which have a number in them.)

3. What day of the week is 24th April? (Hint: go to the box with 24 in it then go straight up to the day at the top.)
4. How many Mondays are in April?
5. How many days are in April in total?
6. What day of the week is the last day of April?
7. Mrs Duff's brother's birthday is on 26th April. What day of the week is that?
8. How many Thursdays are in April?
9. Pretend it is Friday 12th April. I have to go to the dentist a week today. What date will that be?
10. Pretend it is 6th April. I am going to the cinema with my friends the next day. What day and date am I going to the cinema?
11. What is the month that comes after April?
12. Which month comes before April?

Have you got a calendar in your home? Have a look at it and talk about it to someone. Ask each other questions about it.

Remember the rhyme? Can you fill in the gaps?

30 days hath September, April, June and ?

All the rest have ?, except February alone

Which has ? days clear and 29 each leap year.

How did you do? Which questions were easy peasy and which were tricky? Why were they easy or tricky? What can you do to help you with the tricky questions?



Well done for trying your best.